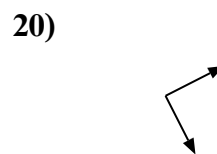
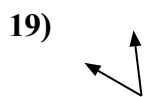
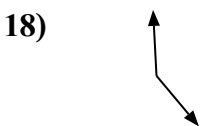
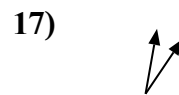
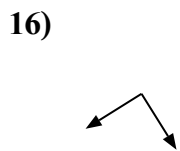
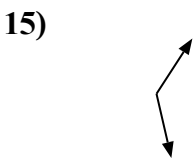
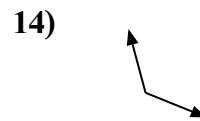
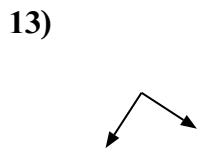
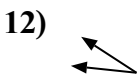
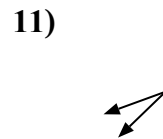
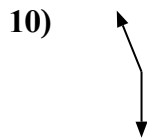
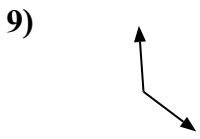
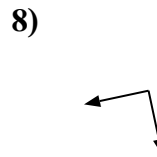
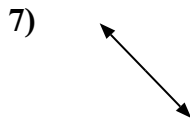
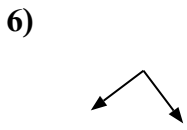
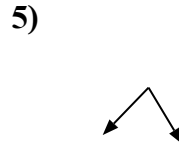

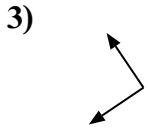
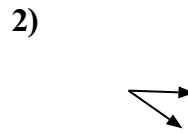
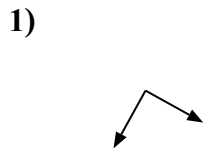
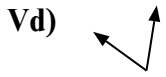




Xác định góc trong hình là 'nhỏ hơn', 'lớn hơn' hay 'bằng' góc 90° .



Câu trả lời

Vd. **Nhỏ hơn**

1. _____

2. _____

3. _____

4. _____

5. _____

6. _____

7. _____

8. _____

9. _____

10. _____

11. _____

12. _____

13. _____

14. _____

15. _____

16. _____

17. _____

18. _____

19. _____

20. _____



Xác định góc trong hình là 'nhỏ hơn', 'lớn hơn' hay 'bằng' góc 90° .

Vd)



1)



2)



Câu trả lời

Vd. **Nhỏ hơn**

3)



4)



5)



1. **Bằng**

2. **Nhỏ hơn**

3. **Bằng**

4. **Nhỏ hơn**

5. **Nhỏ hơn**

6. **Bằng**

7. **Lớn hơn**

8. **Bằng**

9. **Lớn hơn**

10. **Lớn hơn**

11. **Nhỏ hơn**

12. **Nhỏ hơn**

13. **Bằng**

14. **Lớn hơn**

15. **Lớn hơn**

16. **Bằng**

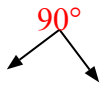
17. **Nhỏ hơn**

18. **Lớn hơn**

19. **Nhỏ hơn**

20. **Bằng**

6)



7)



8)



9)



10)



11)



12)



13)



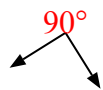
14)



15)



16)



17)



18)



19)



20)

