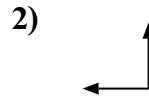
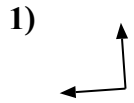


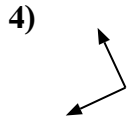
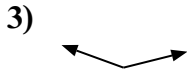


Xác định góc trong hình là 'nhỏ hơn', 'lớn hơn' hay 'bằng' góc 90°.



Câu trả lời

Vd. **Nhỏ hơn**

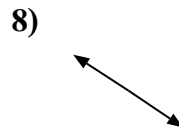
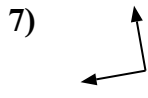


1. _____

2. _____

3. _____

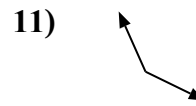
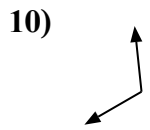
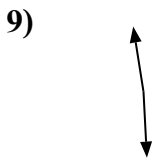
4. _____



5. _____

6. _____

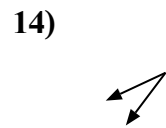
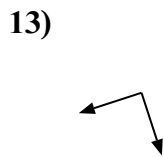
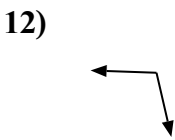
7. _____



8. _____

9. _____

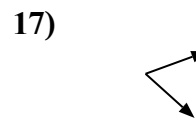
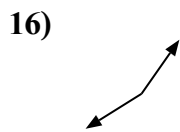
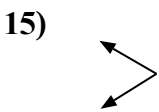
10. _____



11. _____

12. _____

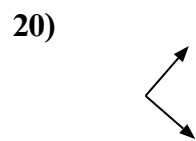
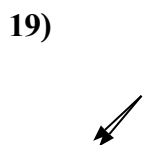
13. _____



14. _____

15. _____

16. _____



17. _____


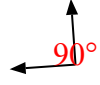

18. _____




19. _____



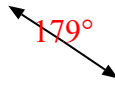
20. _____









Xác định góc trong hình là 'nhỏ hơn', 'lớn hơn' hay 'bằng' góc 90° .




Vd)  1)  2) 




3)  4)  5) 

6)  7)  8) 

9)  10)  11) 

12)  13)  14) 

15)  16)  17) 

18)  19)  20) 

Câu trả lời

- Vd. Nhỏ hơn
1. Bằng
2. Bằng
3. Lớn hơn
4. Bằng
5. Bằng
6. Nhỏ hơn
7. Bằng
8. Lớn hơn
9. Lớn hơn
10. Lớn hơn
11. Lớn hơn
12. Lớn hơn
13. Bằng
14. Nhỏ hơn
15. Nhỏ hơn
16. Lớn hơn
17. Nhỏ hơn
18. Nhỏ hơn
19. Nhỏ hơn
20. Bằng