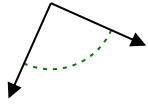




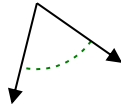
Xác định góc trong hình là nhọn, tù, vuông hay bù.

Câu trả lời

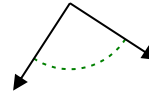
Vd)



1)



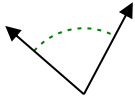
2)



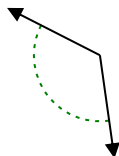
Vd.

Góc vuông

3)



4)



5)



1. _____

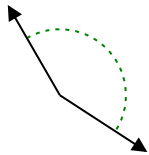
2. _____

3. _____

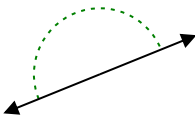
4. _____

5. _____

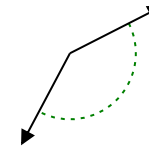
6)



7)



8)

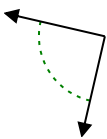


6. _____

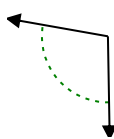
7. _____

8. _____

9)



10)



11)

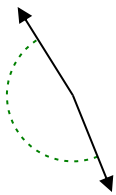


9. _____

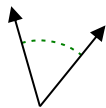
10. _____

11. _____

12)



13)



14)

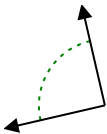


12. _____

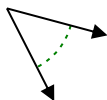
13. _____

14. _____

15)



16)



17)

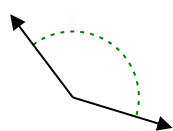


15. _____

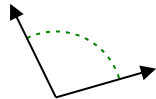
16. _____

17. _____

18)



19)



20)



18. _____

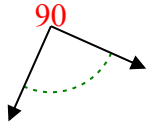
19. _____

20. _____

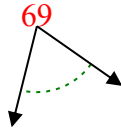


Xác định góc trong hình là nhọn, tù, vuông hay bù.

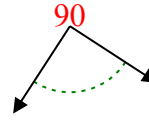
Vd)



1)



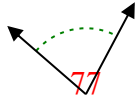
2)



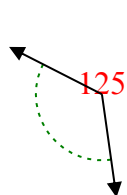
Vd.

Góc vuông

3)



4)



5)



1.

Góc nhọn

2.

Góc vuông

3.

Góc nhọn

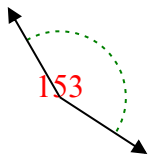
4.

Góc tù

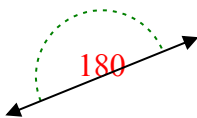
5.

Góc vuông

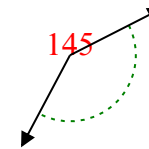
6)



7)



8)



6.

Góc tù

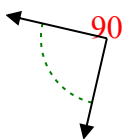
7.

Góc bẹt

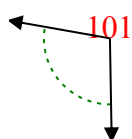
8.

Góc tù

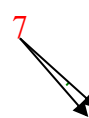
9)



10)



11)



9.

Góc vuông

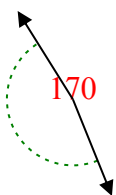
10.

Góc tù

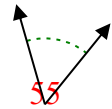
11.

Góc nhọn


12)



13)



14)



12.

Góc tù

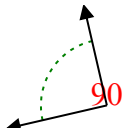
13.

Góc nhọn

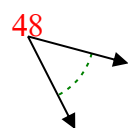
14.

Góc bẹt

15)



16)



17)



15.

Góc vuông

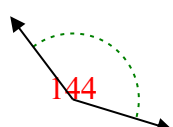
16.

Góc nhọn

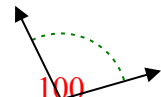
17.

Góc nhọn


18)



19)



20)



18.

Góc tù

19.

Góc tù

20.

Góc nhọn