



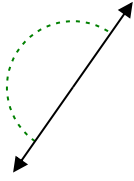
Xác định góc trong hình là nhọn, tù, vuông hay bù.

Câu trả lời

Vd)



1)



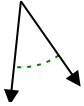
2)



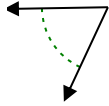
Vd.

Góc nhọn

3)



4)



5)



1.

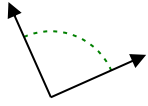
2.

3.

4.

5.

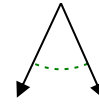
6)



7)



8)



6.

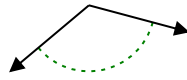
7.

8.

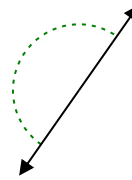
9)



10)



11)

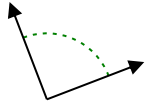


9.

10.

11.

12)



13)



14)



12.

13.

14.

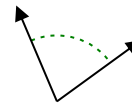
15)



16)



17)

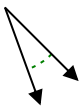


15.

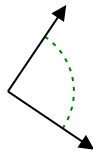
16.

17.

18)



19)



20)



18.

19.

20.



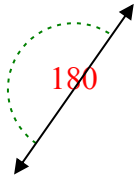
Xác định góc trong hình là nhọn, tù, vuông hay bù.

Câu trả lời

Vd)



1)



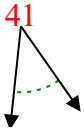
2)



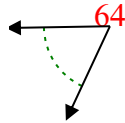
Vd.

Góc nhọn

3)



4)



5)



1.

Góc bẹt

2.

Góc tù

3.

Góc nhọn

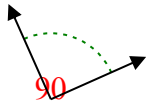
4.

Góc nhọn

5.

Góc vuông

6)



7)



8)



6.

Góc vuông

7.

Góc nhọn

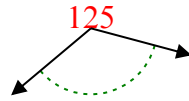
8.

Góc nhọn

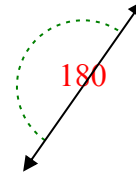
9)



10)



11)



9.

Góc tù

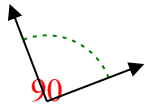
10.

Góc tù

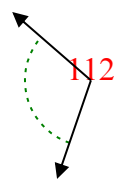
11.

Góc bẹt

12)



13)



14)



12.

Góc vuông

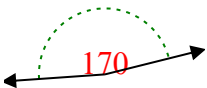
13.

Góc tù

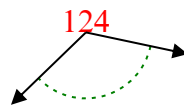
14.

Góc tù

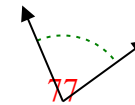
15)



16)



17)



15.

Góc tù

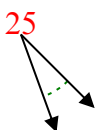
16.

Góc tù

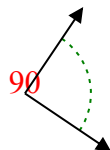
17.

Góc nhọn

18)



19)



20)



18.

Góc nhọn

19.

Góc vuông

20.

Góc nhọn