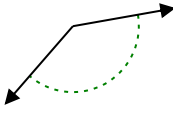




Xác định góc trong hình là nhọn, tù, vuông hay bù.

Câu trả lời

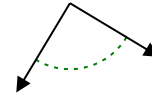
Vd)



1)

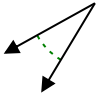


2)

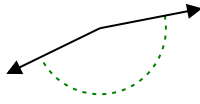


Vd. **Góc tù**

3)



4)



5)



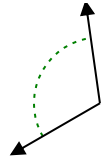
1. _____

2. _____

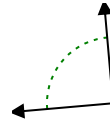
6)



7)



8)



3. _____

4. _____

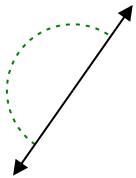
5. _____

6. _____

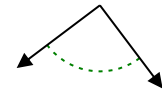
7. _____

8. _____

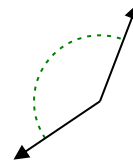
9)



10)



11)

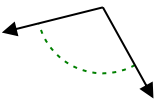


9. _____

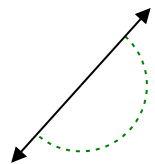
10. _____

11. _____

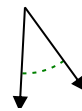
12)



13)



14)

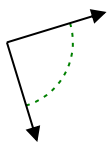


12. _____

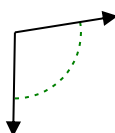
13. _____

14. _____

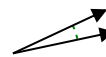
15)



16)



17)

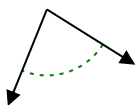


15. _____

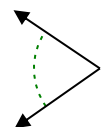
16. _____

17. _____

18)



19)



20)



18. _____

19. _____

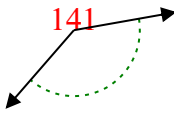
20. _____



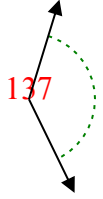
Xác định góc trong hình là nhọn, tù, vuông hay bù.

Câu trả lời

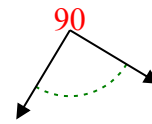
Vd)



1)



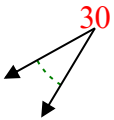
2)



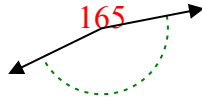
Vd.

Góc tù

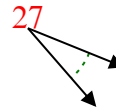
3)



4)



5)



1.

Góc tù

2.

Góc vuông

3.

Góc nhọn

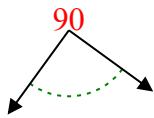
4.

Góc tù

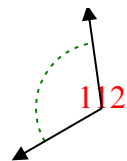
5.

Góc nhọn

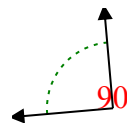
6)



7)



8)



6.

Góc vuông

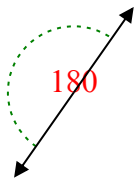
7.

Góc tù

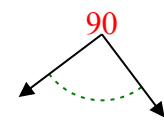
8.

Góc vuông

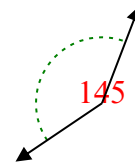
9)



10)



11)



9.

Góc bẹt

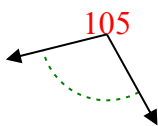
10.

Góc vuông

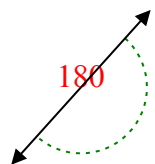
11.

Góc tù

12)



13)



14)



12.

Góc tù

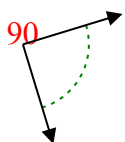
13.

Góc bẹt

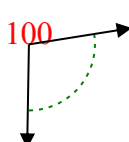
14.

Góc nhọn

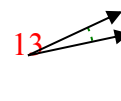
15)



16)



17)



15.

Góc vuông

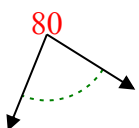
16.

Góc tù

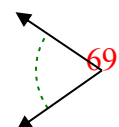
17.

Góc nhọn

18)



19)



20)



18.

Góc nhọn

19.

Góc nhọn

20.

Góc nhọn