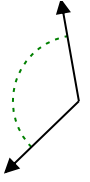




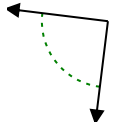
Xác định góc trong hình là nhọn, tù, vuông hay bù.

Câu trả lời

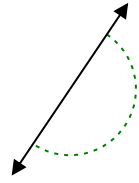
Vd)



1)



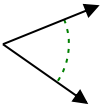
2)



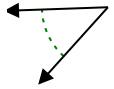
Vd.

Góc tù

3)



4)



5)



1.

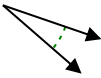
2.

3.

4.

5.

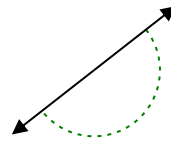
6)



7)



8)

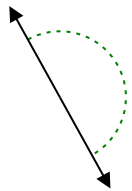


6.

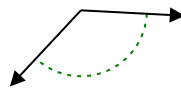
7.

8.

9)



10)



11)

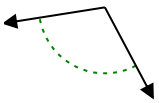


9.

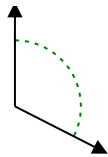
10.

11.

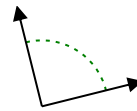
12)



13)



14)

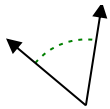


12.

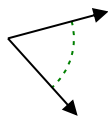
13.

14.

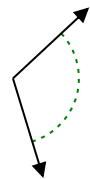
15)



16)



17)

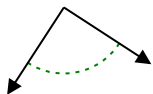


15.

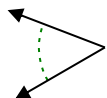
16.

17.

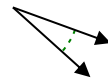
18)



19)



20)



18.

19.

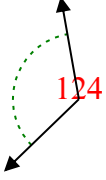
20.



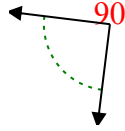
Xác định góc trong hình là nhọn, tù, vuông hay bù.

Câu trả lời

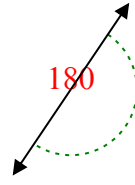
Vd)



1)



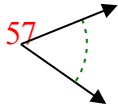
2)



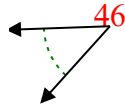
Vd.

Góc tù

3)



4)



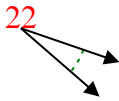
5)



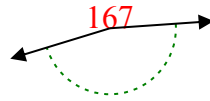
1.

Góc vuông

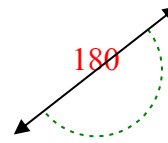
6)



7)



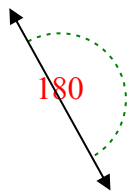
8)



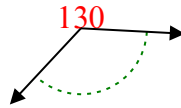
2.

Góc bẹt

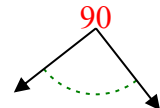
9)



10)



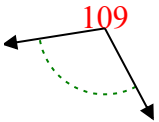
11)



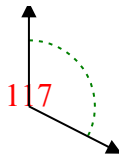
3.

Góc nhọn

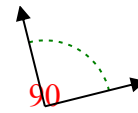
12)



13)



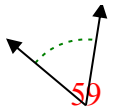
14)



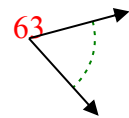
4.

Góc nhọn

15)



16)



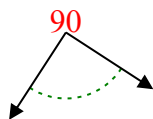
17)



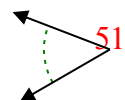
5.

Góc tù

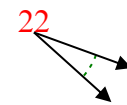
18)



19)



20)



6.

Góc nhọn

7.

Góc tù

8.

Góc bẹt

9.

Góc bẹt

10.

Góc tù

11.

Góc vuông

12.

Góc tù

13.

Góc tù

14.

Góc vuông

15.

Góc nhọn

16.

Góc nhọn

17.

Góc tù

18.

Góc vuông

19.

Góc nhọn

20.

Góc nhọn