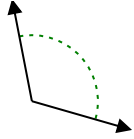




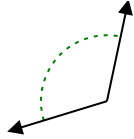
Xác định góc trong hình là nhọn, tù, vuông hay bù.

**Câu trả lời**

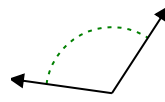
Vd)



1)



2)



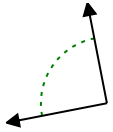
Vd.

**Góc tù**

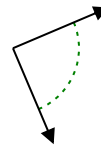
3)



4)



5)



1.

2.

3.

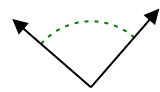
4.

5.

6)



7)



8)



6.

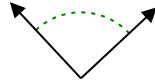
7.

8.

9)



10)



11)



9.

10.

11.

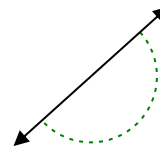
12)



13)



14)

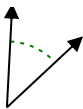


12.

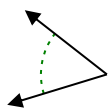
13.

14.

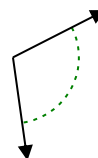
15)



16)



17)

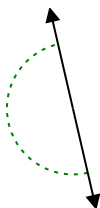


15.

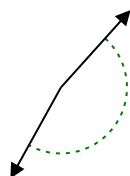
16.

17.

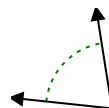
18)



19)



20)



18.

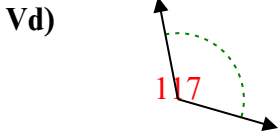
19.

20.

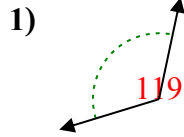


Xác định góc trong hình là nhọn, tù, vuông hay bù.

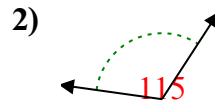
Câu trả lời



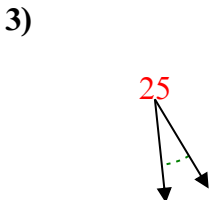
Vd. Góc tù



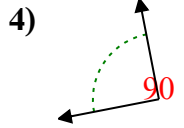
1. Góc tù



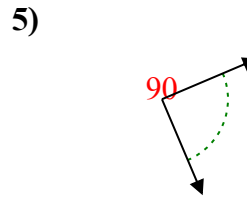
2. Góc tù



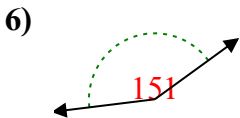
3. Góc nhọn



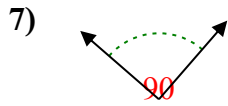
4. Góc vuông



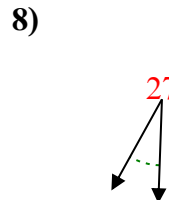
5. Góc vuông



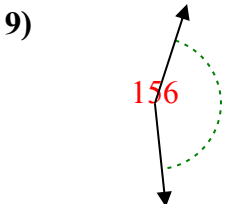
6. Góc tù



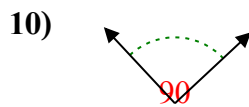
7. Góc vuông



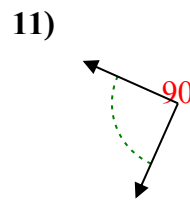
8. Góc nhọn



9. Góc tù



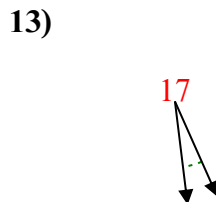
10. Góc vuông



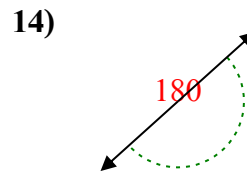
11. Góc vuông



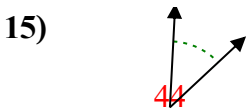
12. Góc nhọn



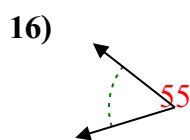
13. Góc nhọn



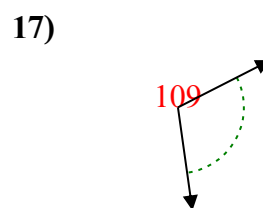
14. Góc bẹt



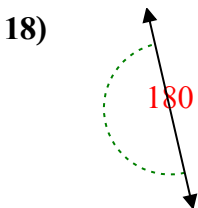
15. Góc nhọn



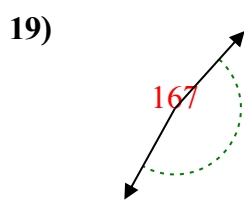
16. Góc nhọn



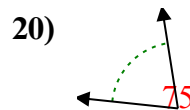
17. Góc tù



18. Góc bẹt



19. Góc tù



20. Góc nhọn