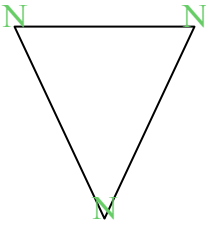


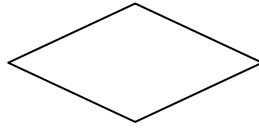


Đếm số góc nhọn, góc tù và góc vuông trong mỗi hình.

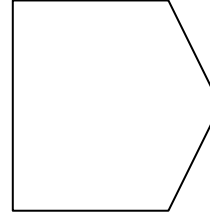
Vd)



1)



2)



**Câu trả lời**

N T V

Vd. 3 0 0

1. \_\_\_\_\_

2. \_\_\_\_\_

3. \_\_\_\_\_

4. \_\_\_\_\_

5. \_\_\_\_\_

6. \_\_\_\_\_

7. \_\_\_\_\_

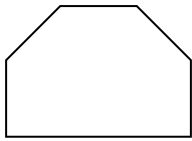
8. \_\_\_\_\_

9. \_\_\_\_\_

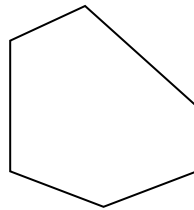
10. \_\_\_\_\_

11. \_\_\_\_\_

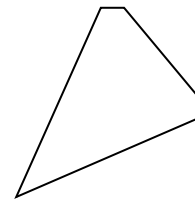
3)




4)



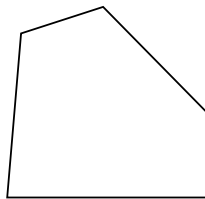
5)



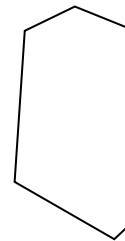
6)



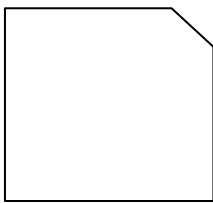
7)



8)



9)



10)



11)

