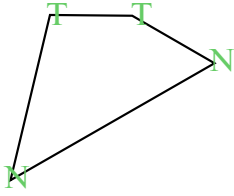




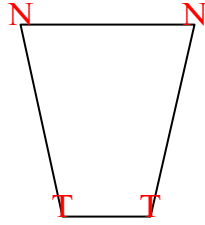


Đếm số góc nhọn, góc tù và góc vuông trong mỗi hình.


Vd)



1)



2)



**Câu trả lời**

N T V

Vd. 2 2 0

1. 2 2 0

2. 0 0 4

3. 0 2 3

4. 0 6 0

5. 0 6 0

6. 0 3 2

7. 1 1 2

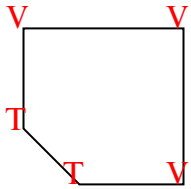
8. 0 7 0

9. 3 0 0

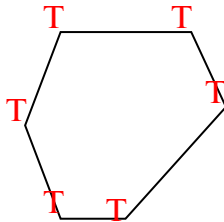
10. 0 4 2

11. 0 8 0

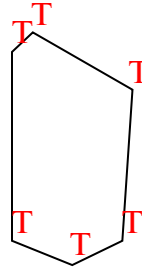
3)



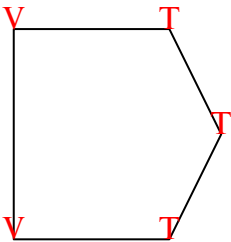
4)



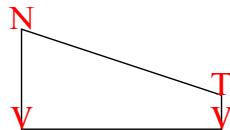
5)



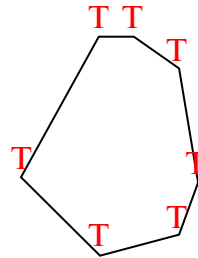
6)



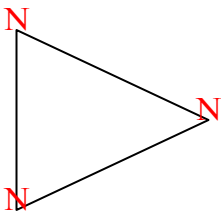
7)



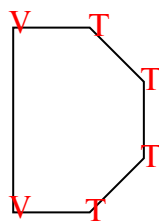
8)



9)



10)



11)

