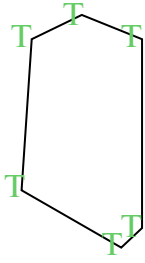


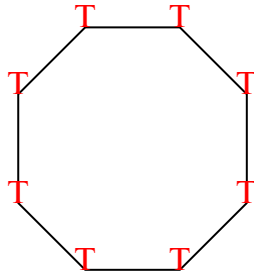


Đếm số góc nhọn, góc tù và góc vuông trong mỗi hình.

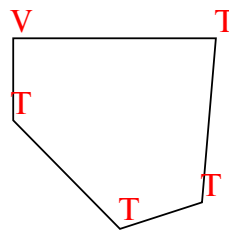
Vd)



1)



2)



Câu trả lời

N T V

Vd. 0 6 0

1. 0 8 0

2. 0 4 1

3. 2 2 0

4. 1 2 1

5. 0 4 2

6. 0 0 4

7. 0 7 0

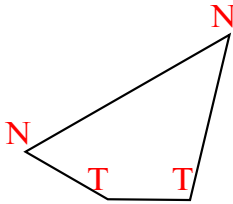
8. 0 3 2

9. 0 6 0

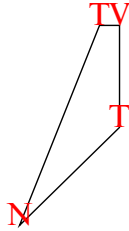
10. 1 1 2

11. 2 0 1

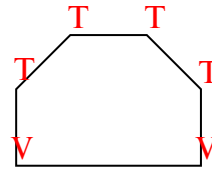
3)



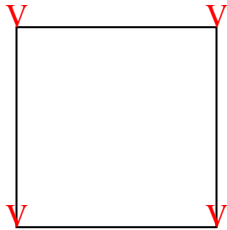
4)



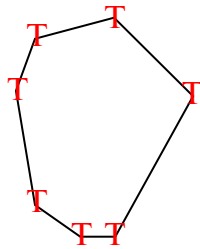
5)



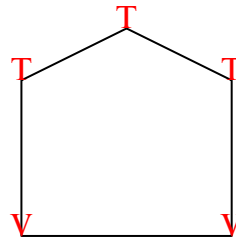
6)



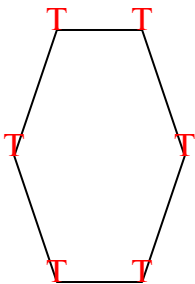
7)



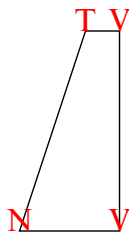
8)



9)



10)



11)

