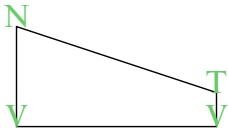


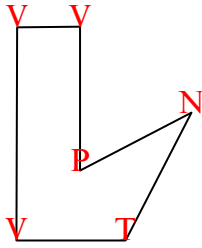


Đếm số góc nhọn, góc tù, góc vuông và góc phản trong mỗi hình.

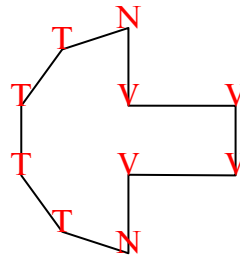
Vd)



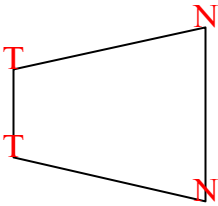
1)



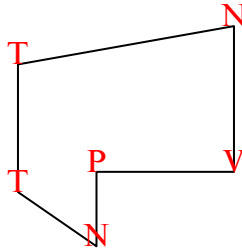
2)



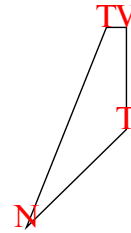
3)



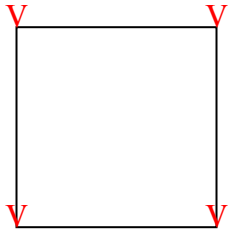
4)



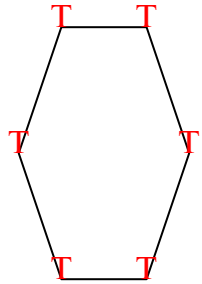
5)



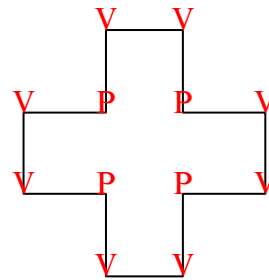
6)



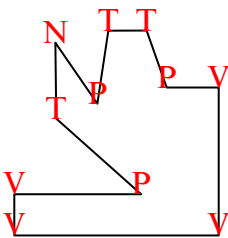
7)



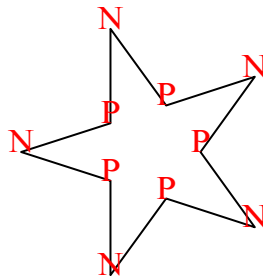
8)



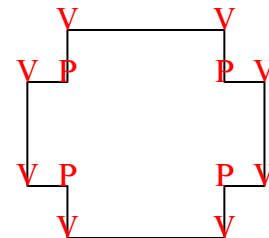
9)



10)



11)



Câu trả lời

N T V P

Vd. 1 1 2 0

1. 1 1 3 1

2. 2 4 4 0

3. 2 2 0 0

4. 2 2 1 1

5. 1 2 1 0

6. 0 0 4 0

7. 0 6 0 0

8. 0 0 8 4

9. 1 3 4 3

10. 5 0 0 5

11. 0 0 8 4