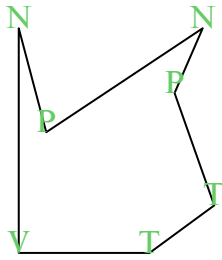


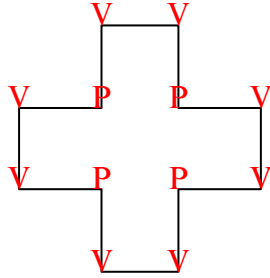


Đếm số góc nhọn, góc tù, góc vuông và góc phản trong mỗi hình.

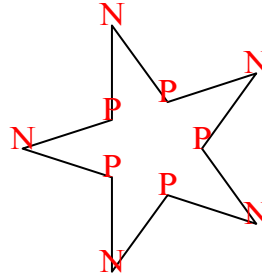
Vd)



1)



2)



Câu trả lời

N T V P

Vd. 2 2 1 2

1. 0 0 8 4

2. 5 0 0 5

3. 2 0 1 0

4. 1 2 4 2

5. 2 2 0 0

6. 2 2 0 1

7. 1 1 2 0

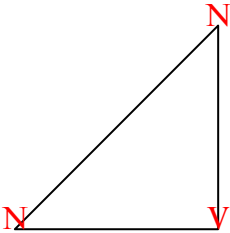
8. 1 2 1 0

9. 2 1 4 4

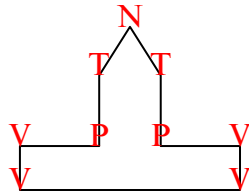
10. 4 1 0 3

11. 0 0 8 4

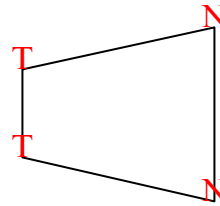
3)



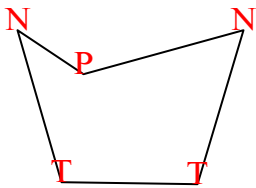
4)



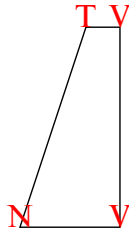
5)



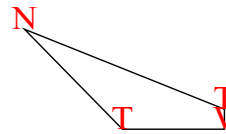
6)



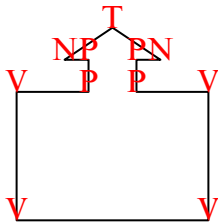
7)



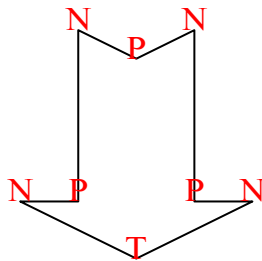
8)



9)



10)



11)

