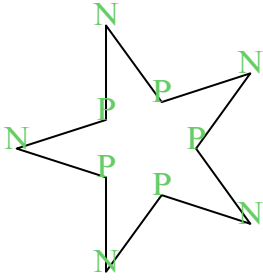




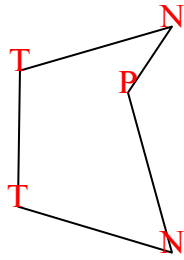


Đếm số góc nhọn, góc tù, góc vuông và góc phản trong mỗi hình.

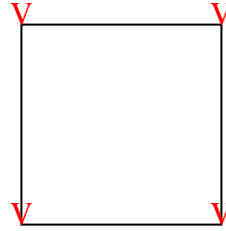
Vd)



1)



2)



**Câu trả lời**

N T V P

Vd. 5 0 0 5

1. 2 2 0 1

2. 0 0 4 0

3. 4 2 0 4

4. 1 1 3 1

5. 2 1 4 4

6. 2 1 1 1

7. 1 2 4 2

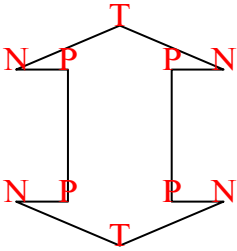
8. 2 3 0 1

9. 0 0 4 0

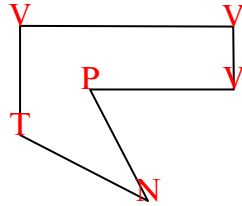
10. 2 4 1 2

11. 2 0 1 0

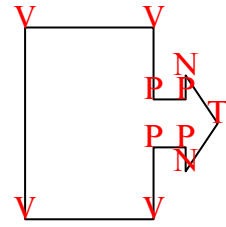
3)



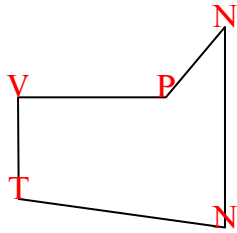
4)



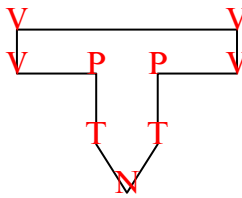
5)



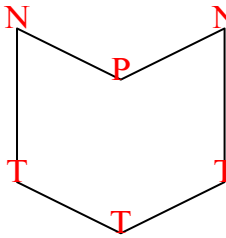
6)



7)



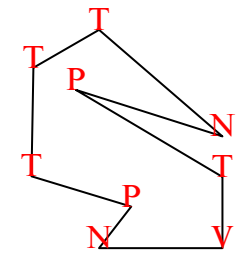
8)



9)



10)



11)

