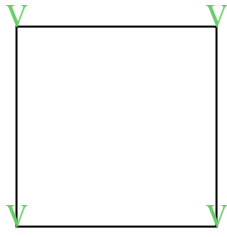




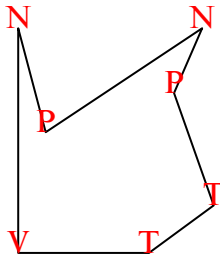


Đếm số góc nhọn, góc tù, góc vuông và góc phản trong mỗi hình.

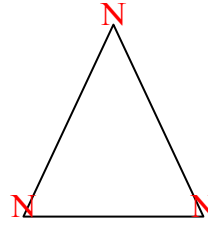
Vd)



1)



2)



**Câu trả lời**

N T V P

Vd. 0 0 4 0

1. 2 2 1 2

2. 3 0 0 0

3. 2 1 2 2

4. 4 0 0 3

5. 1 1 3 1

6. 2 1 1 1

7. 2 4 4 0

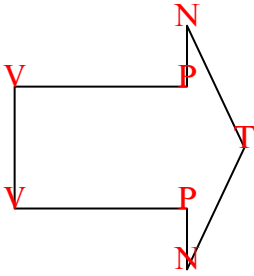
8. 1 1 2 0

9. 0 8 0 0

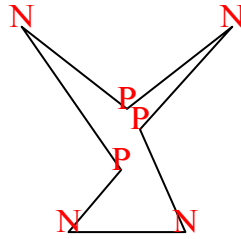
10. 0 2 3 0

11. 0 0 4 0

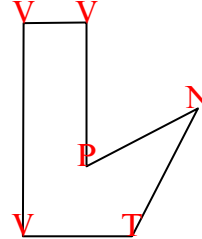
3)



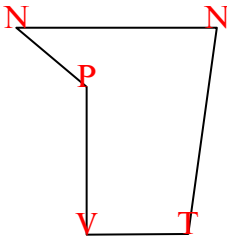
4)



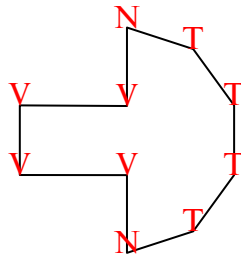
5)



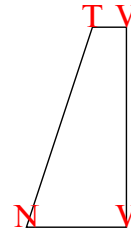
6)



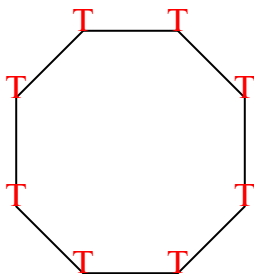
7)



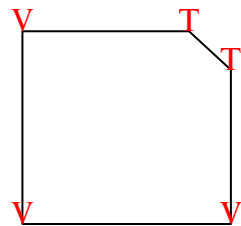
8)



9)



10)



11)

