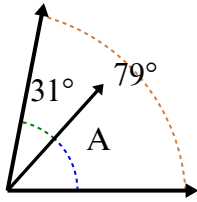


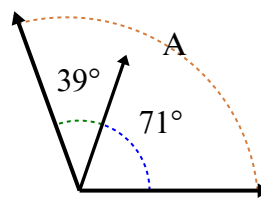


Xác định giá trị của 'A'.

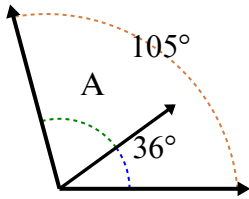
1)



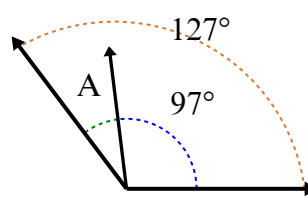
2)



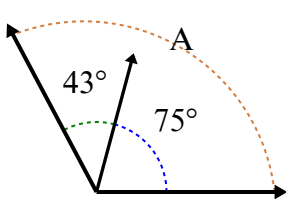
3)



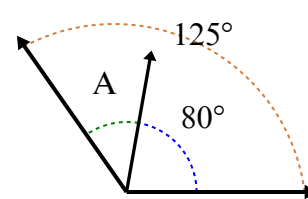
4)



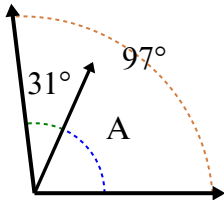
5)



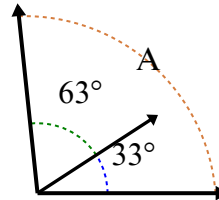
6)



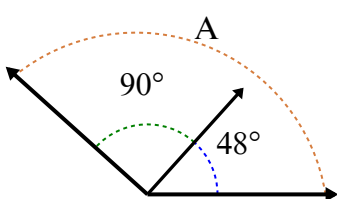
7)



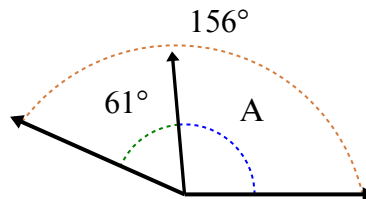
8)



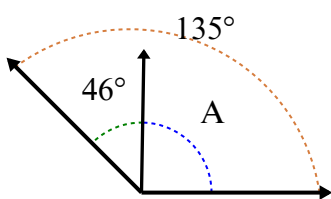
9)



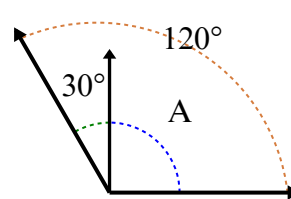
10)



11)



12)



Câu trả lời

1. _____

2. _____

3. _____

4. _____

5. _____

6. _____

7. _____

8. _____

9. _____

10. _____

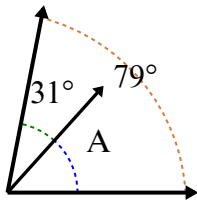
11. _____

12. _____

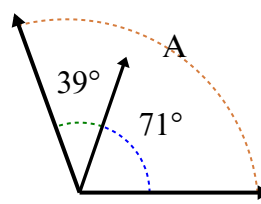


Xác định giá trị của 'A'.

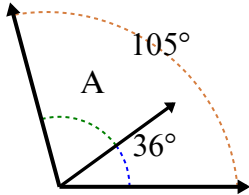
1)



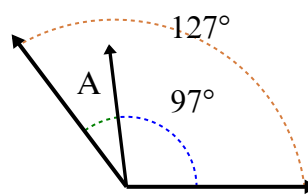
2)



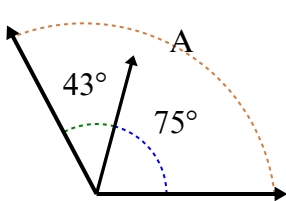
3)



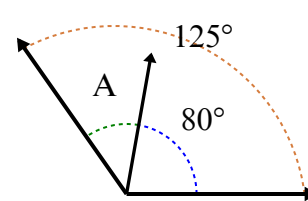
4)



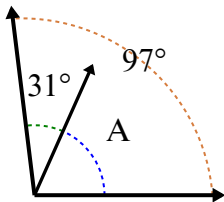
5)



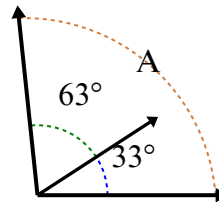
6)



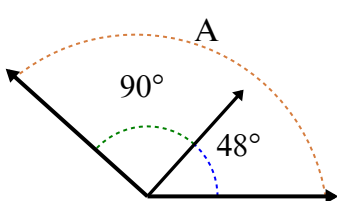
7)



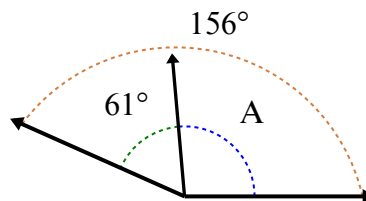
8)



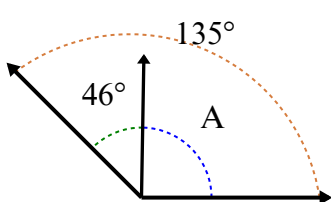
9)



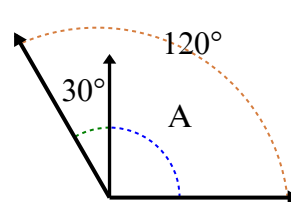
10)



11)



12)



Câu trả lời

1. **48°**

2. **110°**

3. **69°**

4. **30°**

5. **118°**

6. **45°**

7. **66°**

8. **96°**

9. **138°**

10. **95°**

11. **89°**

12. **90°**