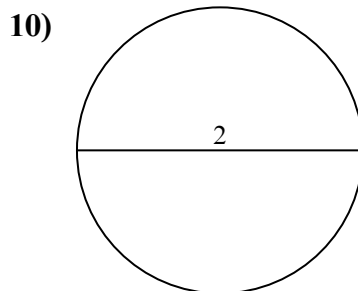
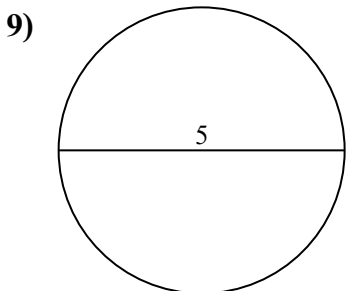
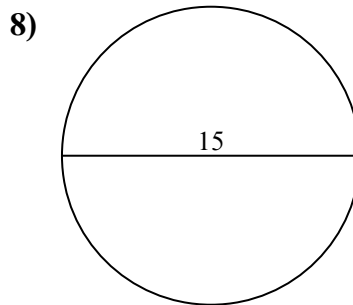
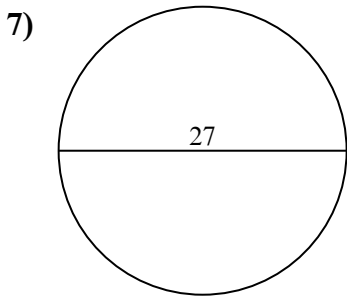
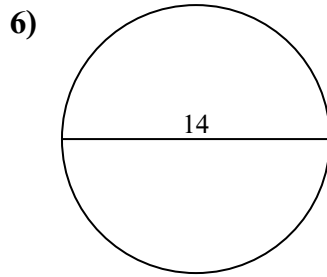
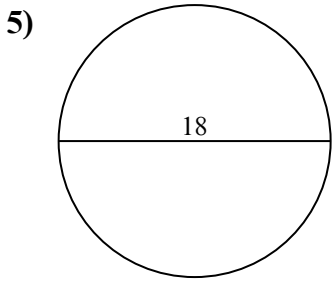
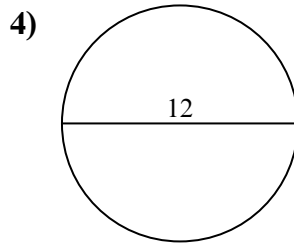
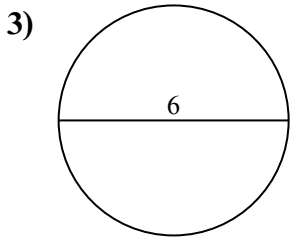
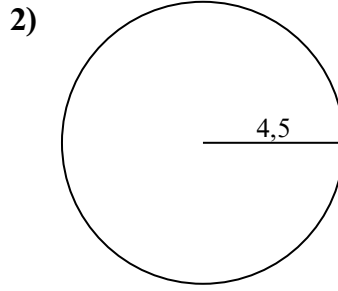
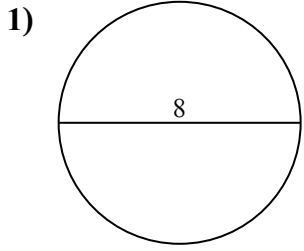




Tìm diện tích và chu vi của mỗi hình tròn. Các hình tròn không đúng tỉ lệ.

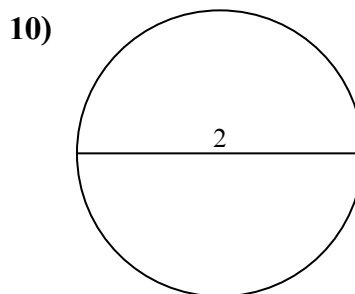
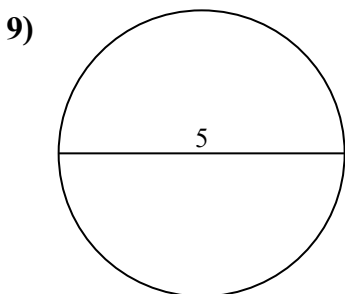
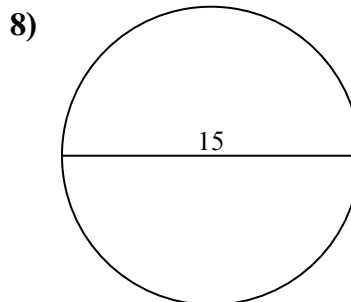
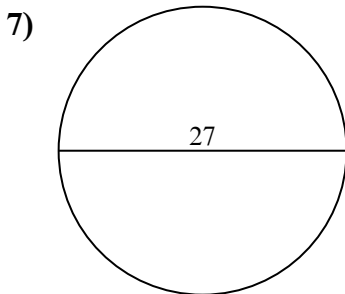
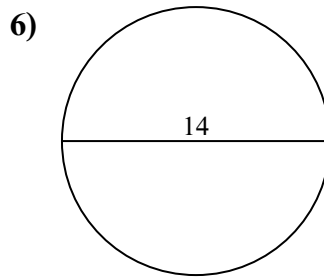
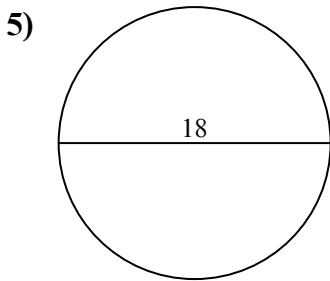
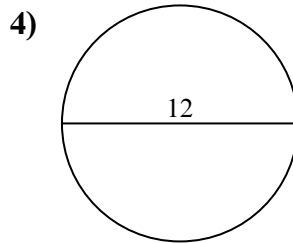
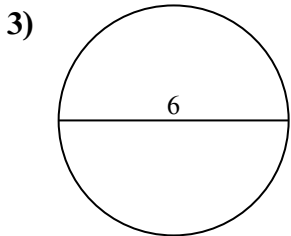
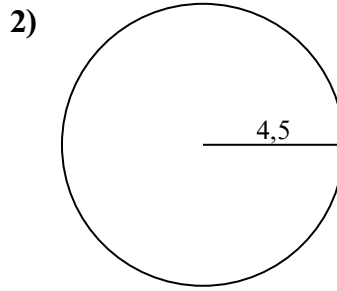
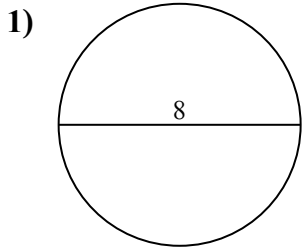


Câu trả lời

- 1a. _____
- 1c. _____
- 2a. _____
- 2c. _____
- 3a. _____
- 3c. _____
- 4a. _____
- 4c. _____
- 5a. _____
- 5c. _____
- 6a. _____
- 6c. _____
- 7a. _____
- 7c. _____
- 8a. _____
- 8c. _____
- 9a. _____
- 9c. _____
- 10a. _____
- 10c. _____



Tìm diện tích và chu vi của mỗi hình tròn. Các hình tròn không đúng tỉ lệ.



Câu trả lời

1a. 50,27 cm²

1c. 25,13 cm

2a. 63,62 cm²

2c. 28,27 cm

3a. 28,27 cm²

3c. 18,85 cm

4a. 113,1 cm²

4c. 37,7 cm

5a. 254,47 cm²

5c. 56,55 cm

6a. 153,94 cm²

6c. 43,98 cm

7a. 572,56 cm²

7c. 84,82 cm

8a. 176,71 cm²

8c. 47,12 cm

9a. 19,63 cm²

9c. 15,71 cm

10a. 3,14 cm²

10c. 6,28 cm



$19,63 \text{ cm}^2$	$3,14 \text{ cm}^2$	$572,56 \text{ cm}^2$	$18,85 \text{ cm}$	$84,82 \text{ cm}$
$47,12 \text{ cm}$	$28,27 \text{ cm}$	$6,28 \text{ cm}$	$153,94 \text{ cm}^2$	$254,47 \text{ cm}^2$
$28,27 \text{ cm}^2$	$37,7 \text{ cm}$	$43,98 \text{ cm}$	$56,55 \text{ cm}$	$25,13 \text{ cm}$
$50,27 \text{ cm}^2$	$15,71 \text{ cm}$	$63,62 \text{ cm}^2$	$176,71 \text{ cm}^2$	$113,1 \text{ cm}^2$

