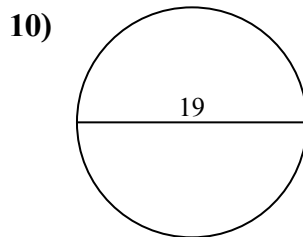
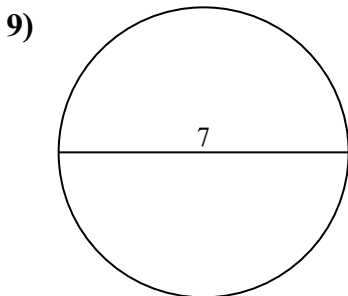
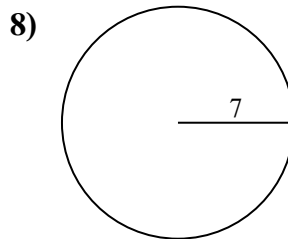
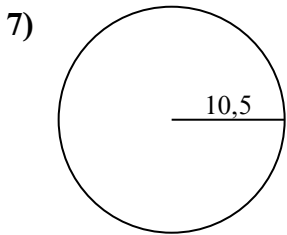
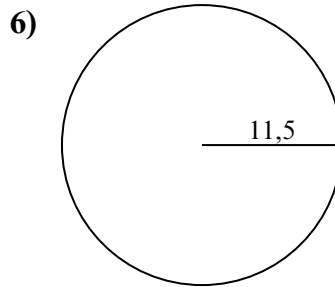
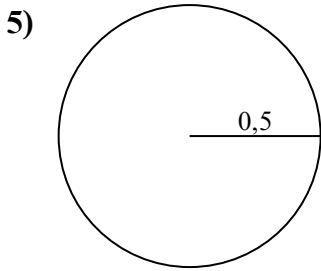
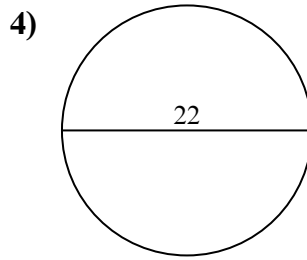
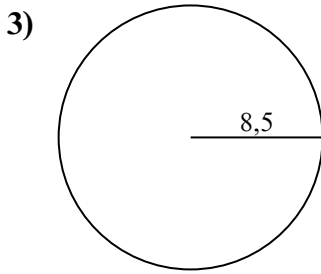
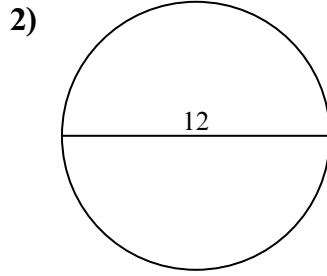
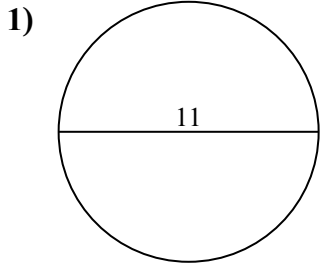




Tìm diện tích và chu vi của mỗi hình tròn. Các hình tròn không đúng tỉ lệ.



Câu trả lời

1a. _____

1c. _____

2a. _____

2c. _____

3a. _____

3c. _____

4a. _____

4c. _____

5a. _____

5c. _____

6a. _____

6c. _____

7a. _____

7c. _____

8a. _____

8c. _____

9a. _____

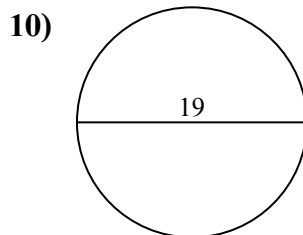
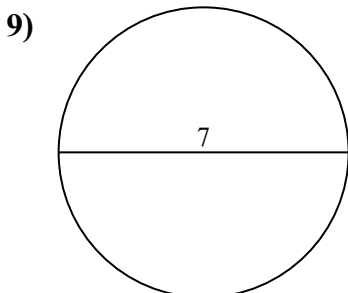
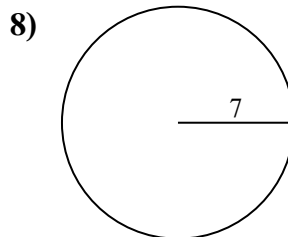
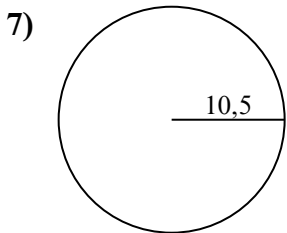
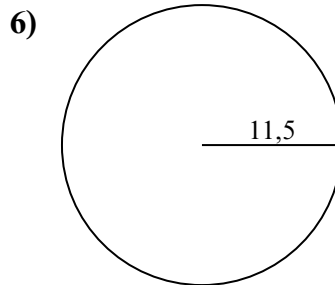
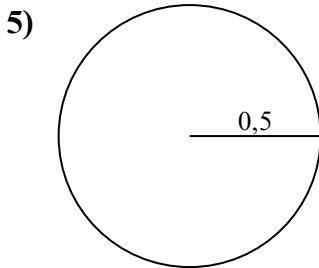
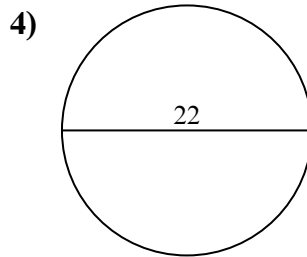
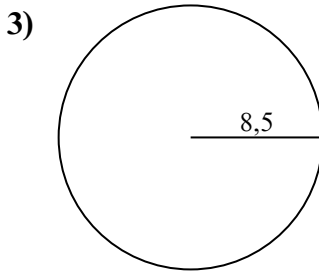
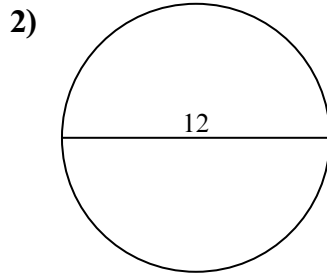
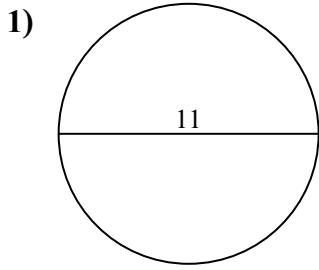
9c. _____

10a. _____

10c. _____



Tìm diện tích và chu vi của mỗi hình tròn. Các hình tròn không đúng tỉ lệ.



Câu trả lời

1a. 95,03 cm²

1c. 34,56 cm

2a. 113,1 cm²

2c. 37,7 cm

3a. 226,98 cm²

3c. 53,41 cm

4a. 380,13 cm²

4c. 69,12 cm

5a. 0,79 cm²

5c. 3,14 cm

6a. 415,48 cm²

6c. 72,26 cm

7a. 346,36 cm²

7c. 65,97 cm

8a. 153,94 cm²

8c. 43,98 cm

9a. 38,48 cm²

9c. 21,99 cm

10a. 283,53 cm²

10c. 59,69 cm



95,03 cm ²	72,26 cm	415,48 cm ²	59,69 cm	38,48 cm ²
0,79 cm ²	37,7 cm	69,12 cm	380,13 cm ²	21,99 cm
283,53 cm ²	346,36 cm ²	43,98 cm	113,1 cm ²	34,56 cm
53,41 cm	65,97 cm	153,94 cm ²	226,98 cm ²	3,14 cm

