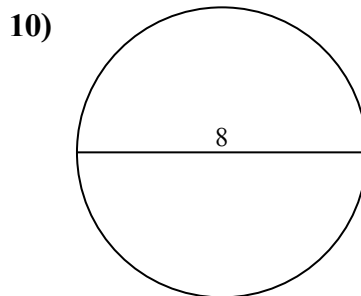
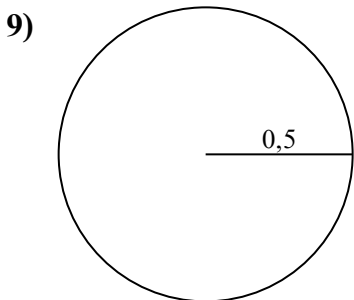
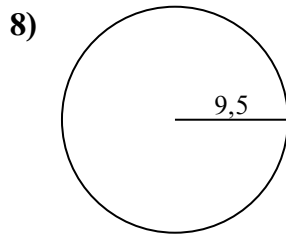
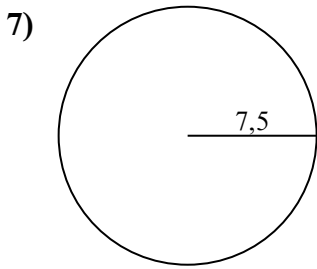
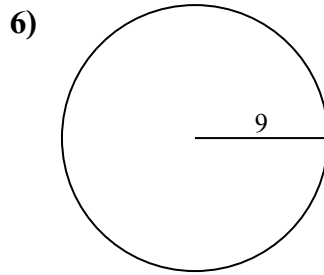
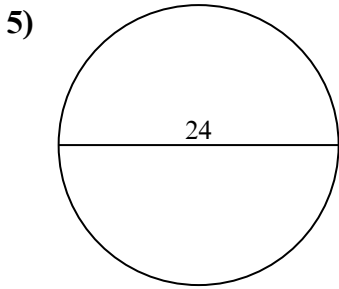
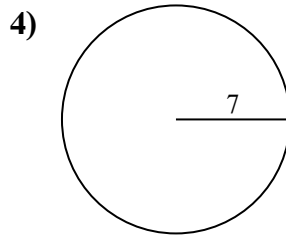
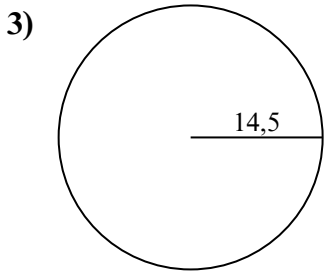
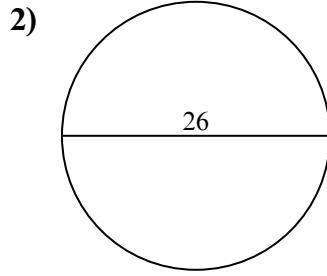
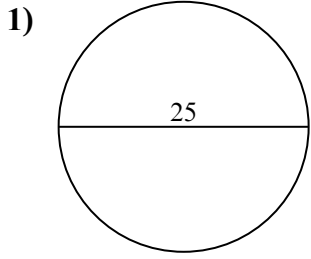




Tìm diện tích và chu vi của mỗi hình tròn. Các hình tròn không đúng tỉ lệ.



Câu trả lời

1a. _____

1c. _____

2a. _____

2c. _____

3a. _____

3c. _____

4a. _____

4c. _____

5a. _____

5c. _____

6a. _____

6c. _____

7a. _____

7c. _____

8a. _____

8c. _____

9a. _____

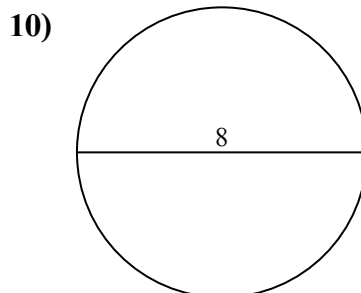
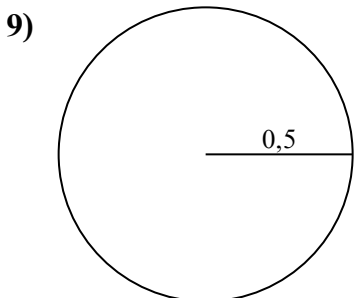
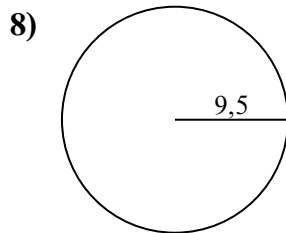
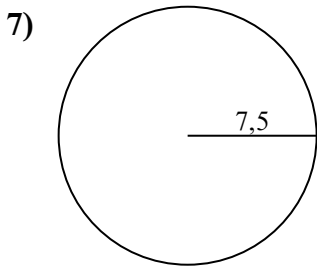
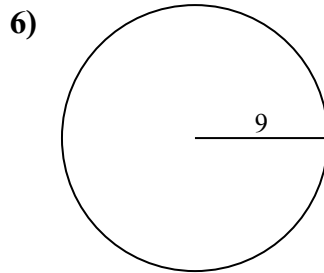
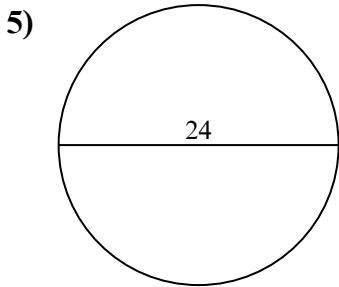
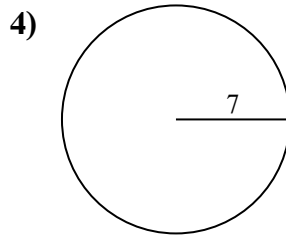
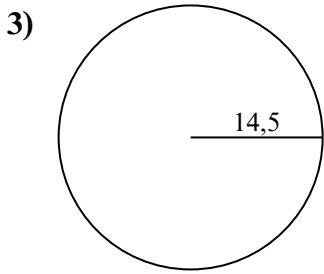
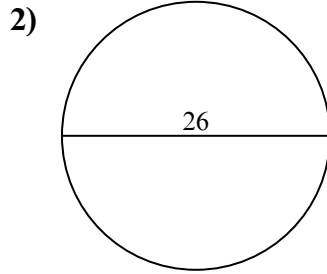
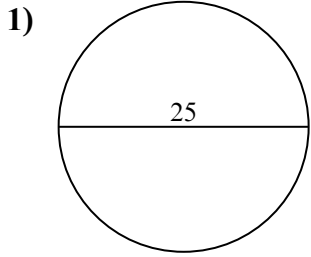
9c. _____

10a. _____

10c. _____



Tìm diện tích và chu vi của mỗi hình tròn. Các hình tròn không đúng tỉ lệ.



Câu trả lời

1a. 490,87 cm²

1c. 78,54 cm

2a. 530,93 cm²

2c. 81,68 cm

3a. 660,52 cm²

3c. 91,11 cm

4a. 153,94 cm²

4c. 43,98 cm

5a. 452,39 cm²

5c. 75,4 cm

6a. 254,47 cm²

6c. 56,55 cm

7a. 176,71 cm²

7c. 47,12 cm

8a. 283,53 cm²

8c. 59,69 cm

9a. 0,79 cm²

9c. 3,14 cm

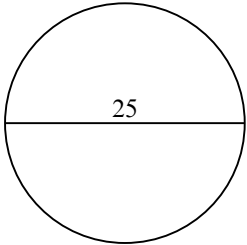
10a. 50,27 cm²

10c. 25,13 cm

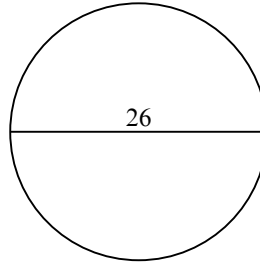


490,87 cm ²	25,13 cm	47,12 cm	153,94 cm ²	43,98 cm
660,52 cm ²	254,47 cm ²	91,11 cm	530,93 cm ²	81,68 cm
75,4 cm	78,54 cm	3,14 cm	50,27 cm ²	452,39 cm ²
56,55 cm	59,69 cm	0,79 cm ²	283,53 cm ²	176,71 cm ²

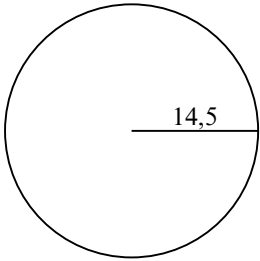
1)



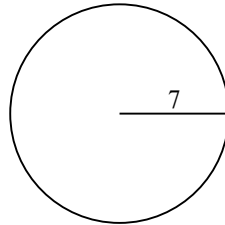
2)



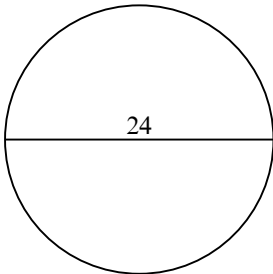
3)



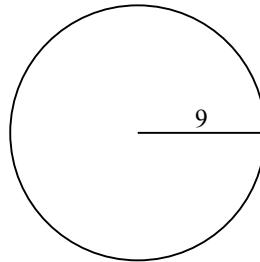
4)



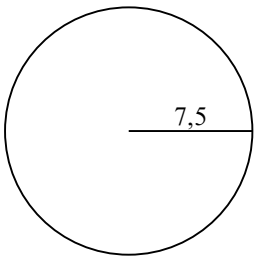
5)



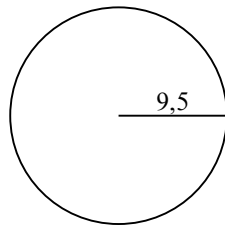
6)



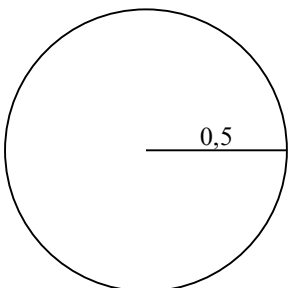
7)



8)



9)



10)

