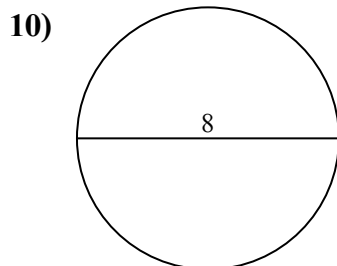
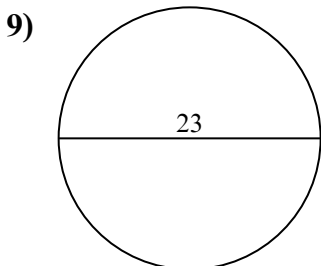
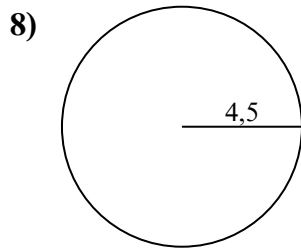
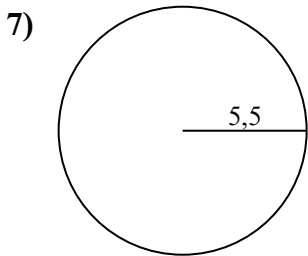
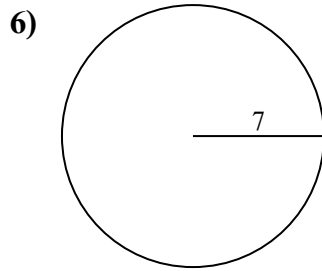
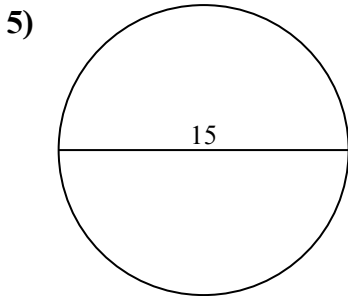
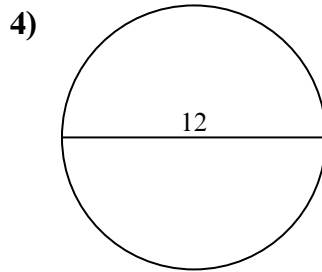
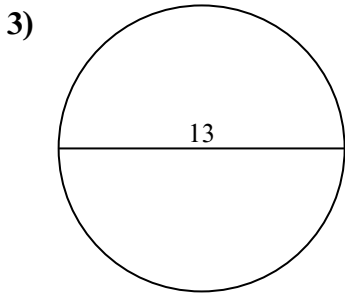
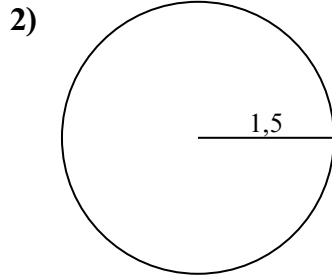
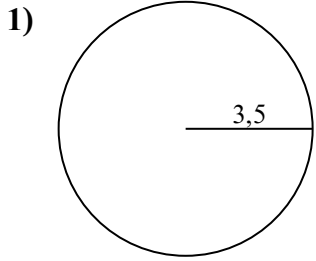




Tìm diện tích và chu vi của mỗi hình tròn. Các hình tròn không đúng tỉ lệ.



**Câu trả lời**

1a. \_\_\_\_\_

1c. \_\_\_\_\_

2a. \_\_\_\_\_

2c. \_\_\_\_\_

3a. \_\_\_\_\_

3c. \_\_\_\_\_

4a. \_\_\_\_\_

4c. \_\_\_\_\_

5a. \_\_\_\_\_

5c. \_\_\_\_\_

6a. \_\_\_\_\_

6c. \_\_\_\_\_

7a. \_\_\_\_\_

7c. \_\_\_\_\_

8a. \_\_\_\_\_

8c. \_\_\_\_\_

9a. \_\_\_\_\_

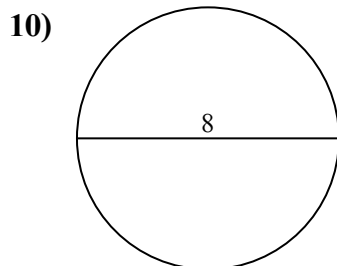
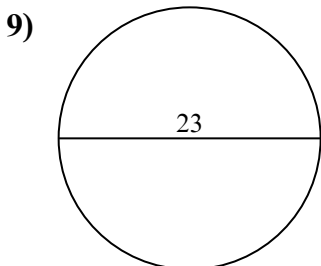
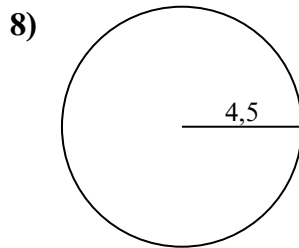
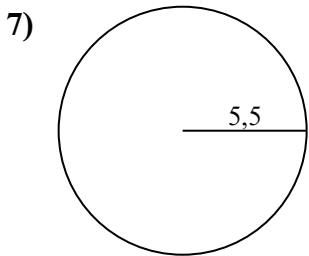
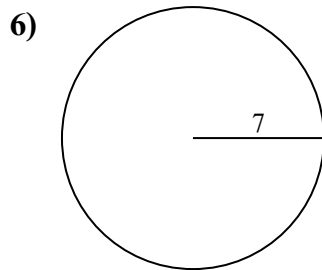
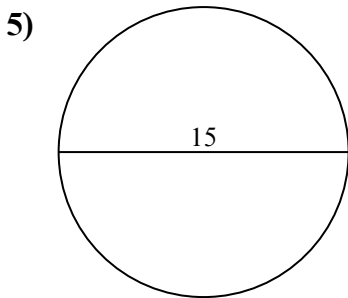
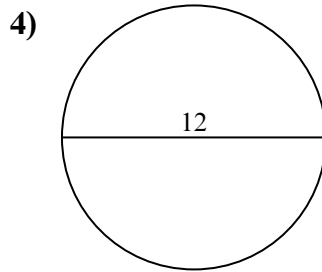
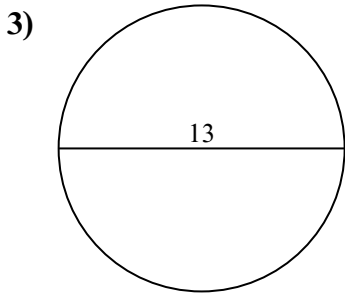
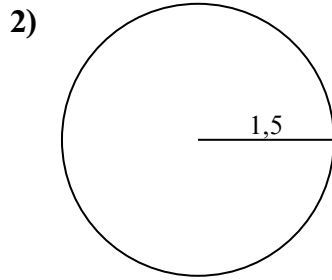
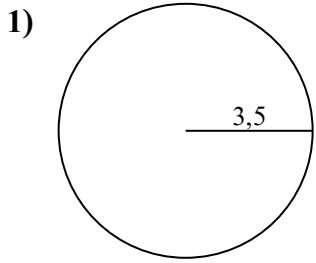
9c. \_\_\_\_\_

10a. \_\_\_\_\_

10c. \_\_\_\_\_



Tìm diện tích và chu vi của mỗi hình tròn. Các hình tròn không đúng tỉ lệ.



**Câu trả lời**

1a. 38,48 cm<sup>2</sup>

1c. 21,99 cm

2a. 7,07 cm<sup>2</sup>

2c. 9,42 cm

3a. 132,73 cm<sup>2</sup>

3c. 40,84 cm

4a. 113,1 cm<sup>2</sup>

4c. 37,7 cm

5a. 176,71 cm<sup>2</sup>

5c. 47,12 cm

6a. 153,94 cm<sup>2</sup>

6c. 43,98 cm

7a. 95,03 cm<sup>2</sup>

7c. 34,56 cm

8a. 63,62 cm<sup>2</sup>

8c. 28,27 cm

9a. 415,48 cm<sup>2</sup>

9c. 72,26 cm

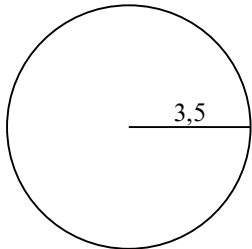
10a. 50,27 cm<sup>2</sup>

10c. 25,13 cm

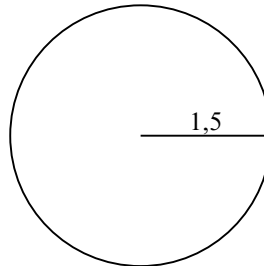


176,71 cm <sup>2</sup>	50,27 cm <sup>2</sup>	415,48 cm <sup>2</sup>	7,07 cm <sup>2</sup>	34,56 cm
95,03 cm <sup>2</sup>	43,98 cm	25,13 cm	9,42 cm	28,27 cm
72,26 cm	47,12 cm	63,62 cm <sup>2</sup>	38,48 cm <sup>2</sup>	153,94 cm <sup>2</sup>
37,7 cm	21,99 cm	113,1 cm <sup>2</sup>	40,84 cm	132,73 cm <sup>2</sup>

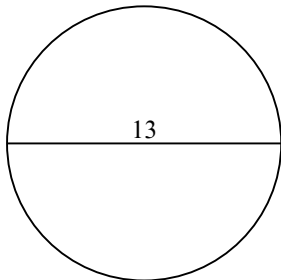
1)



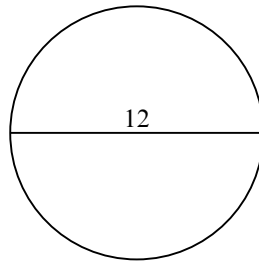
2)



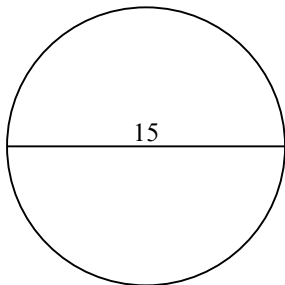
3)



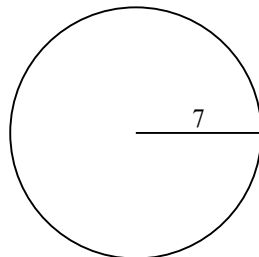
4)



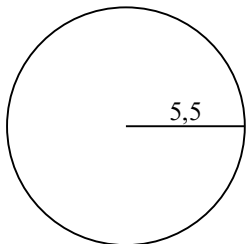
5)



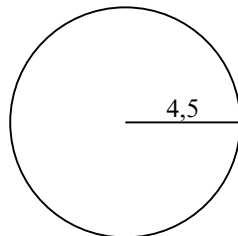
6)



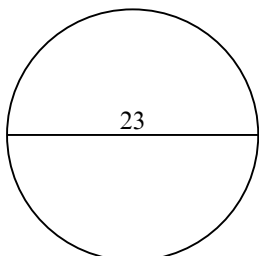
7)



8)



9)



10)

