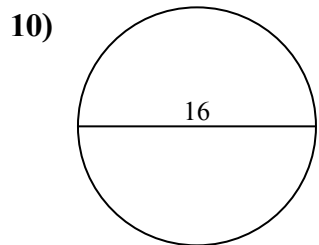
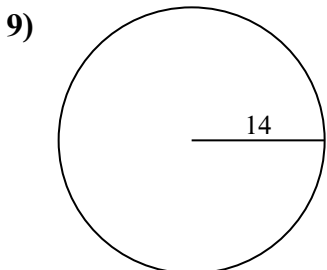
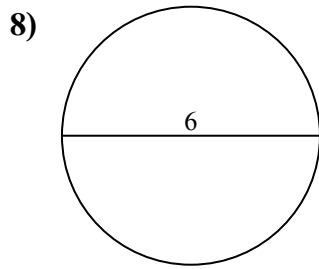
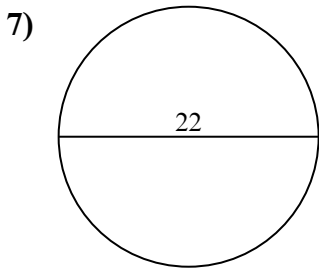
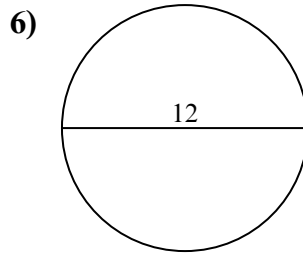
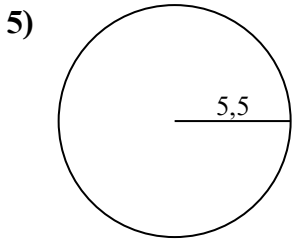
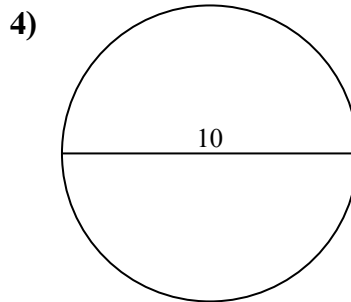
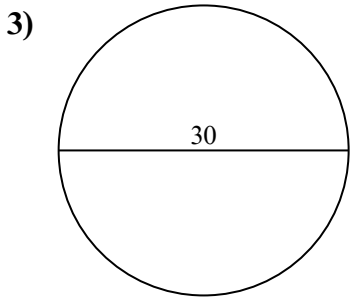
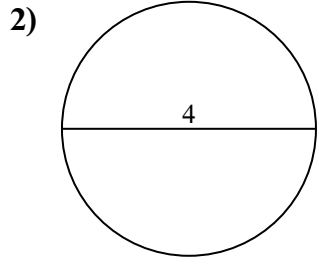
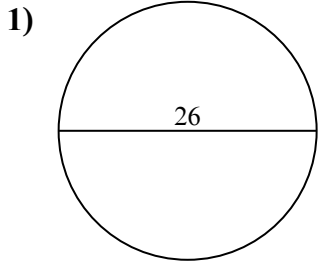




Tìm diện tích và chu vi của mỗi hình tròn. Các hình tròn không đúng tỉ lệ.

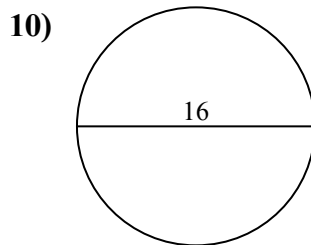
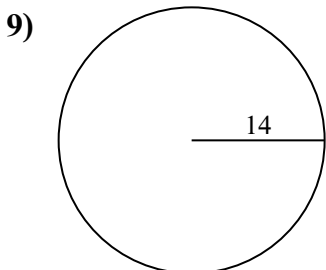
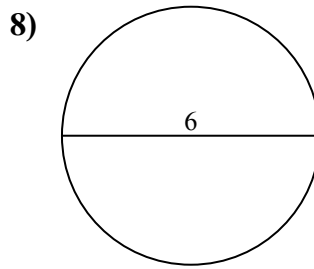
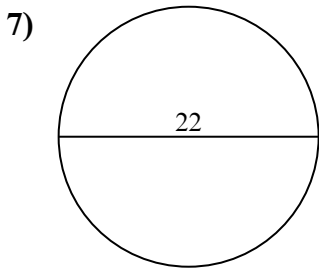
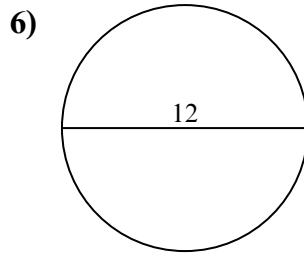
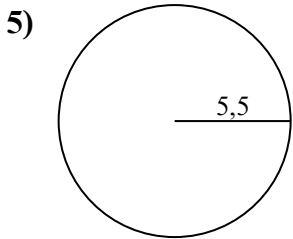
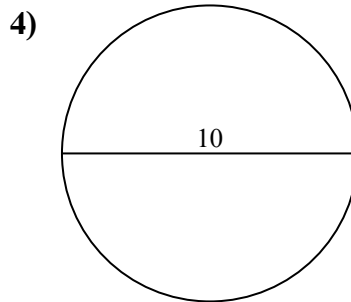
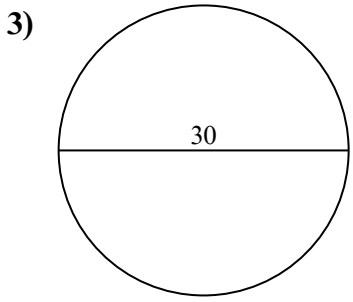
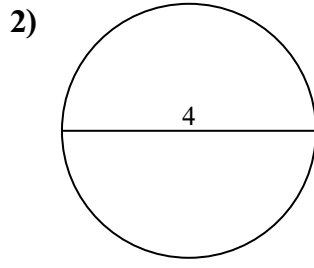
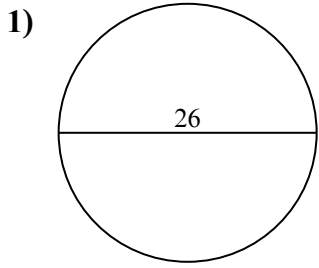


**Câu trả lời**

- 1a. \_\_\_\_\_
- 1c. \_\_\_\_\_
- 2a. \_\_\_\_\_
- 2c. \_\_\_\_\_
- 3a. \_\_\_\_\_
- 3c. \_\_\_\_\_
- 4a. \_\_\_\_\_
- 4c. \_\_\_\_\_
- 5a. \_\_\_\_\_
- 5c. \_\_\_\_\_
- 6a. \_\_\_\_\_
- 6c. \_\_\_\_\_
- 7a. \_\_\_\_\_
- 7c. \_\_\_\_\_
- 8a. \_\_\_\_\_
- 8c. \_\_\_\_\_
- 9a. \_\_\_\_\_
- 9c. \_\_\_\_\_
- 10a. \_\_\_\_\_
- 10c. \_\_\_\_\_



Tìm diện tích và chu vi của mỗi hình tròn. Các hình tròn không đúng tỉ lệ.



**Câu trả lời**

1a. **530,93 cm<sup>2</sup>**

1c. **81,68 cm**

2a. **12,57 cm<sup>2</sup>**

2c. **12,57 cm**

3a. **706,86 cm<sup>2</sup>**

3c. **94,25 cm**

4a. **78,54 cm<sup>2</sup>**

4c. **31,42 cm**

5a. **95,03 cm<sup>2</sup>**

5c. **34,56 cm**

6a. **113,1 cm<sup>2</sup>**

6c. **37,7 cm**

7a. **380,13 cm<sup>2</sup>**

7c. **69,12 cm**

8a. **28,27 cm<sup>2</sup>**

8c. **18,85 cm**

9a. **615,75 cm<sup>2</sup>**

9c. **87,96 cm**

10a. **201,06 cm<sup>2</sup>**

10c. **50,27 cm**



$95,03 \text{ cm}^2$	$37,7 \text{ cm}$	$706,86 \text{ cm}^2$	$201,06 \text{ cm}^2$	$380,13 \text{ cm}^2$
$81,68 \text{ cm}$	$94,25 \text{ cm}$	$530,93 \text{ cm}^2$	$87,96 \text{ cm}$	$34,56 \text{ cm}$
$18,85 \text{ cm}$	$50,27 \text{ cm}$	$12,57 \text{ cm}^2$	$28,27 \text{ cm}^2$	$12,57 \text{ cm}$
$78,54 \text{ cm}^2$	$69,12 \text{ cm}$	$615,75 \text{ cm}^2$	$31,42 \text{ cm}$	$113,1 \text{ cm}^2$

