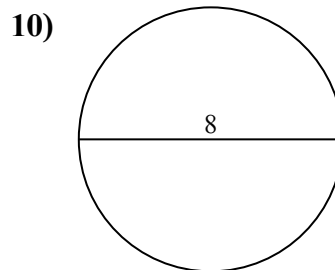
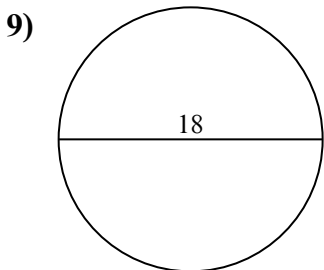
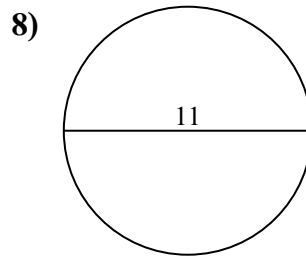
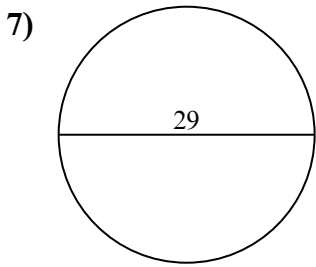
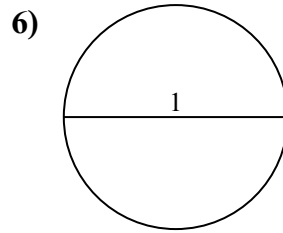
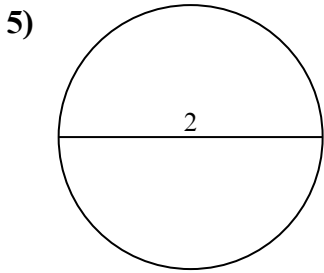
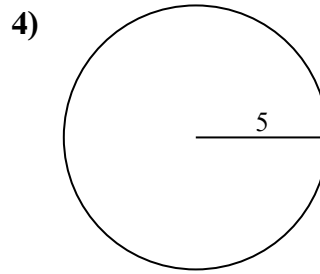
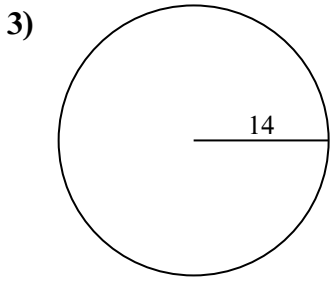
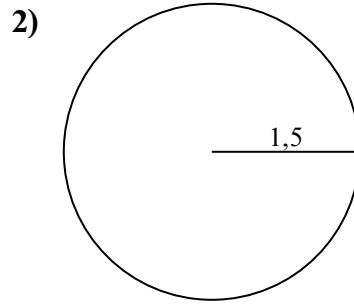
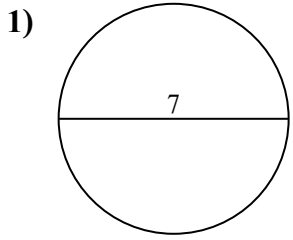




Tìm diện tích của mỗi hình tròn. Các hình tròn không đúng tỉ lệ.

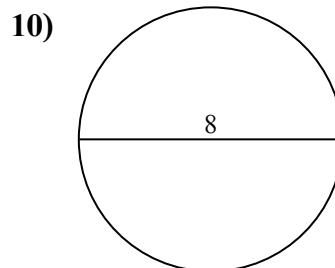
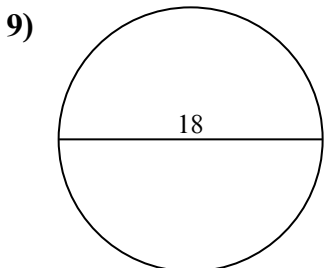
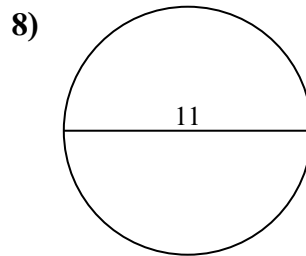
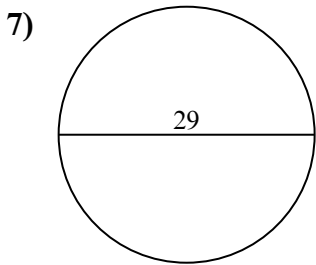
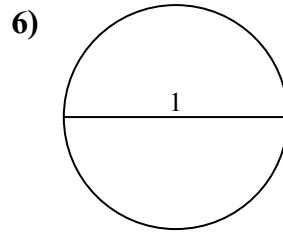
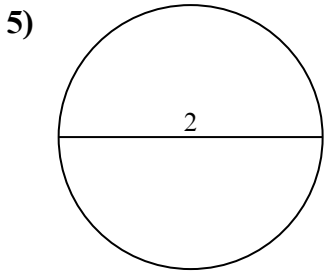
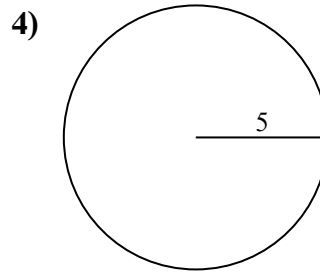
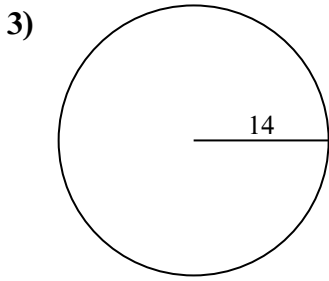
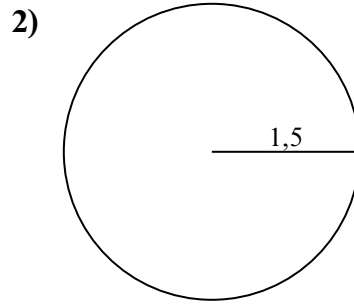
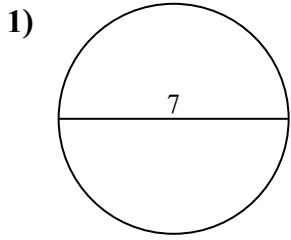


**Câu trả lời**

- 1. \_\_\_\_\_
- 2. \_\_\_\_\_
- 3. \_\_\_\_\_
- 4. \_\_\_\_\_
- 5. \_\_\_\_\_
- 6. \_\_\_\_\_
- 7. \_\_\_\_\_
- 8. \_\_\_\_\_
- 9. \_\_\_\_\_
- 10. \_\_\_\_\_



Tìm diện tích của mỗi hình tròn. Các hình tròn không đúng tỉ lệ.



Câu trả lời

1. 38,48 cm<sup>2</sup>
2. 7,07 cm<sup>2</sup>
3. 615,75 cm<sup>2</sup>
4. 78,54 cm<sup>2</sup>
5. 3,14 cm<sup>2</sup>
6. 0,79 cm<sup>2</sup>
7. 660,52 cm<sup>2</sup>
8. 95,03 cm<sup>2</sup>
9. 254,47 cm<sup>2</sup>
10. 50,27 cm<sup>2</sup>