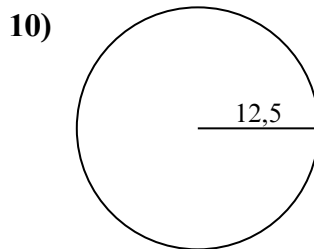
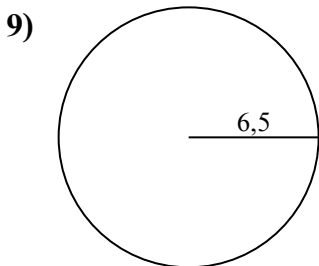
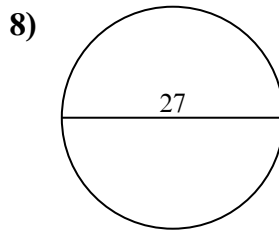
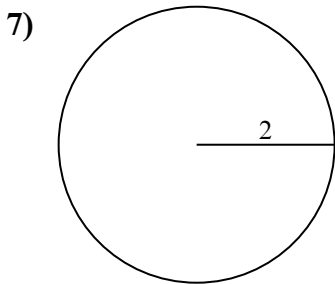
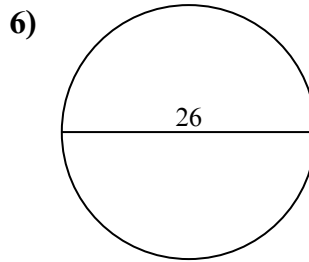
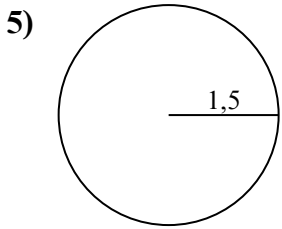
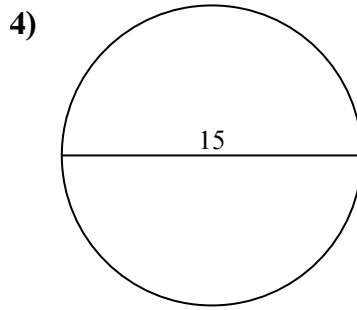
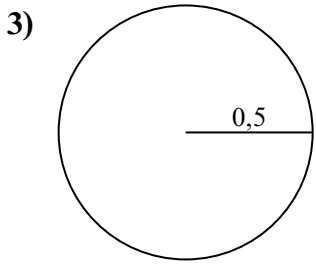
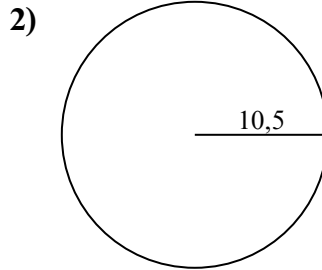
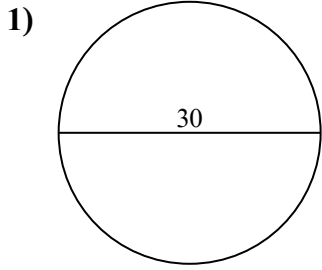




Tìm diện tích của mỗi hình tròn. Các hình tròn không đúng tỉ lệ.

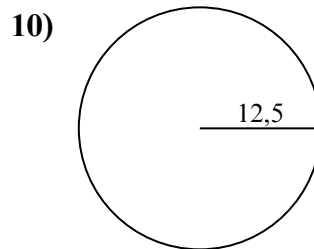
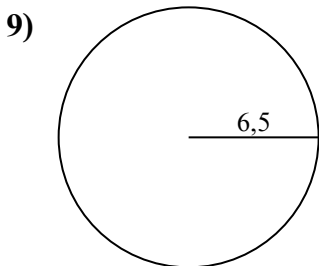
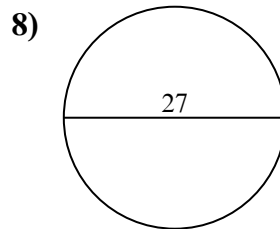
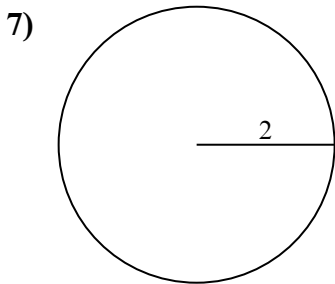
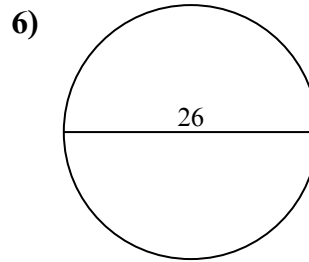
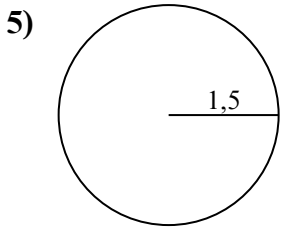
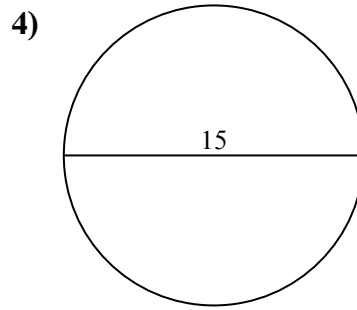
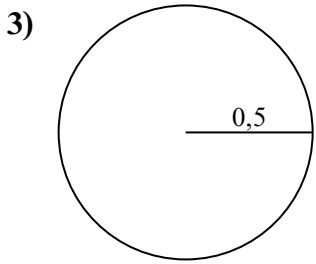
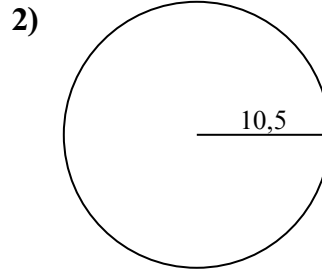
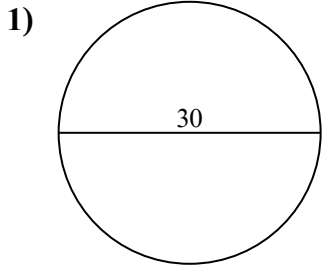


Câu trả lời

1. _____
2. _____
3. _____
4. _____
5. _____
6. _____
7. _____
8. _____
9. _____
10. _____



Tìm diện tích của mỗi hình tròn. Các hình tròn không đúng tỉ lệ.



Câu trả lời

1. 706,86 cm²
2. 346,36 cm²
3. 0,79 cm²
4. 176,71 cm²
5. 7,07 cm²
6. 530,93 cm²
7. 12,57 cm²
8. 572,56 cm²
9. 132,73 cm²
10. 490,87 cm²