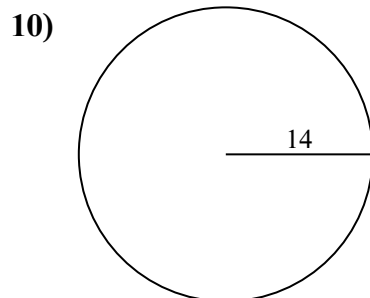
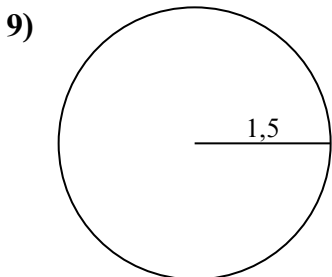
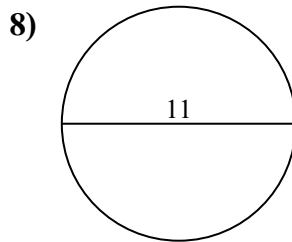
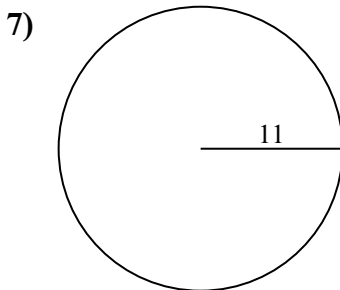
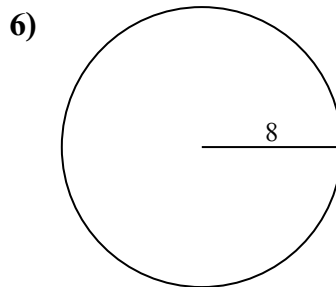
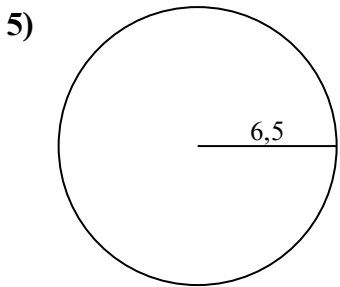
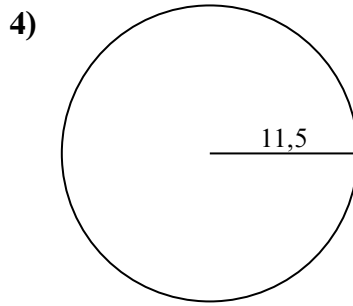
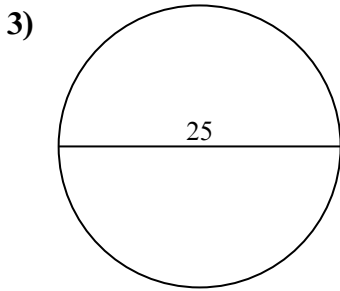
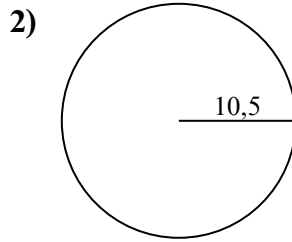
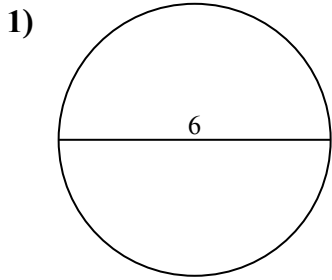




Tìm diện tích của mỗi hình tròn. Các hình tròn không đúng tỉ lệ.

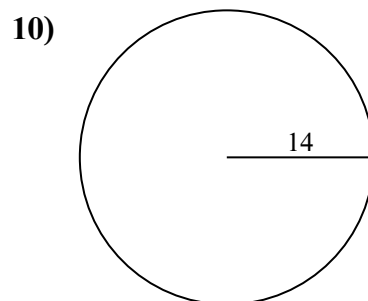
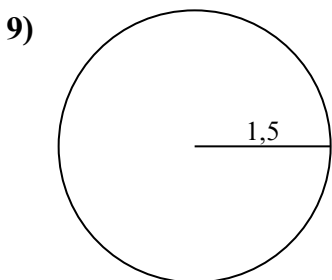
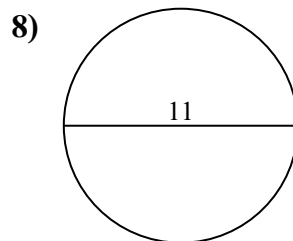
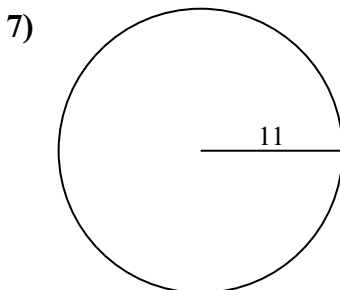
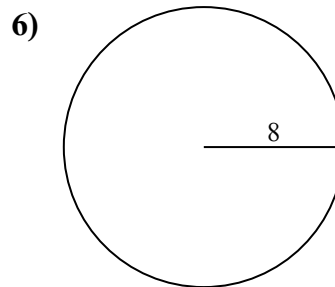
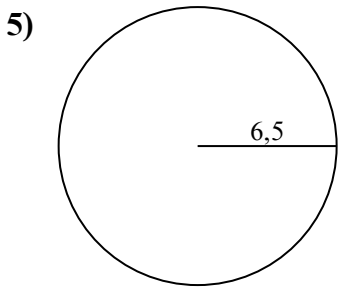
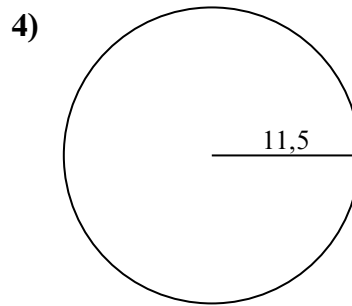
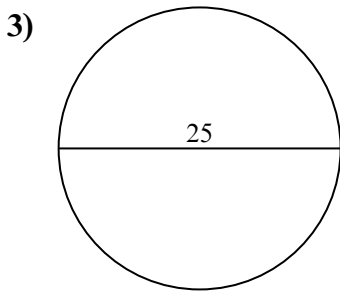
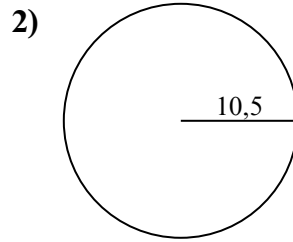
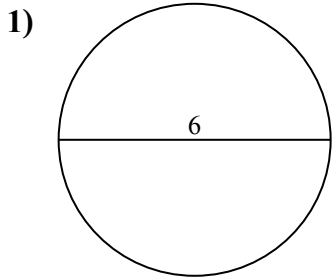


Câu trả lời

- 1. _____
- 2. _____
- 3. _____
- 4. _____
- 5. _____
- 6. _____
- 7. _____
- 8. _____
- 9. _____
- 10. _____



Tìm diện tích của mỗi hình tròn. Các hình tròn không đúng tỉ lệ.



Câu trả lời

1. 28,27 cm²
2. 346,36 cm²
3. 490,87 cm²
4. 415,48 cm²
5. 132,73 cm²
6. 201,06 cm²
7. 380,13 cm²
8. 95,03 cm²
9. 7,07 cm²
10. 615,75 cm²