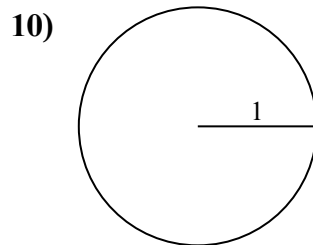
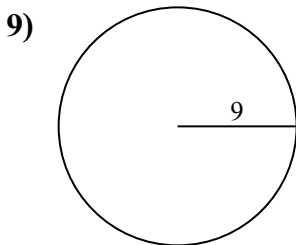
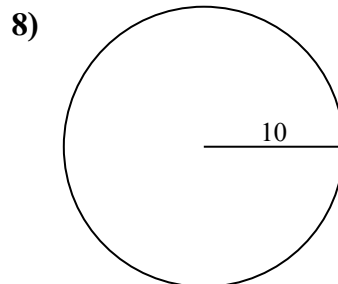
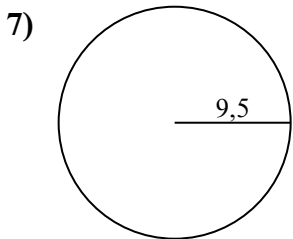
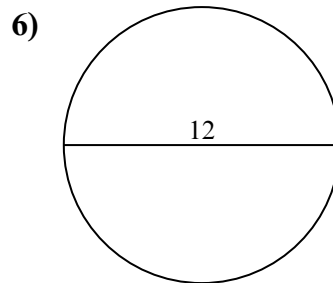
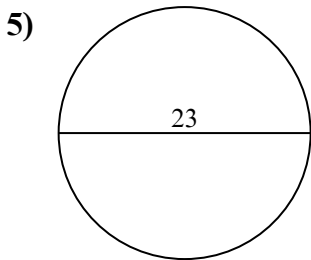
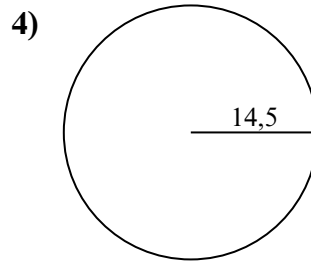
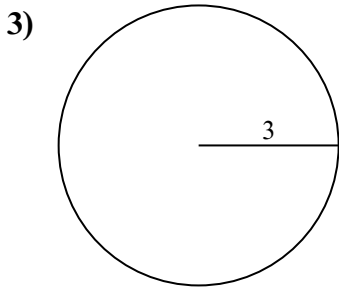
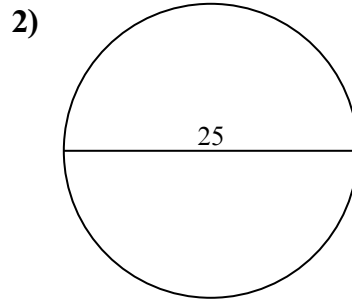
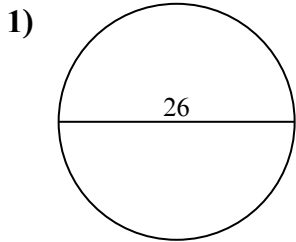




Tìm diện tích của mỗi hình tròn. Các hình tròn không đúng tỉ lệ.

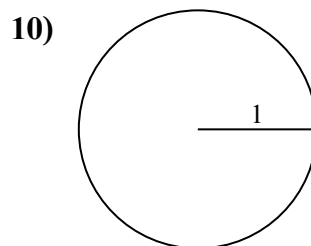
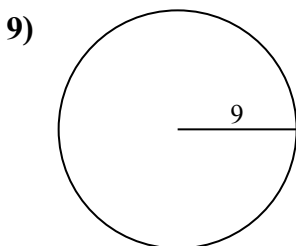
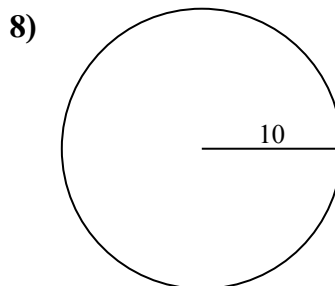
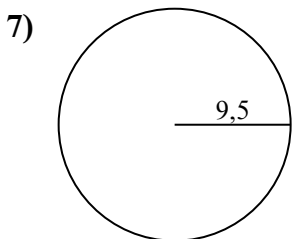
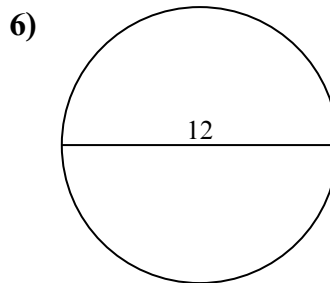
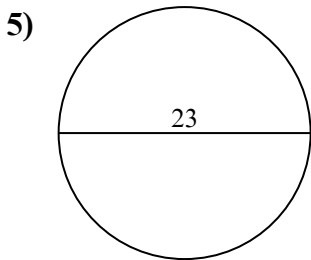
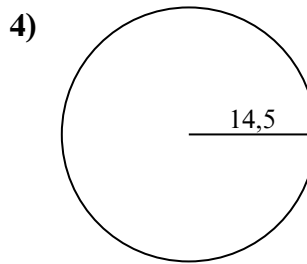
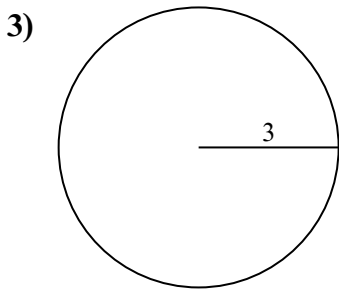
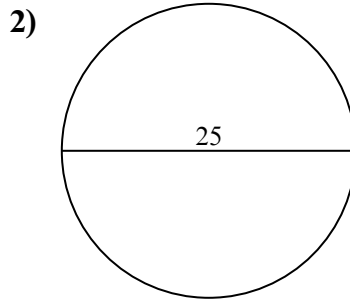
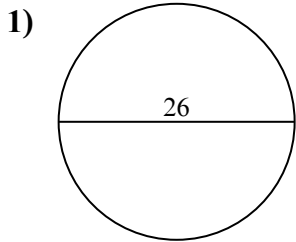


Câu trả lời

- 1. _____
- 2. _____
- 3. _____
- 4. _____
- 5. _____
- 6. _____
- 7. _____
- 8. _____
- 9. _____
- 10. _____



Tìm diện tích của mỗi hình tròn. Các hình tròn không đúng tỉ lệ.



Câu trả lời

1. 530,93 cm²
2. 490,87 cm²
3. 28,27 cm²
4. 660,52 cm²
5. 415,48 cm²
6. 113,1 cm²
7. 283,53 cm²
8. 314,16 cm²
9. 254,47 cm²
10. 3,14 cm²