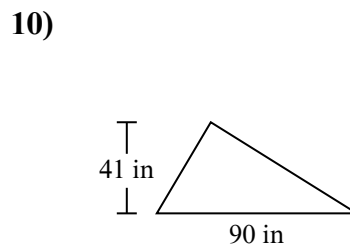
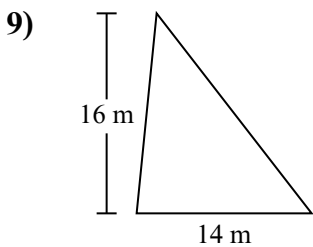
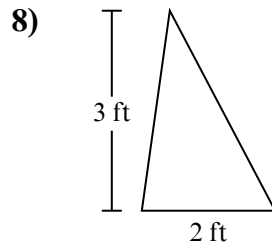
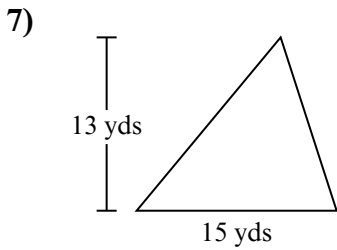
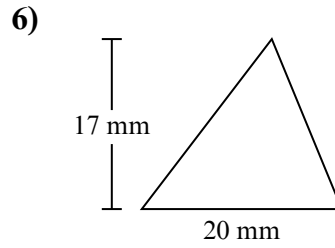
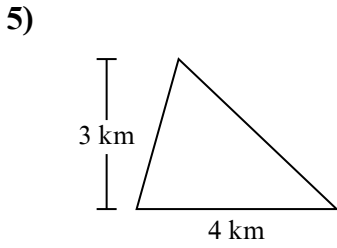
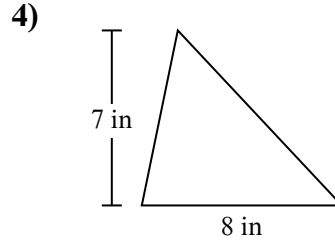
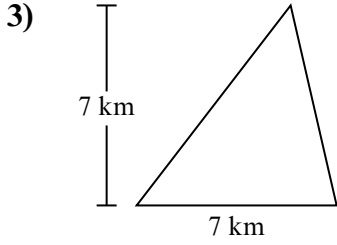
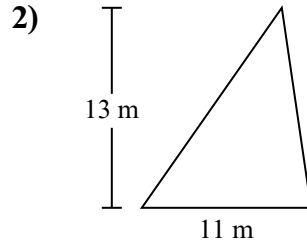
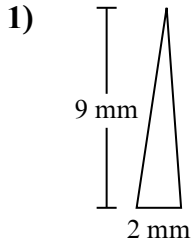




Tìm diện tích hình các tam giác. Đơn vị không theo tỉ lệ.

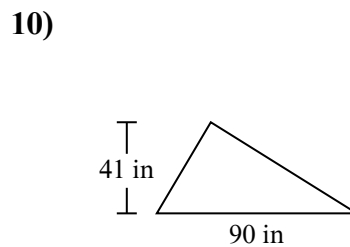
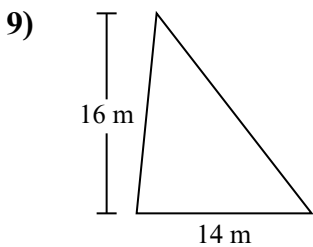
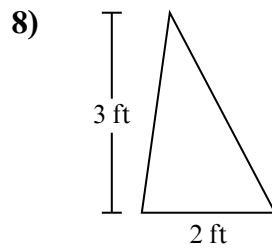
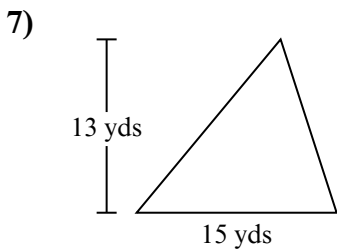
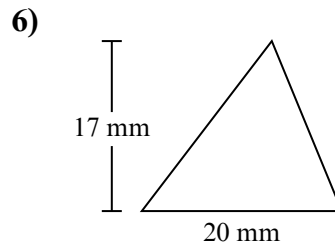
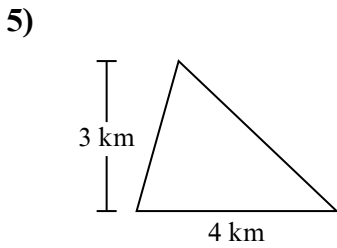
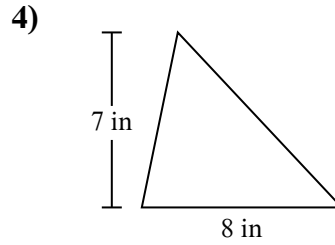
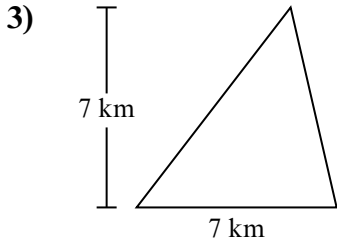
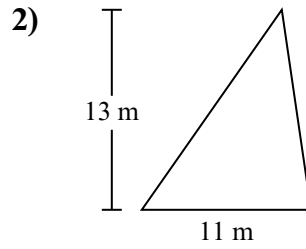
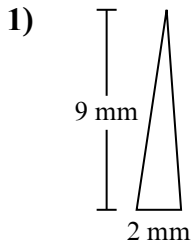


Câu trả lời

1. _____
2. _____
3. _____
4. _____
5. _____
6. _____
7. _____
8. _____
9. _____
10. _____

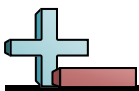


Tìm diện tích hình các tam giác. Đơn vị không theo tỉ lệ.



Câu trả lời

1. 9 mm²
2. 71,5 m²
3. 24,5 km²
4. 28 in²
5. 6 km²
6. 170 mm²
7. 97,5 yds²
8. 3 ft²
9. 112 m²
10. 1.845 in²



20 yds^2	$142,5 \text{ mm}^2$	25 in^2	1.139 yds^2
144 in^2	$97,5 \text{ km}^2$	152 km^2	105 ft^2
$2.043,5 \text{ ft}^2$	40 m^2		

