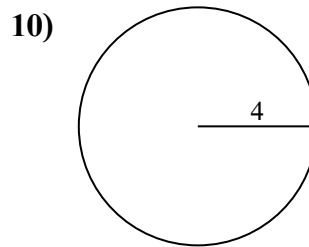
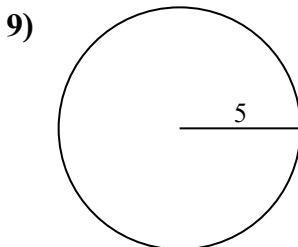
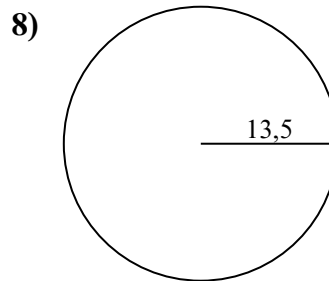
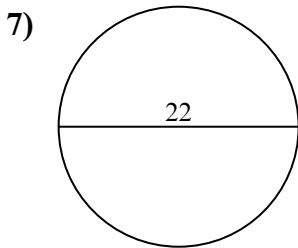
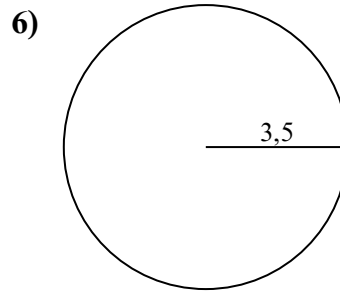
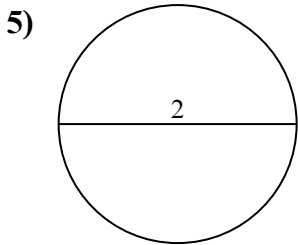
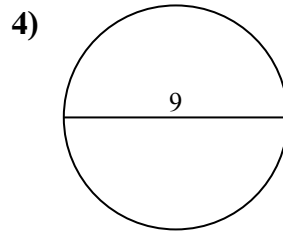
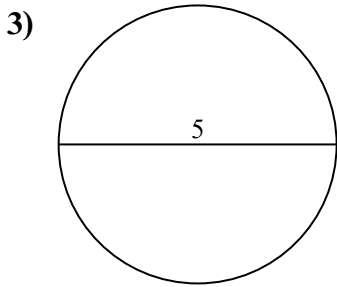
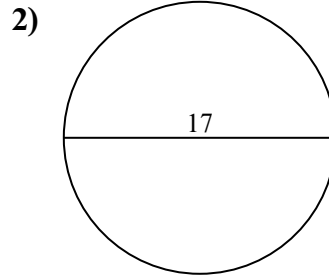
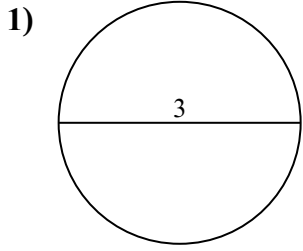




Tìm chu vi (tính bằng cm) của các hình tròn. Các hình tròn không đúng tỉ lệ.

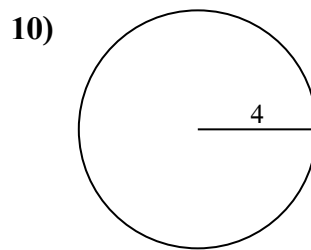
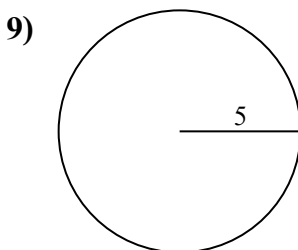
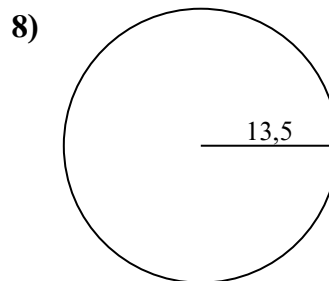
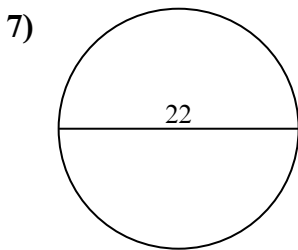
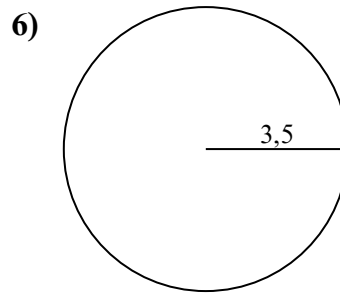
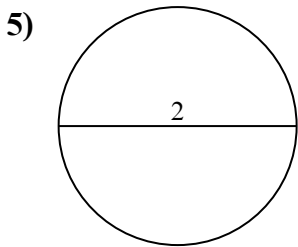
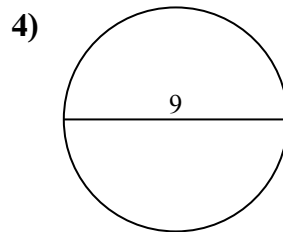
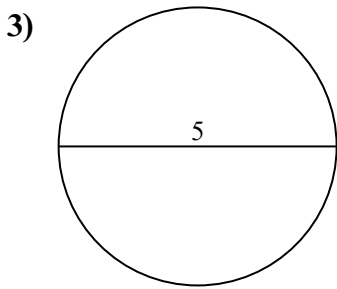
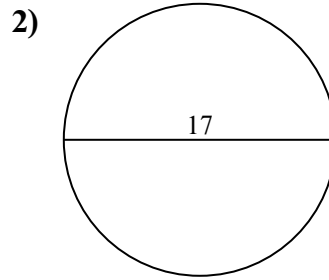
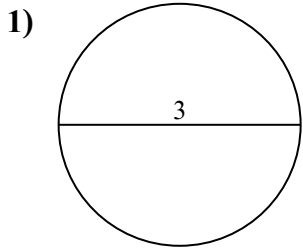


Câu trả lời

1. _____
2. _____
3. _____
4. _____
5. _____
6. _____
7. _____
8. _____
9. _____
10. _____



Tìm chu vi (tính bằng cm) của các hình tròn. Các hình tròn không đúng tỉ lệ.

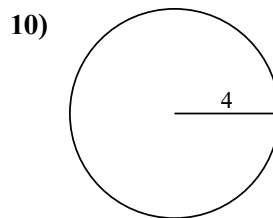
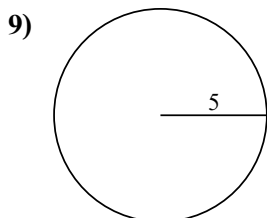
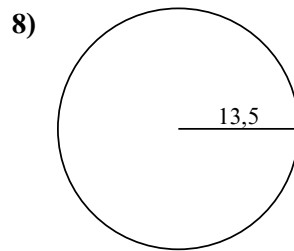
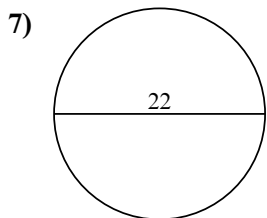
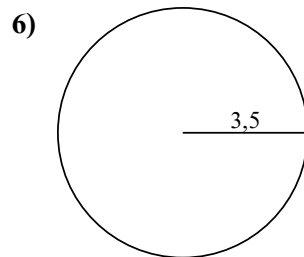
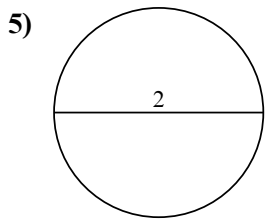
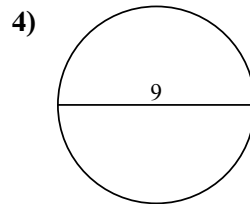
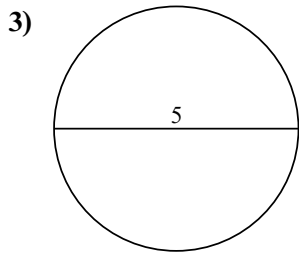
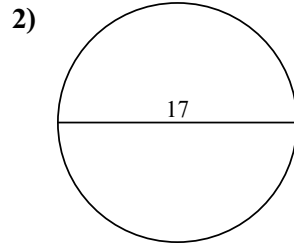
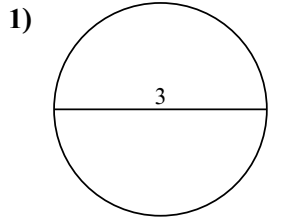
**Câu trả lời**1. 9,42 cm2. 53,41 cm3. 15,71 cm4. 28,27 cm5. 6,28 cm6. 21,99 cm7. 69,12 cm8. 84,82 cm9. 31,42 cm10. 25,13 cm



Tìm chu vi (tính bằng cm) của các hình tròn. Các hình tròn không đúng tỉ lệ.

Câu trả lời

59,69 cm	15,71 cm	62,83 cm	6,28 cm	40,84 cm
50,27 cm	56,55 cm	28,27 cm	31,42 cm	84,82 cm



1. _____
2. _____
3. _____
4. _____
5. _____
6. _____
7. _____
8. _____
9. _____
10. _____