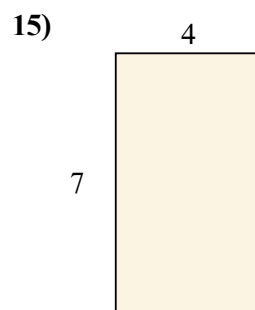
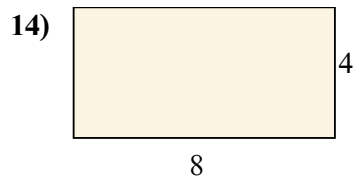
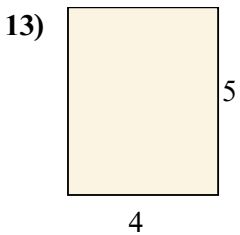
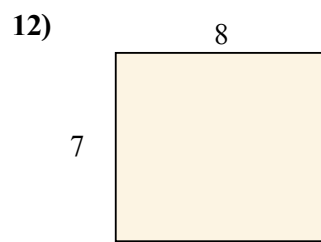
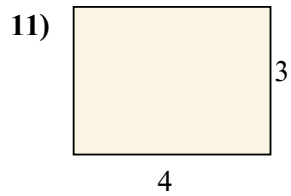
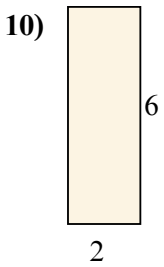
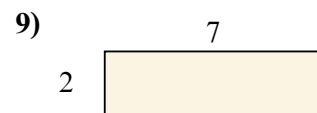
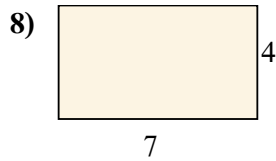
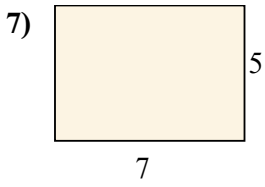
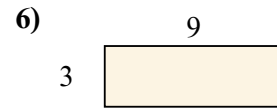
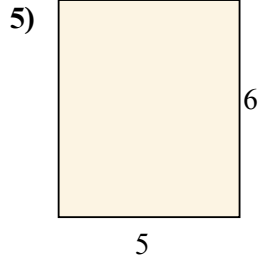
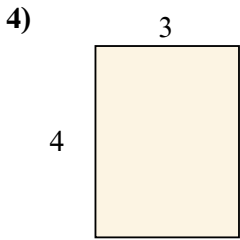
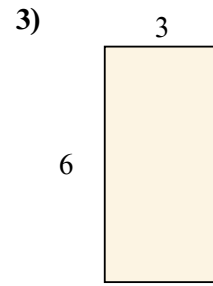
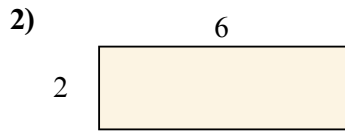
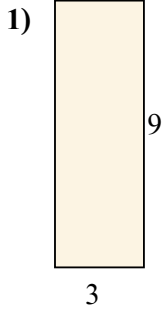




Tìm diện tích (tính bằng cm) của các hình chữ nhật.

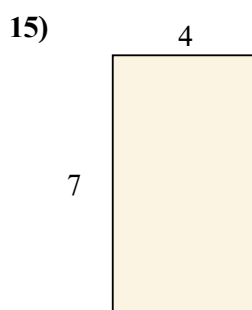
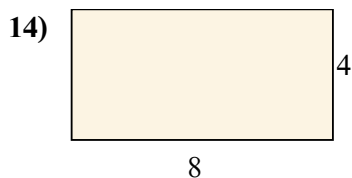
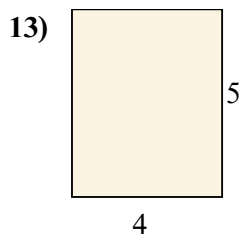
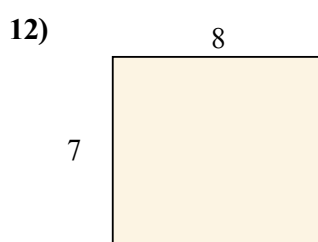
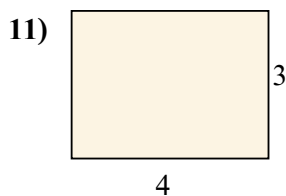
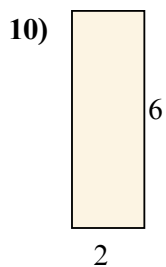
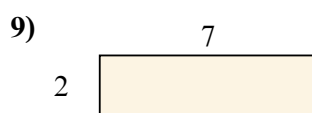
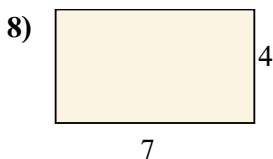
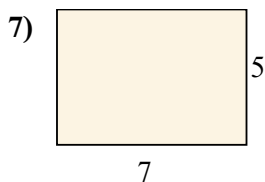
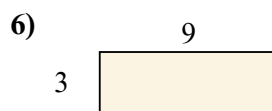
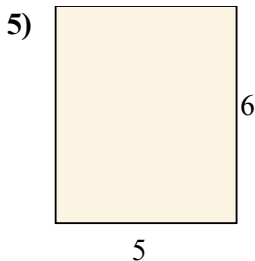
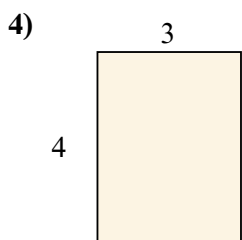
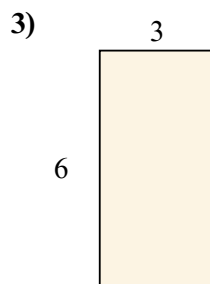
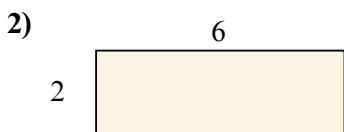
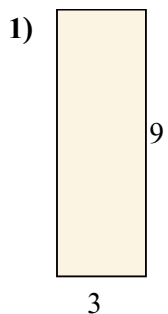


Câu trả lời

1. _____
2. _____
3. _____
4. _____
5. _____
6. _____
7. _____
8. _____
9. _____
10. _____
11. _____
12. _____
13. _____
14. _____
15. _____



Tìm diện tích (tính bằng cm) của các hình chữ nhật.



Câu trả lời

1. 27 cm²

2. 12 cm²

3. 18 cm²

4. 12 cm²

5. 30 cm²

6. 27 cm²

7. 35 cm²

8. 28 cm²

9. 14 cm²

10. 12 cm²

11. 12 cm²

12. 56 cm²

13. 20 cm²

14. 32 cm²

15. 28 cm²