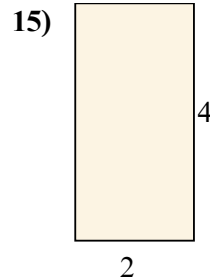
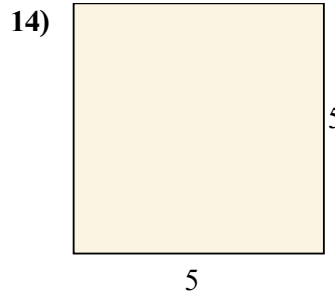
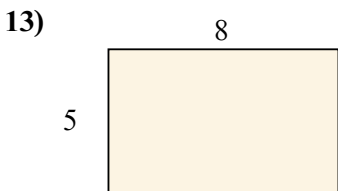
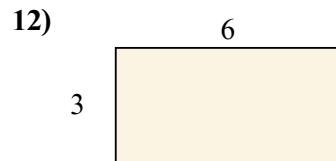
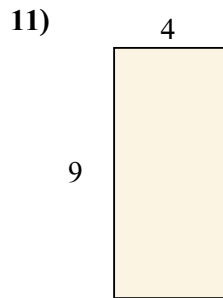
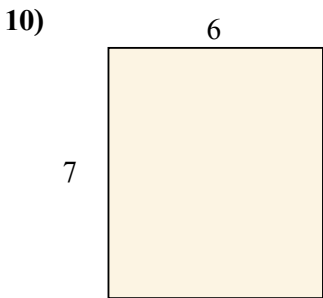
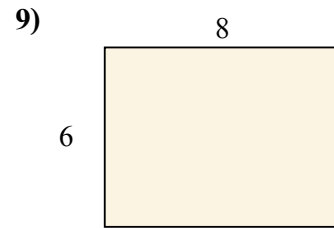
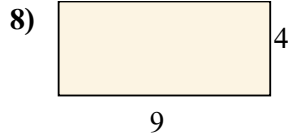
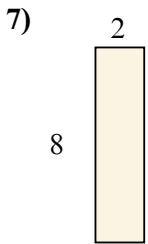
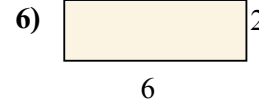
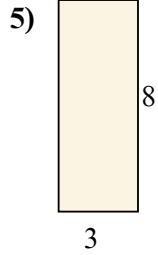
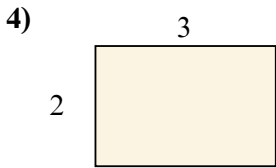
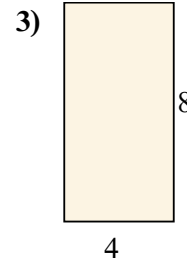
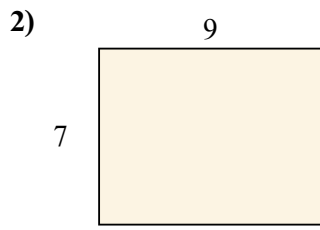
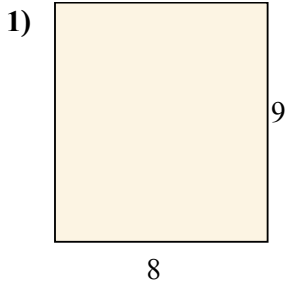




Tìm diện tích (tính bằng cm) của các hình chữ nhật.

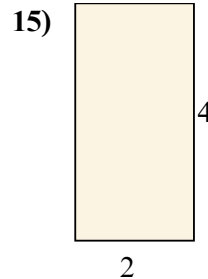
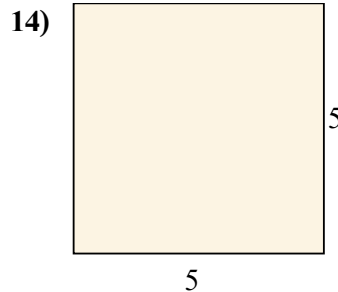
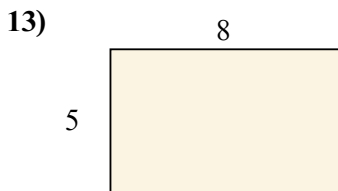
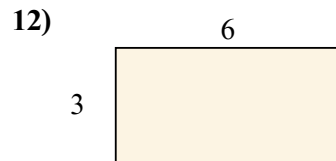
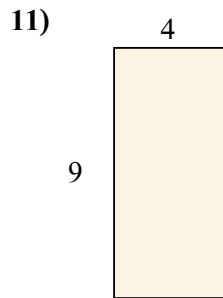
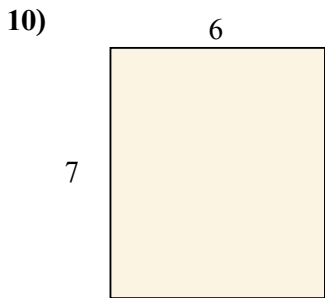
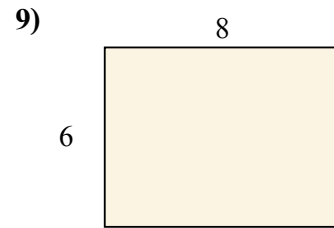
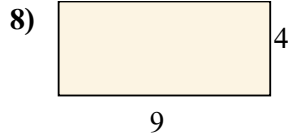
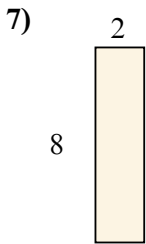
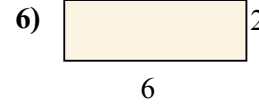

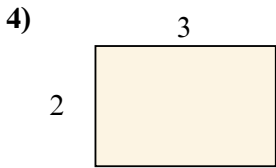
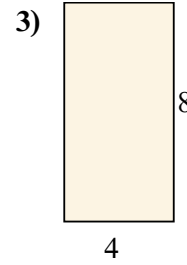
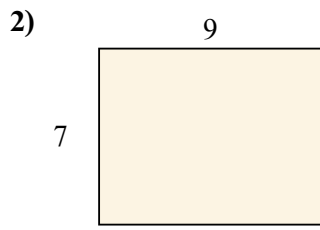
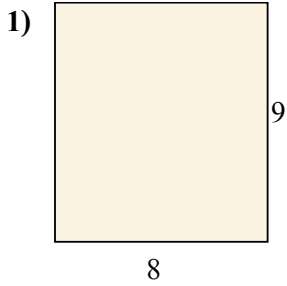


**Câu trả lời**

1. \_\_\_\_\_
2. \_\_\_\_\_
3. \_\_\_\_\_
4. \_\_\_\_\_
5. \_\_\_\_\_
6. \_\_\_\_\_
7. \_\_\_\_\_
8. \_\_\_\_\_
9. \_\_\_\_\_
10. \_\_\_\_\_
11. \_\_\_\_\_
12. \_\_\_\_\_
13. \_\_\_\_\_
14. \_\_\_\_\_
15. \_\_\_\_\_



Tìm diện tích (tính bằng cm) của các hình chữ nhật.



**Câu trả lời**

1. 72 cm<sup>2</sup>

2. 63 cm<sup>2</sup>

3. 32 cm<sup>2</sup>

4. 6 cm<sup>2</sup>

5. 24 cm<sup>2</sup>

6. 12 cm<sup>2</sup>

7. 16 cm<sup>2</sup>

8. 36 cm<sup>2</sup>

9. 48 cm<sup>2</sup>

10. 42 cm<sup>2</sup>

11. 36 cm<sup>2</sup>

12. 18 cm<sup>2</sup>

13. 40 cm<sup>2</sup>

14. 25 cm<sup>2</sup>

15. 8 cm<sup>2</sup>