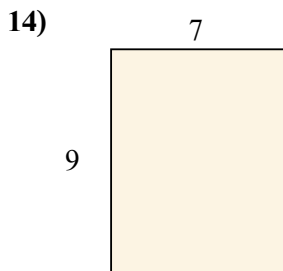

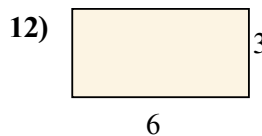
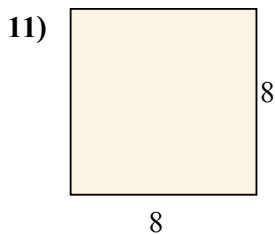
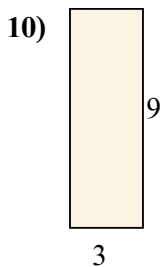
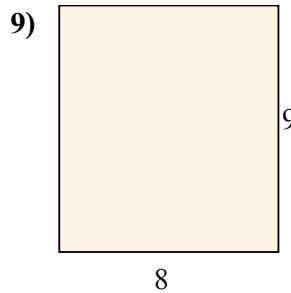
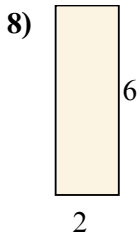
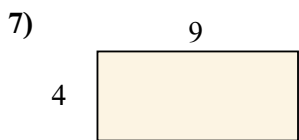
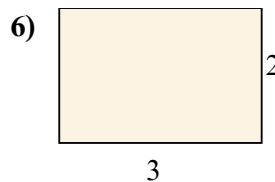
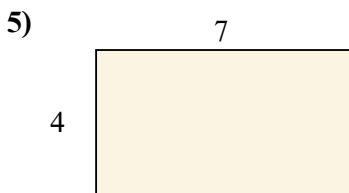
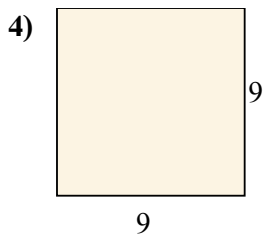
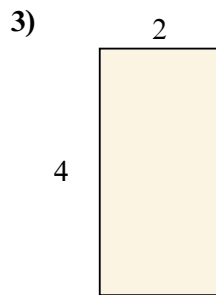
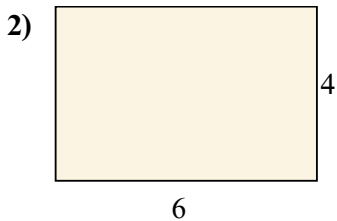
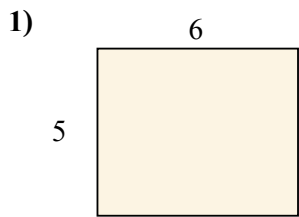




Tìm diện tích (tính bằng cm) của các hình chữ nhật.

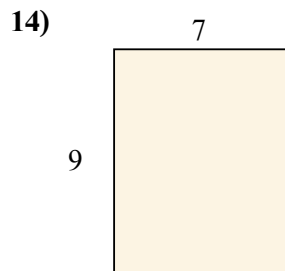

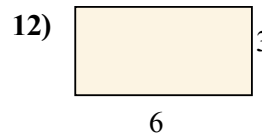
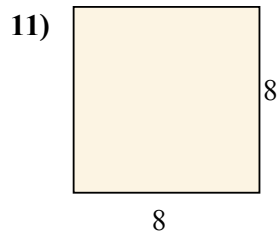
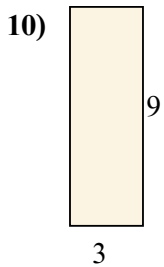
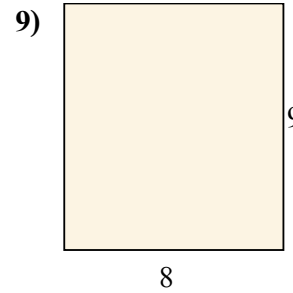
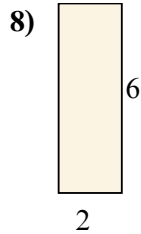
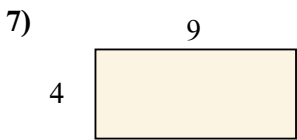
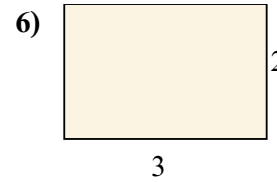
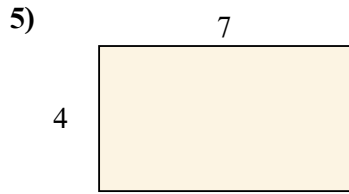
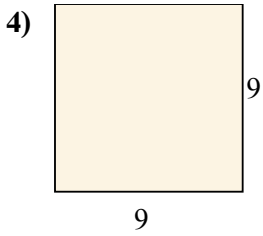
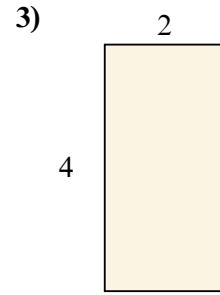
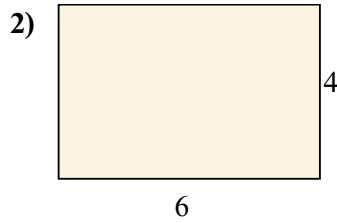
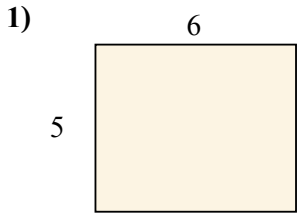


Câu trả lời

1. _____
2. _____
3. _____
4. _____
5. _____
6. _____
7. _____
8. _____
9. _____
10. _____
11. _____
12. _____
13. _____
14. _____
15. _____



Tìm diện tích (tính bằng cm) của các hình chữ nhật.



Câu trả lời

1. 30 cm²

2. 24 cm²

3. 8 cm²

4. 81 cm²

5. 28 cm²

6. 6 cm²

7. 36 cm²

8. 12 cm²

9. 72 cm²

10. 27 cm²

11. 64 cm²

12. 18 cm²

13. 16 cm²

14. 63 cm²

15. 14 cm²