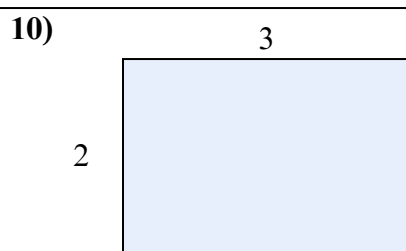
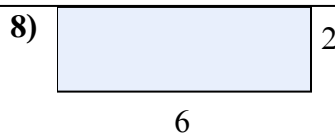
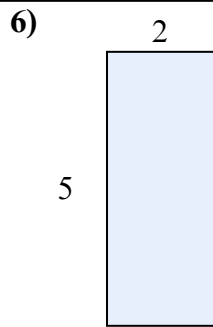
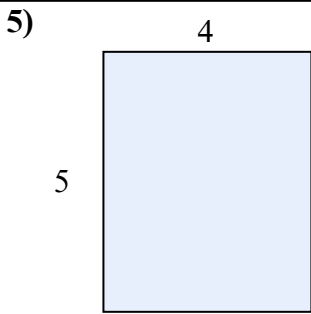
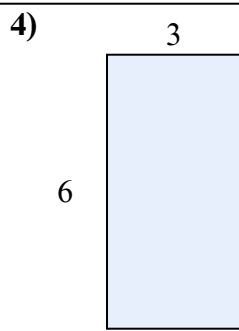
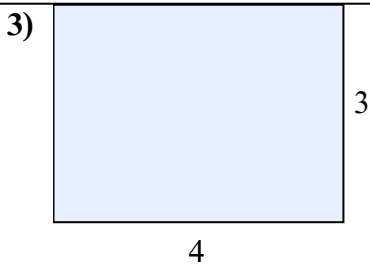
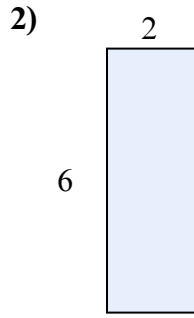
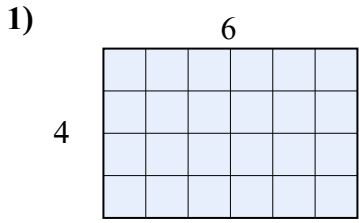




Tìm diện tích hình chữ nhật tính bằng ô gạch lát. Cái đầu tiên chia ô để bạn hình dung.

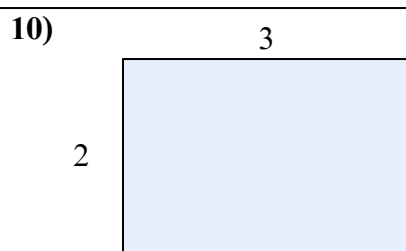
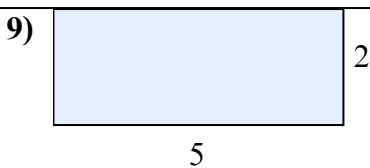
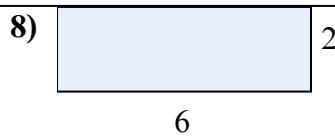
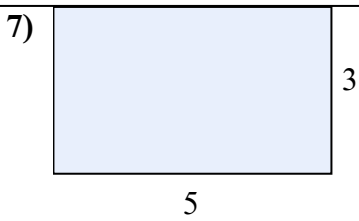
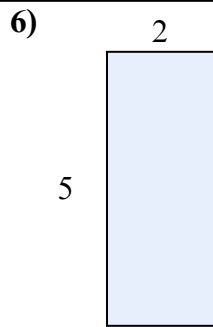
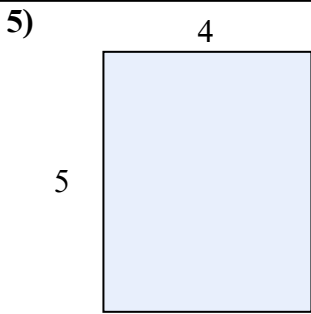
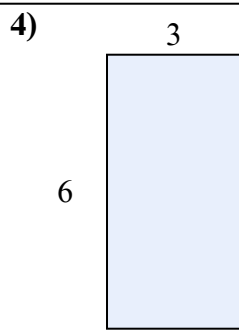
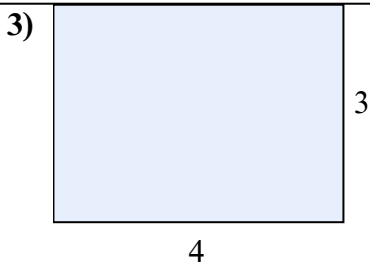
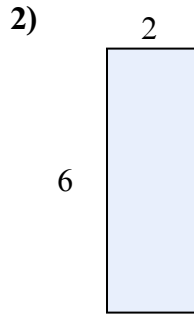
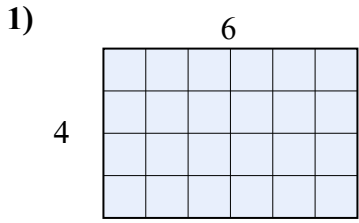


Câu trả lời

1. _____
2. _____
3. _____
4. _____
5. _____
6. _____
7. _____
8. _____
9. _____
10. _____



Tìm diện tích hình chữ nhật tính bằng ô gạch lát. Cái đầu tiên chia ô để bạn hình dung.



Câu trả lời

1. 24
2. 12
3. 12
4. 18
5. 20
6. 10
7. 15
8. 12
9. 10
10. 6