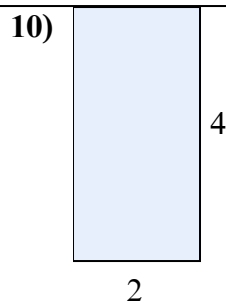
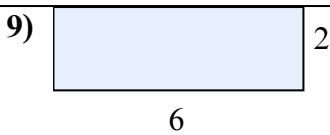
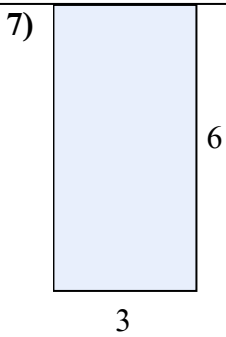
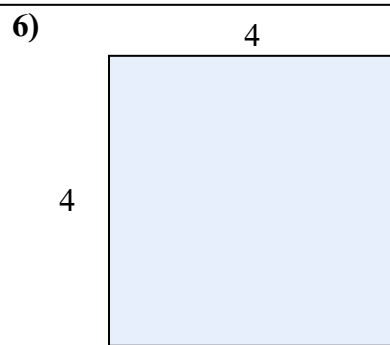
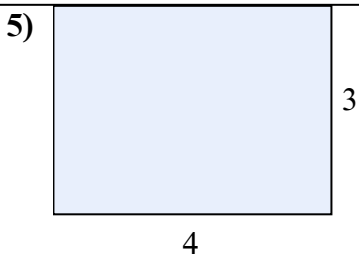
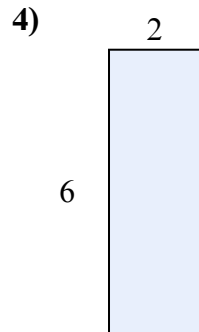
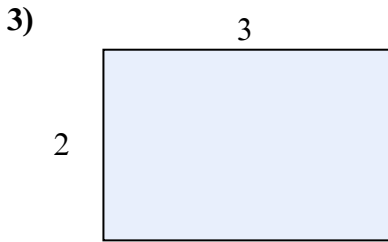
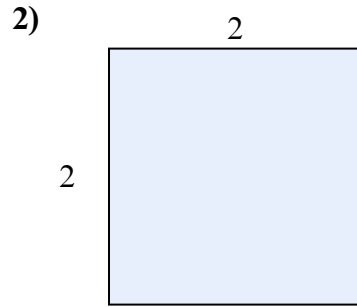
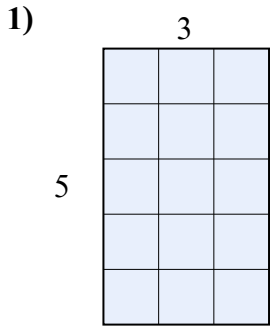




Tìm diện tích hình chữ nhật tính bằng ô gạch lát. Cái đầu tiên chia ô để bạn hình dung.

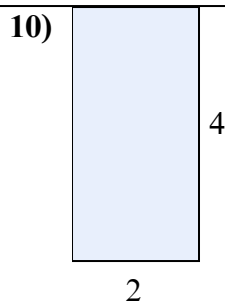
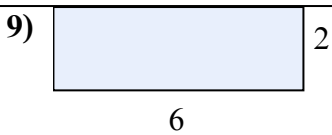
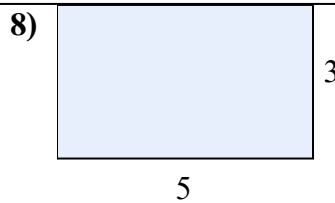
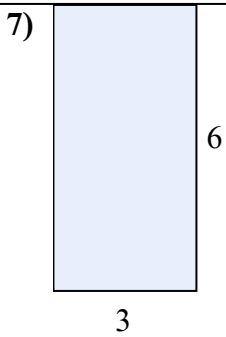
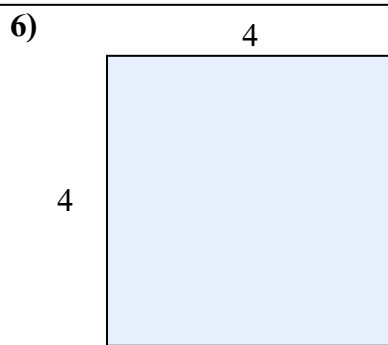
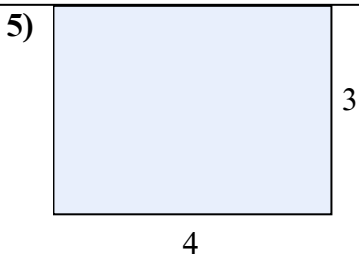
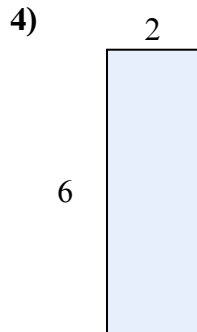
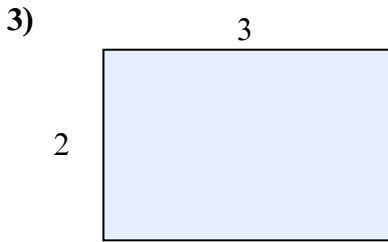
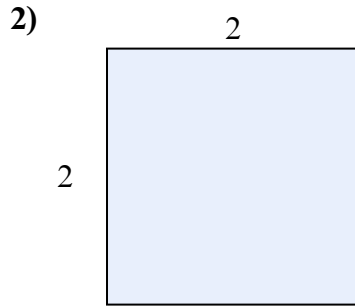
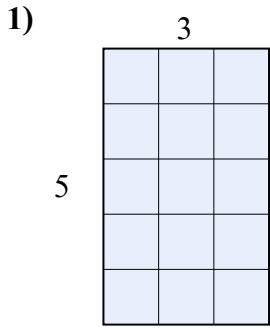


**Câu trả lời**

1. \_\_\_\_\_
2. \_\_\_\_\_
3. \_\_\_\_\_
4. \_\_\_\_\_
5. \_\_\_\_\_
6. \_\_\_\_\_
7. \_\_\_\_\_
8. \_\_\_\_\_
9. \_\_\_\_\_
10. \_\_\_\_\_



Tìm diện tích hình chữ nhật tính bằng ô gạch lát. Cái đầu tiên chia ô để bạn hình dung.



Câu trả lời

1. 15

2. 4

3. 6

4. 12

5. 12

6. 16

7. 18

8. 15

9. 12

10. 8