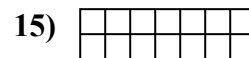
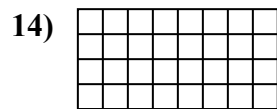
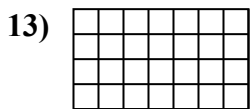
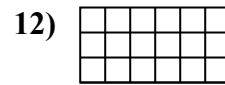
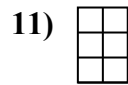
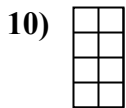
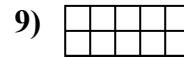
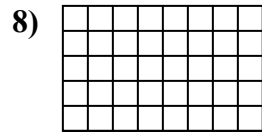
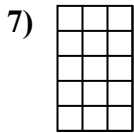
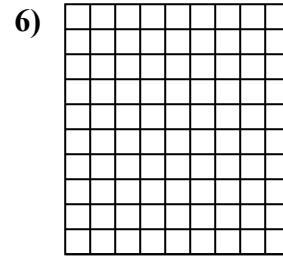
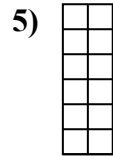
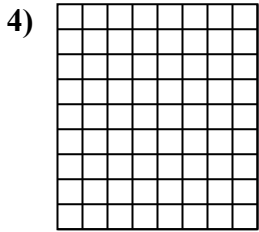
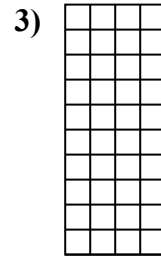
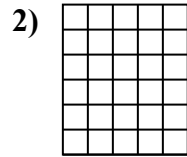
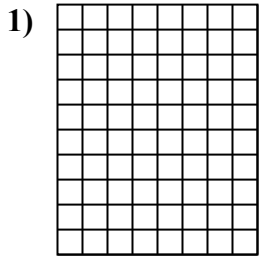




Xác định diện tích. Mỗi  $\square = 1 \text{ cm}^2$ .

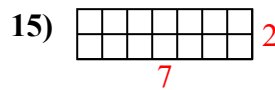
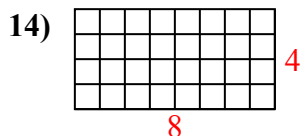
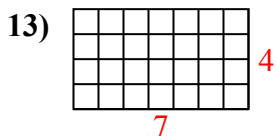
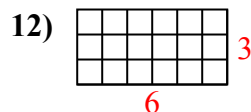
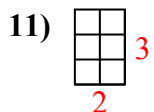
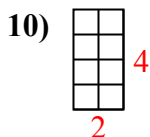
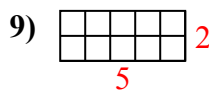
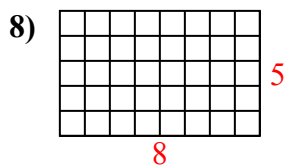
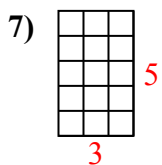
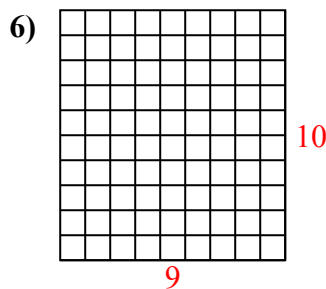
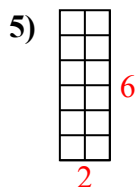
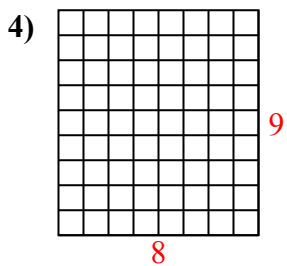
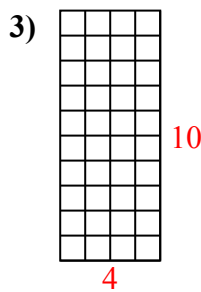
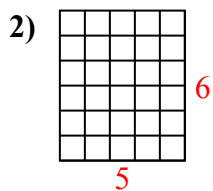
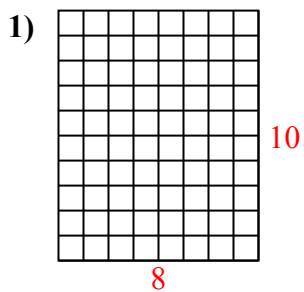


**Câu trả lời**

1. \_\_\_\_\_
2. \_\_\_\_\_
3. \_\_\_\_\_
4. \_\_\_\_\_
5. \_\_\_\_\_
6. \_\_\_\_\_
7. \_\_\_\_\_
8. \_\_\_\_\_
9. \_\_\_\_\_
10. \_\_\_\_\_
11. \_\_\_\_\_
12. \_\_\_\_\_
13. \_\_\_\_\_
14. \_\_\_\_\_
15. \_\_\_\_\_



Xác định diện tích. Mỗi  $\square = 1 \text{ cm}^2$ .



**Câu trả lời**

1. 80 cm<sup>2</sup>

2. 30 cm<sup>2</sup>

3. 40 cm<sup>2</sup>

4. 72 cm<sup>2</sup>

5. 12 cm<sup>2</sup>

6. 90 cm<sup>2</sup>

7. 15 cm<sup>2</sup>

8. 40 cm<sup>2</sup>

9. 10 cm<sup>2</sup>

10. 8 cm<sup>2</sup>

11. 6 cm<sup>2</sup>

12. 18 cm<sup>2</sup>

13. 28 cm<sup>2</sup>

14. 32 cm<sup>2</sup>

15. 14 cm<sup>2</sup>