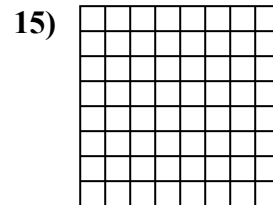
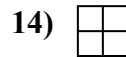
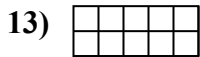
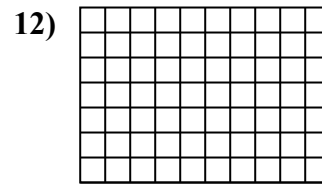
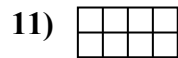
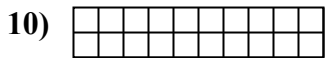
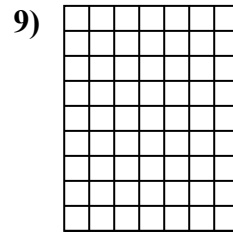
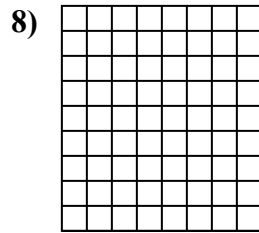
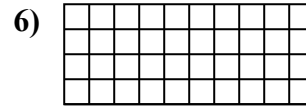
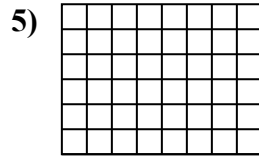
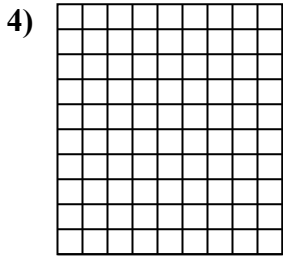
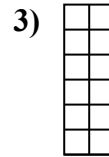

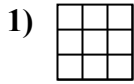




Xác định diện tích. Mỗi  $\square = 1 \text{ cm}^2$ .

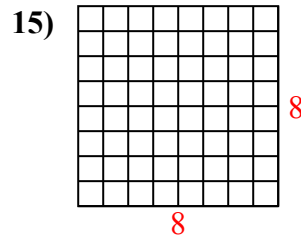
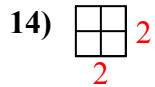
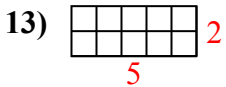
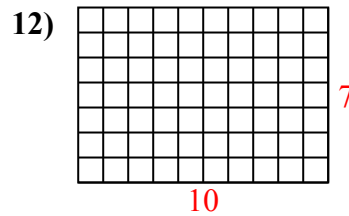
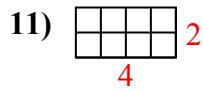
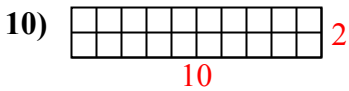
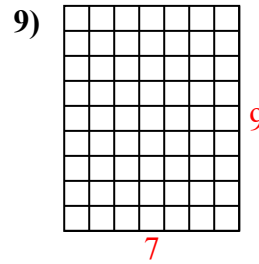
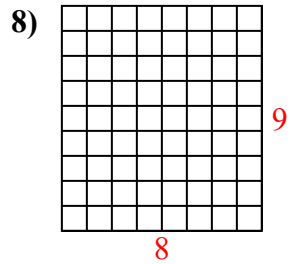
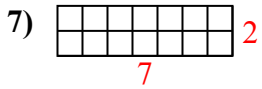
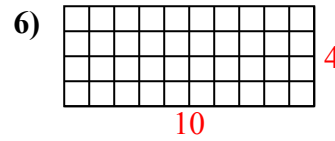
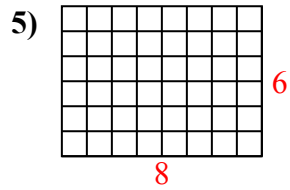
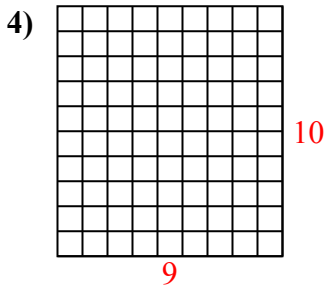
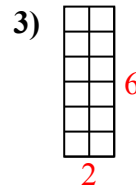
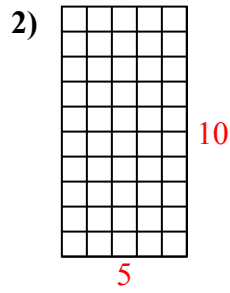
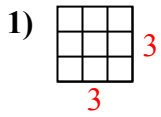


**Câu trả lời**

1. \_\_\_\_\_
2. \_\_\_\_\_
3. \_\_\_\_\_
4. \_\_\_\_\_
5. \_\_\_\_\_
6. \_\_\_\_\_
7. \_\_\_\_\_
8. \_\_\_\_\_
9. \_\_\_\_\_
10. \_\_\_\_\_
11. \_\_\_\_\_
12. \_\_\_\_\_
13. \_\_\_\_\_
14. \_\_\_\_\_
15. \_\_\_\_\_



Xác định diện tích. Mỗi  $\square = 1 \text{ cm}^2$ .



**Câu trả lời**

1. 9 cm<sup>2</sup>

2. 50 cm<sup>2</sup>

3. 12 cm<sup>2</sup>

4. 90 cm<sup>2</sup>

5. 48 cm<sup>2</sup>

6. 40 cm<sup>2</sup>

7. 14 cm<sup>2</sup>

8. 72 cm<sup>2</sup>

9. 63 cm<sup>2</sup>

10. 20 cm<sup>2</sup>

11. 8 cm<sup>2</sup>

12. 70 cm<sup>2</sup>

13. 10 cm<sup>2</sup>

14. 4 cm<sup>2</sup>

15. 64 cm<sup>2</sup>