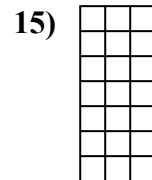
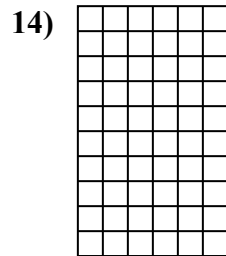
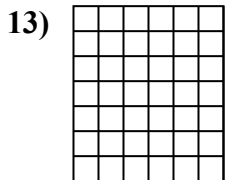
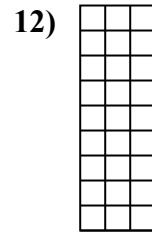
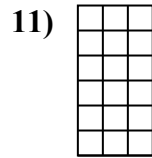
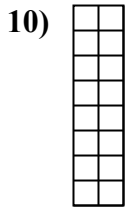
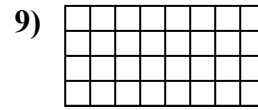
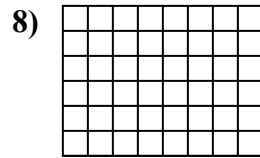
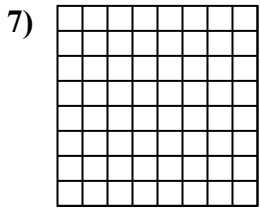
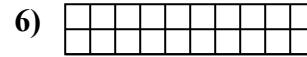
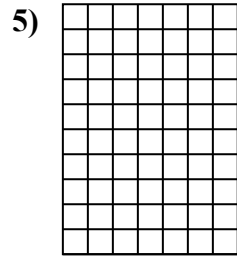
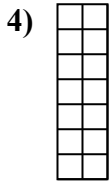
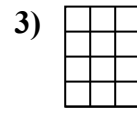
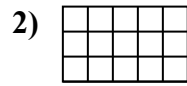
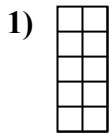




Xác định diện tích. Mỗi $\square = 1 \text{ cm}^2$.

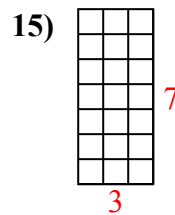
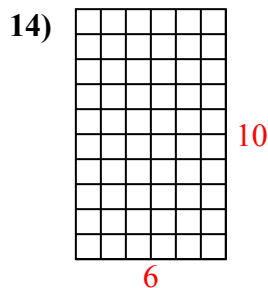
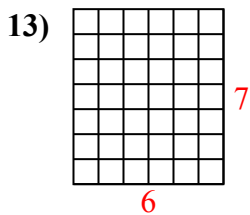
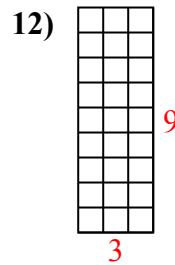
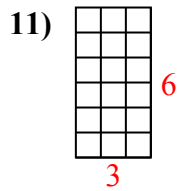
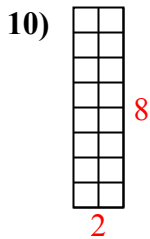
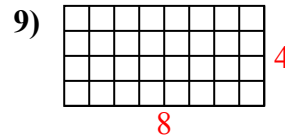
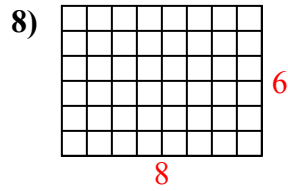
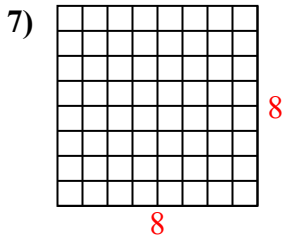
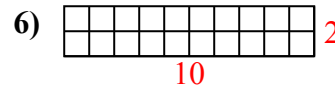
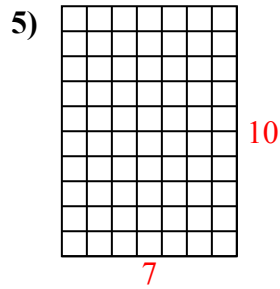
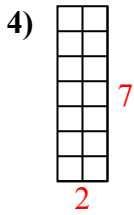
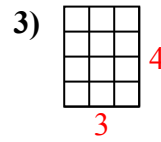
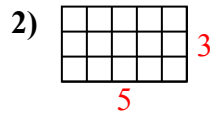
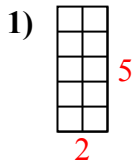


Câu trả lời

1. _____
2. _____
3. _____
4. _____
5. _____
6. _____
7. _____
8. _____
9. _____
10. _____
11. _____
12. _____
13. _____
14. _____
15. _____



Xác định diện tích. Mỗi $\square = 1 \text{ cm}^2$.



Câu trả lời

1. 10 cm²
2. 15 cm²
3. 12 cm²
4. 14 cm²
5. 70 cm²
6. 20 cm²
7. 64 cm²
8. 48 cm²
9. 32 cm²
10. 16 cm²
11. 18 cm²
12. 27 cm²
13. 42 cm²
14. 60 cm²
15. 21 cm²