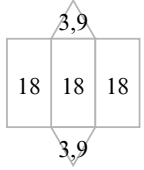
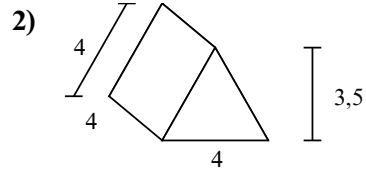
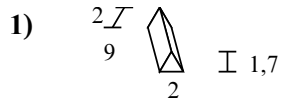
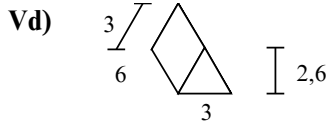




Tìm diện tích bề mặt của mỗi hình khối. Đơn vị tính bằng cm (không theo tỉ lệ).

**Câu trả lời**



Vd. 61,8 cm<sup>2</sup>

1. \_\_\_\_\_

2. \_\_\_\_\_

3. \_\_\_\_\_

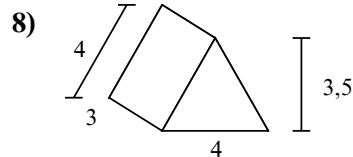
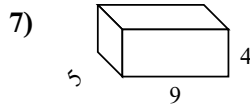
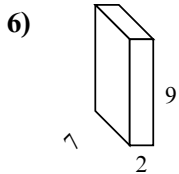
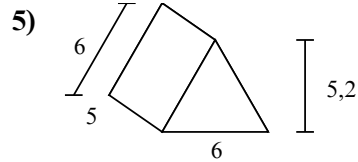
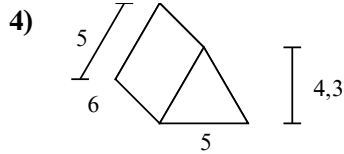
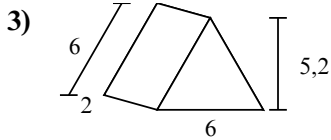
4. \_\_\_\_\_

5. \_\_\_\_\_

6. \_\_\_\_\_

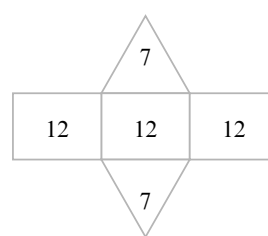
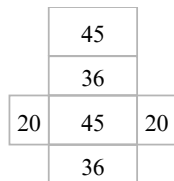
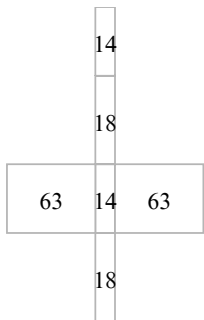
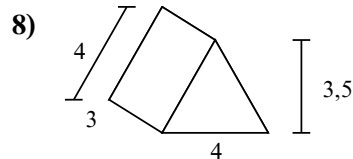
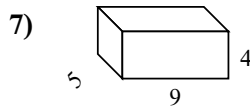
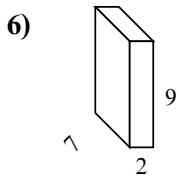
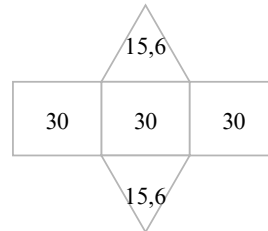
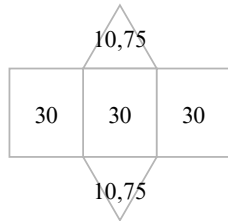
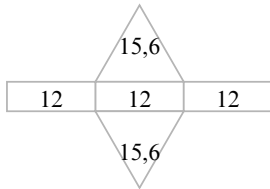
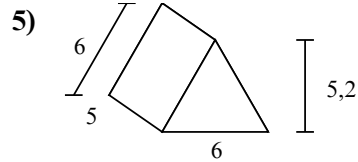
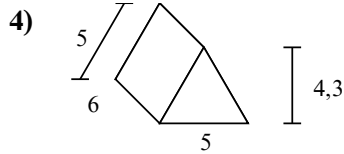
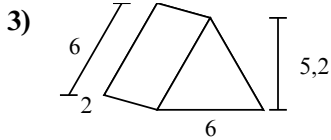
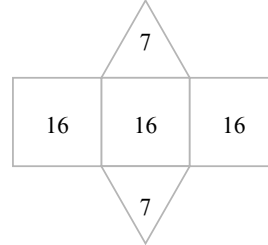
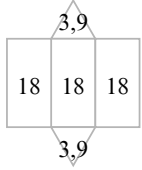
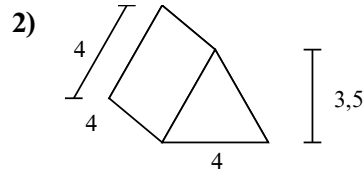
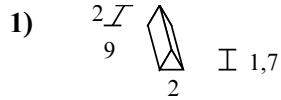
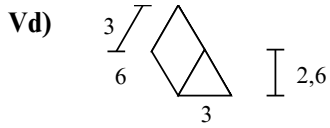
7. \_\_\_\_\_

8. \_\_\_\_\_





Tìm diện tích bề mặt của mỗi hình khối. Đơn vị tính bằng cm (không theo tỉ lệ).



**Câu trả lời**

Vd. 61,8 cm<sup>2</sup>

1. 57,4 cm<sup>2</sup>

2. 62 cm<sup>2</sup>

3. 67,2 cm<sup>2</sup>

4. 111,5 cm<sup>2</sup>

5. 121,2 cm<sup>2</sup>

6. 190 cm<sup>2</sup>

7. 202 cm<sup>2</sup>

8. 50 cm<sup>2</sup>