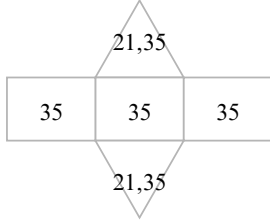
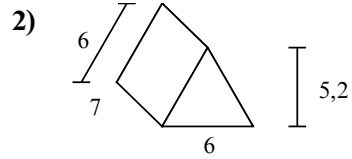
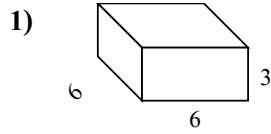
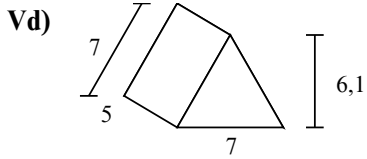




Tìm diện tích bề mặt của mỗi hình khối. Đơn vị tính bằng cm (không theo tỉ lệ).

Câu trả lời



Vd. **147,7 cm²**

1. _____

2. _____

3. _____

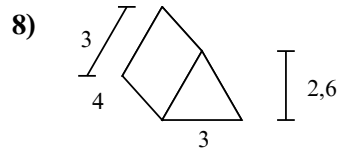
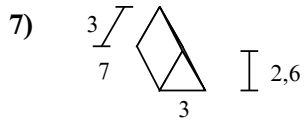
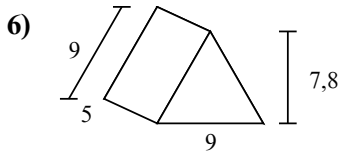
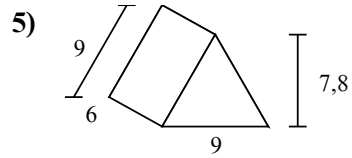
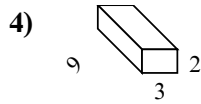
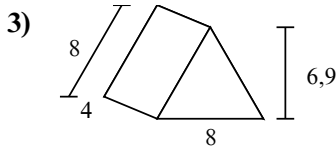
4. _____

5. _____

6. _____

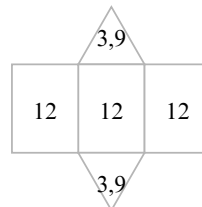
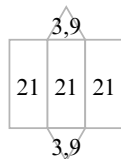
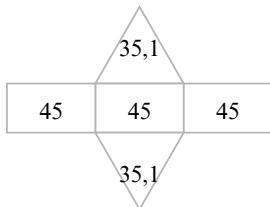
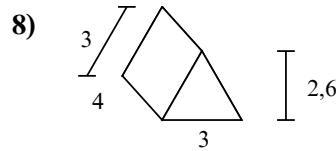
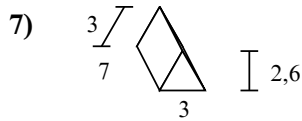
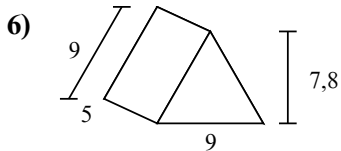
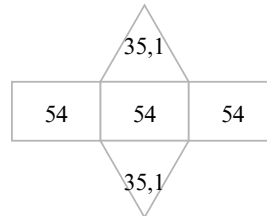
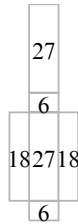
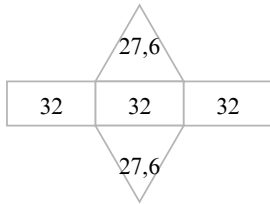
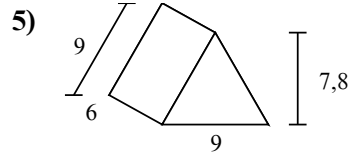
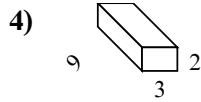
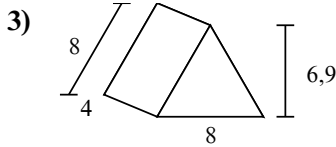
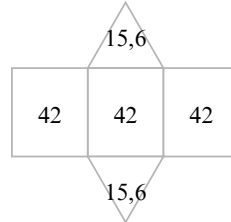
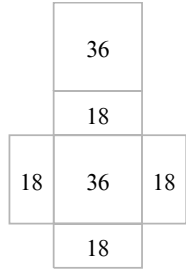
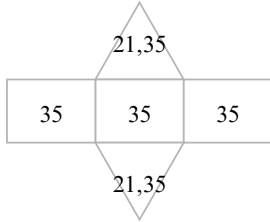
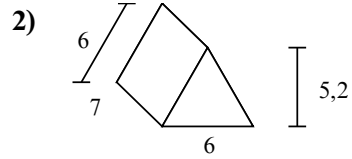
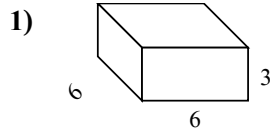
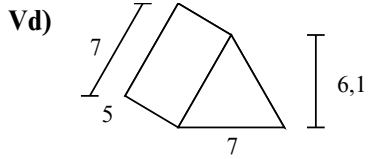
7. _____

8. _____





Tìm diện tích bề mặt của mỗi hình khối. Đơn vị tính bằng cm (không theo tỉ lệ).



Câu trả lời

Vd. **147,7 cm²**

1. **144 cm²**

2. **157,2 cm²**

3. **151,2 cm²**

4. **102 cm²**

5. **232,2 cm²**

6. **205,2 cm²**

7. **70,8 cm²**

8. **43,8 cm²**