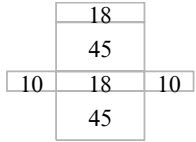
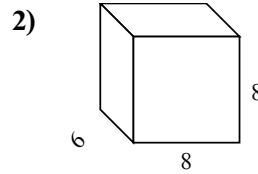
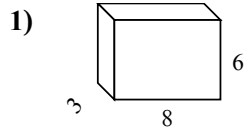
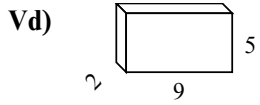




Tìm diện tích bề mặt của mỗi hình khối. Đơn vị tính bằng cm (không theo tỉ lệ).

Câu trả lời



Vd. 146 cm²

1. _____

2. _____

3. _____

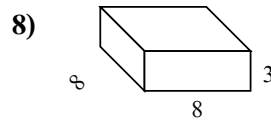
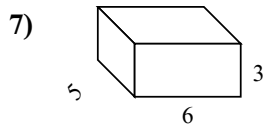
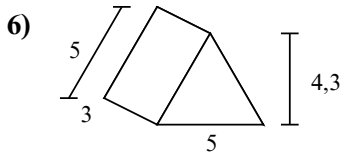
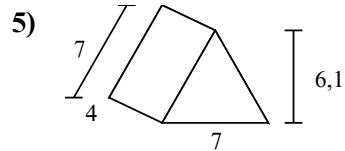
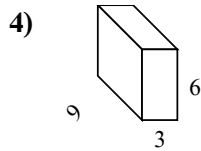
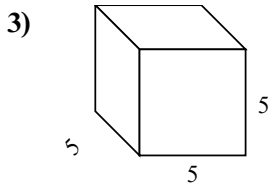
4. _____

5. _____

6. _____

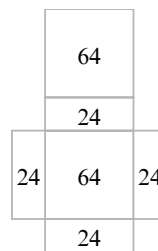
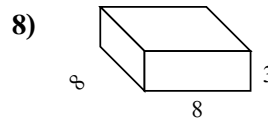
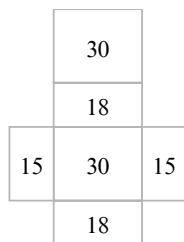
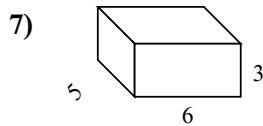
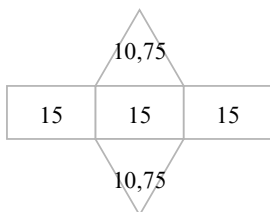
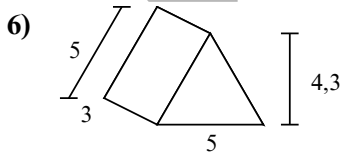
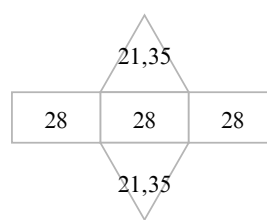
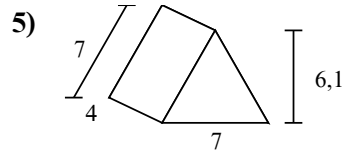
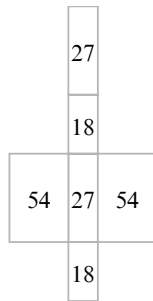
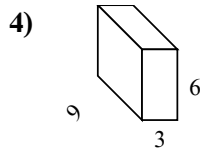
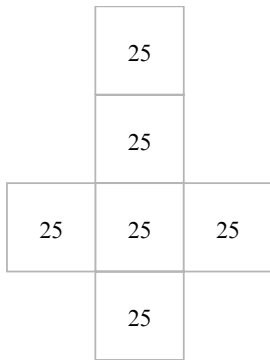
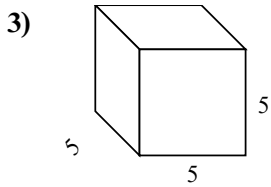
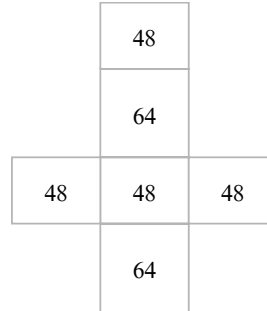
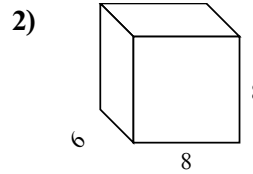
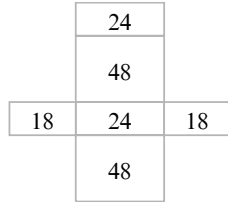
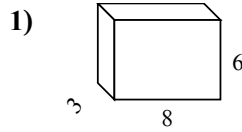
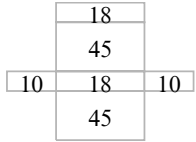
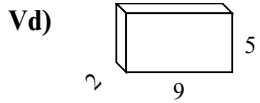
7. _____

8. _____





Tìm diện tích bề mặt của mỗi hình khối. Đơn vị tính bằng cm (không theo tỉ lệ).



Câu trả lời

Vd. **146 cm²**

1. **180 cm²**

2. **320 cm²**

3. **150 cm²**

4. **198 cm²**

5. **126,7 cm²**

6. **66,5 cm²**

7. **126 cm²**

8. **224 cm²**