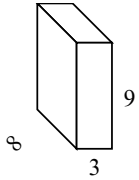




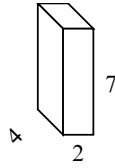
Tìm diện tích bề mặt của mỗi hình khối. Đơn vị tính bằng cm (không theo tỉ lệ).

Câu trả lời

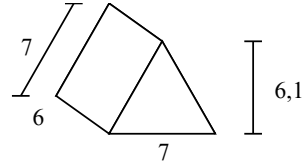
Vd)



1)



2)



Vd. **246 cm²**

1. _____

2. _____

3. _____

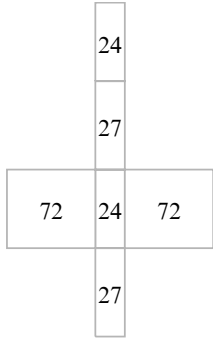
4. _____

5. _____

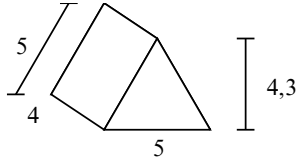
6. _____

7. _____

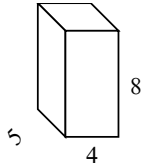
8. _____



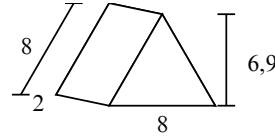
3)



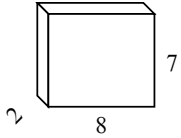
4)



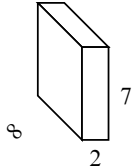
5)



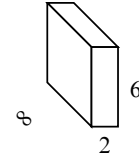
6)



7)



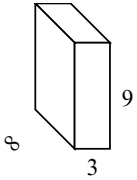
8)



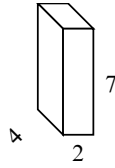


Tìm diện tích bề mặt của mỗi hình khối. Đơn vị tính bằng cm (không theo tỉ lệ).

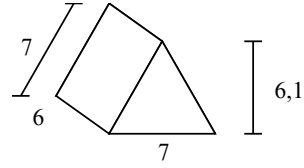
Vd)



1)



2)



Câu trả lời

Vd. **246 cm²**

1. **100 cm²**

2. **168,7 cm²**

3. **81,5 cm²**

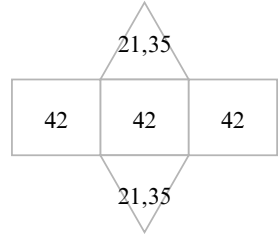
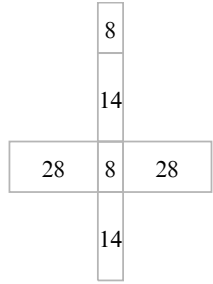
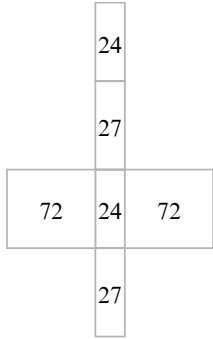
4. **184 cm²**

5. **103,2 cm²**

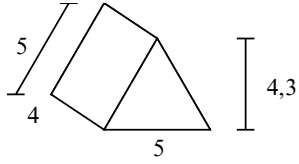
6. **172 cm²**

7. **172 cm²**

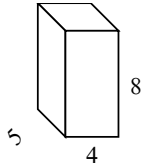
8. **152 cm²**



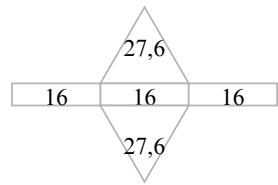
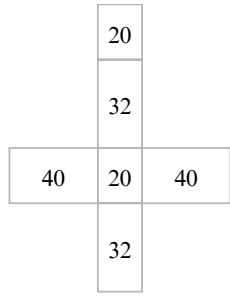
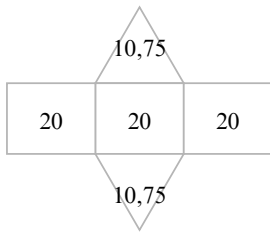
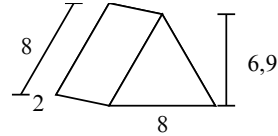
3)



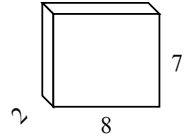
4)



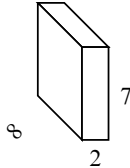
5)



6)



7)



8)

