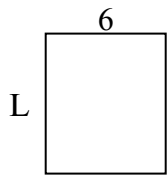


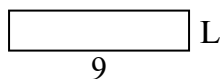


Xác định giá trị của 'L'.

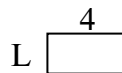
1) Diện tích = 42 cm^2



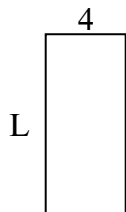
2) Diện tích = 18 cm^2



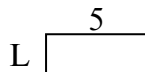
3) Diện tích = 8 cm^2



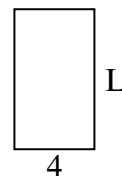
4) Diện tích = 36 cm^2



5) Diện tích = 10 cm^2



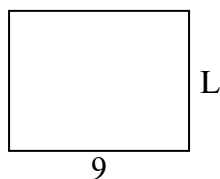
6) Diện tích = 28 cm^2



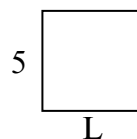
7) Diện tích = 12 cm^2



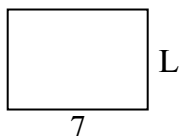
8) Diện tích = 63 cm^2




9) Diện tích = 25 cm^2



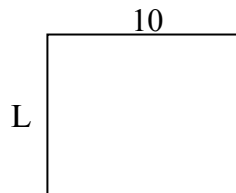
10) Diện tích = 35 cm^2



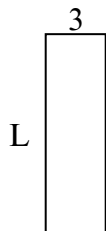
11) Diện tích = 24 cm^2



12) Diện tích = 80 cm^2



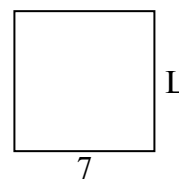
13) Diện tích = 30 cm^2



14) Diện tích = 4 cm^2



15) Diện tích = 49 cm^2



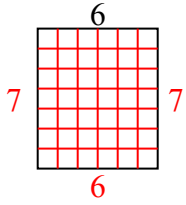
Câu trả lời

1. _____
2. _____
3. _____
4. _____
5. _____
6. _____
7. _____
8. _____
9. _____
10. _____
11. _____
12. _____
13. _____
14. _____
15. _____

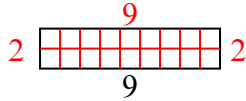


Xác định giá trị của 'L'.

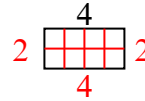
1) Diện tích = 42 cm^2



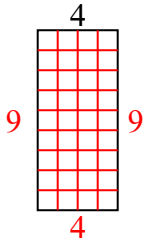
2) Diện tích = 18 cm^2



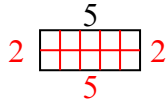
3) Diện tích = 8 cm^2



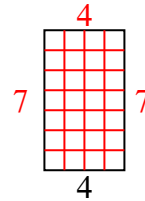
4) Diện tích = 36 cm^2



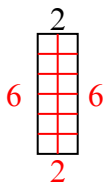
5) Diện tích = 10 cm^2



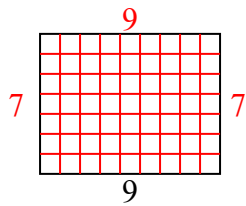
6) Diện tích = 28 cm^2



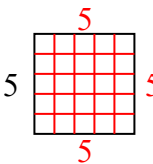
7) Diện tích = 12 cm^2



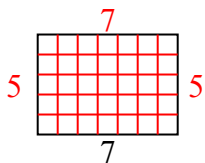
8) Diện tích = 63 cm^2



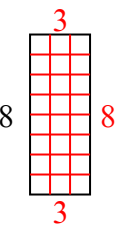
9) Diện tích = 25 cm^2



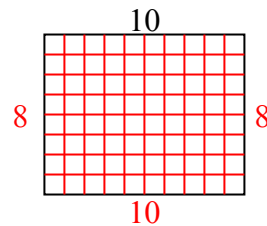
10) Diện tích = 35 cm^2



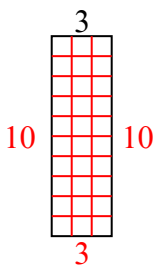
11) Diện tích = 24 cm^2



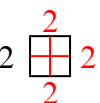
12) Diện tích = 80 cm^2



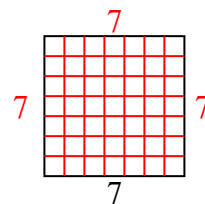
13) Diện tích = 30 cm^2



14) Diện tích = 4 cm^2



15) Diện tích = 49 cm^2



Câu trả lời

1. 7
2. 2
3. 2
4. 9
5. 2
6. 7
7. 6
8. 7
9. 5
10. 5
11. 3
12. 8
13. 10
14. 2
15. 7