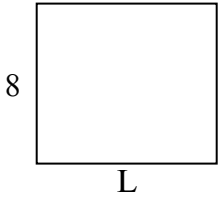





Xác định giá trị của 'L'.

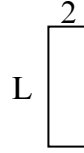
1) Diện tích =  $72 \text{ cm}^2$



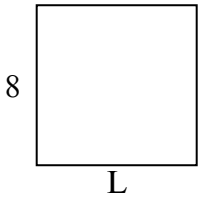
2) Diện tích =  $32 \text{ cm}^2$



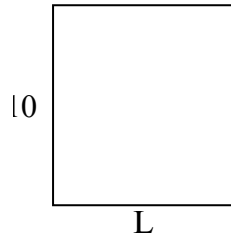
3) Diện tích =  $12 \text{ cm}^2$



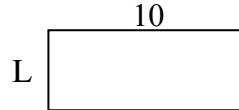
4) Diện tích =  $64 \text{ cm}^2$




5) Diện tích =  $90 \text{ cm}^2$



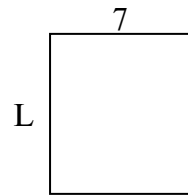
6) Diện tích =  $40 \text{ cm}^2$



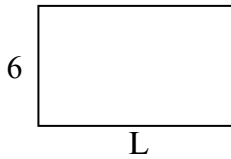
7) Diện tích =  $36 \text{ cm}^2$



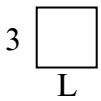
8) Diện tích =  $56 \text{ cm}^2$



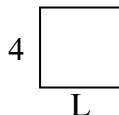
9) Diện tích =  $60 \text{ cm}^2$



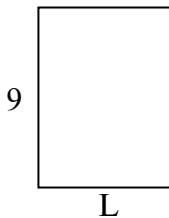
10) Diện tích =  $9 \text{ cm}^2$



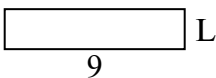
11) Diện tích =  $16 \text{ cm}^2$



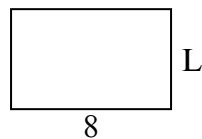
12) Diện tích =  $63 \text{ cm}^2$



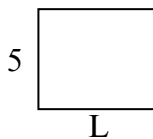
13) Diện tích =  $18 \text{ cm}^2$



14) Diện tích =  $40 \text{ cm}^2$



15) Diện tích =  $30 \text{ cm}^2$



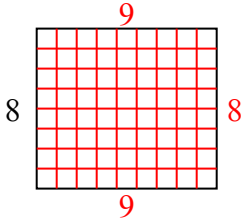
**Câu trả lời**

1. \_\_\_\_\_
2. \_\_\_\_\_
3. \_\_\_\_\_
4. \_\_\_\_\_
5. \_\_\_\_\_
6. \_\_\_\_\_
7. \_\_\_\_\_
8. \_\_\_\_\_
9. \_\_\_\_\_
10. \_\_\_\_\_
11. \_\_\_\_\_
12. \_\_\_\_\_
13. \_\_\_\_\_
14. \_\_\_\_\_
15. \_\_\_\_\_

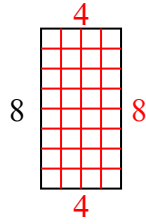


Xác định giá trị của 'L'.

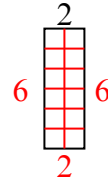
1) Diện tích =  $72 \text{ cm}^2$



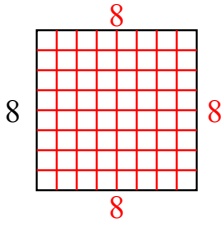
2) Diện tích =  $32 \text{ cm}^2$



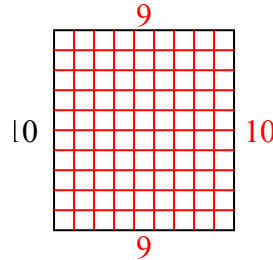
3) Diện tích =  $12 \text{ cm}^2$



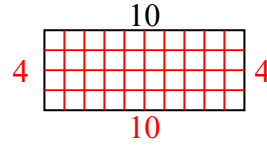
4) Diện tích =  $64 \text{ cm}^2$



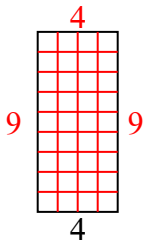
5) Diện tích =  $90 \text{ cm}^2$



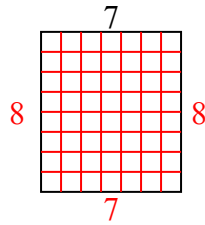
6) Diện tích =  $40 \text{ cm}^2$



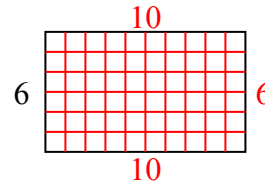
7) Diện tích =  $36 \text{ cm}^2$



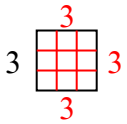
8) Diện tích =  $56 \text{ cm}^2$



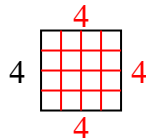
9) Diện tích =  $60 \text{ cm}^2$



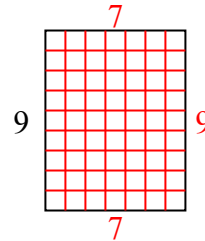
10) Diện tích =  $9 \text{ cm}^2$



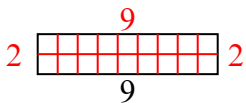
11) Diện tích =  $16 \text{ cm}^2$



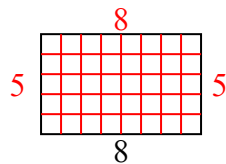
12) Diện tích =  $63 \text{ cm}^2$



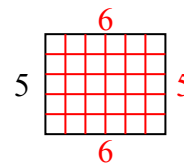
13) Diện tích =  $18 \text{ cm}^2$



14) Diện tích =  $40 \text{ cm}^2$



15) Diện tích =  $30 \text{ cm}^2$



**Câu trả lời**

1. 9
2. 4
3. 6
4. 8
5. 9
6. 4
7. 9
8. 8
9. 10
10. 3
11. 4
12. 7
13. 2
14. 5
15. 6