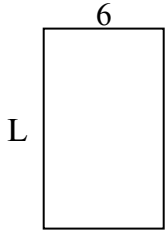


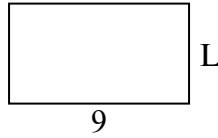


Xác định giá trị của 'L'.

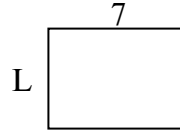
1) Diện tích =  $60 \text{ cm}^2$



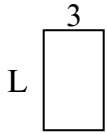
2) Diện tích =  $45 \text{ cm}^2$



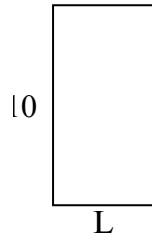
3) Diện tích =  $35 \text{ cm}^2$



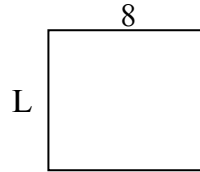
4) Diện tích =  $15 \text{ cm}^2$



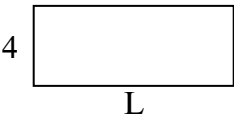
5) Diện tích =  $50 \text{ cm}^2$



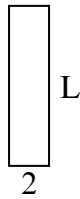
6) Diện tích =  $56 \text{ cm}^2$



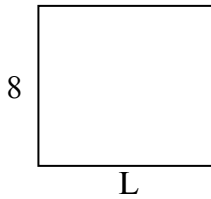
7) Diện tích =  $40 \text{ cm}^2$



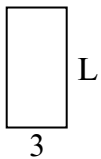
8) Diện tích =  $16 \text{ cm}^2$



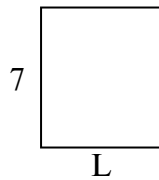
9) Diện tích =  $72 \text{ cm}^2$



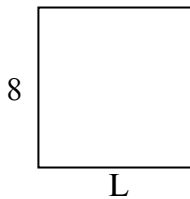
10) Diện tích =  $18 \text{ cm}^2$



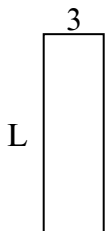
11) Diện tích =  $42 \text{ cm}^2$




12) Diện tích =  $64 \text{ cm}^2$




13) Diện tích =  $30 \text{ cm}^2$



14) Diện tích =  $36 \text{ cm}^2$



15) Diện tích =  $63 \text{ cm}^2$



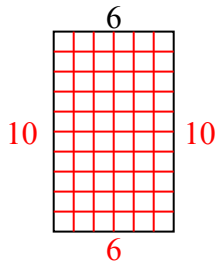
**Câu trả lời**

1. \_\_\_\_\_
2. \_\_\_\_\_
3. \_\_\_\_\_
4. \_\_\_\_\_
5. \_\_\_\_\_
6. \_\_\_\_\_
7. \_\_\_\_\_
8. \_\_\_\_\_
9. \_\_\_\_\_
10. \_\_\_\_\_
11. \_\_\_\_\_
12. \_\_\_\_\_
13. \_\_\_\_\_
14. \_\_\_\_\_
15. \_\_\_\_\_

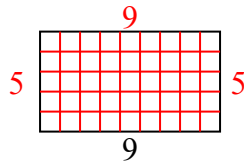


Xác định giá trị của 'L'.

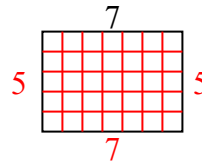
1) Diện tích =  $60 \text{ cm}^2$



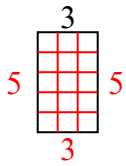
2) Diện tích =  $45 \text{ cm}^2$



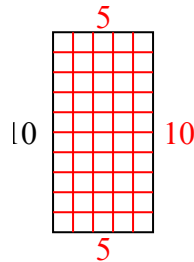
3) Diện tích =  $35 \text{ cm}^2$



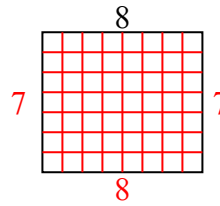
4) Diện tích =  $15 \text{ cm}^2$



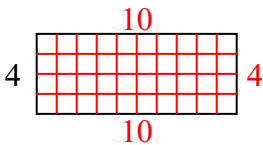
5) Diện tích =  $50 \text{ cm}^2$



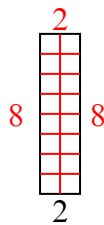
6) Diện tích =  $56 \text{ cm}^2$



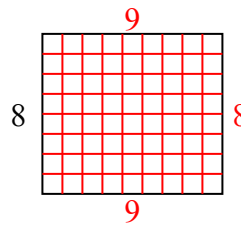
7) Diện tích =  $40 \text{ cm}^2$



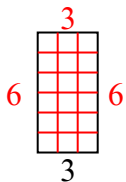
8) Diện tích =  $16 \text{ cm}^2$



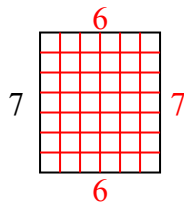
9) Diện tích =  $72 \text{ cm}^2$



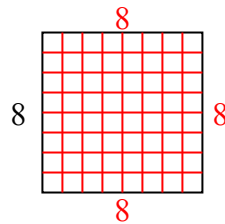
10) Diện tích =  $18 \text{ cm}^2$



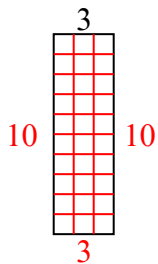
11) Diện tích =  $42 \text{ cm}^2$



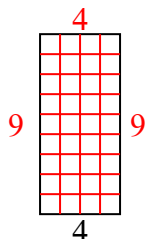
12) Diện tích =  $64 \text{ cm}^2$



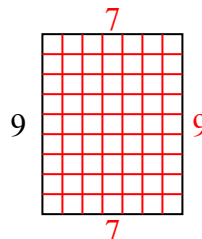
13) Diện tích =  $30 \text{ cm}^2$



14) Diện tích =  $36 \text{ cm}^2$



15) Diện tích =  $63 \text{ cm}^2$



**Câu trả lời**

1. 10
2. 5
3. 5
4. 5
5. 5
6. 7
7. 10
8. 8
9. 9
10. 6
11. 6
12. 8
13. 10
14. 9
15. 7