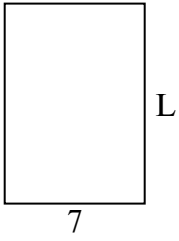





Xác định giá trị của 'L'.

1) Diện tích = 70 cm^2



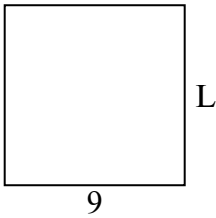
2) Diện tích = 21 cm^2



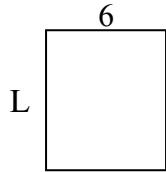
3) Diện tích = 24 cm^2



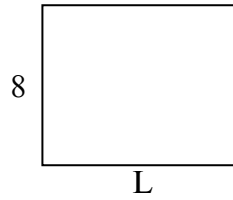
4) Diện tích = 81 cm^2



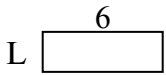
5) Diện tích = 42 cm^2



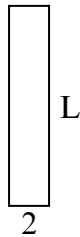
6) Diện tích = 80 cm^2



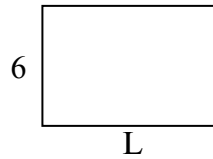
7) Diện tích = 12 cm^2



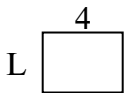
8) Diện tích = 20 cm^2



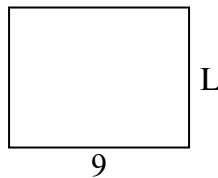
9) Diện tích = 54 cm^2



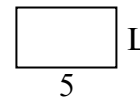
10) Diện tích = 12 cm^2



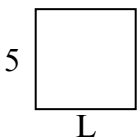
11) Diện tích = 63 cm^2



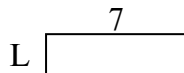
12) Diện tích = 15 cm^2



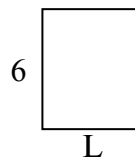
13) Diện tích = 25 cm^2



14) Diện tích = 14 cm^2



15) Diện tích = 30 cm^2



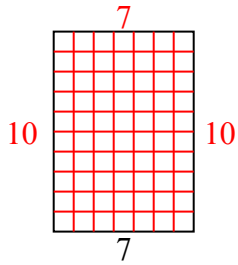
Câu trả lời

1. _____
2. _____
3. _____
4. _____
5. _____
6. _____
7. _____
8. _____
9. _____
10. _____
11. _____
12. _____
13. _____
14. _____
15. _____

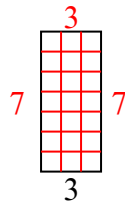


Xác định giá trị của 'L'.

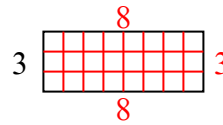
1) Diện tích = 70 cm^2



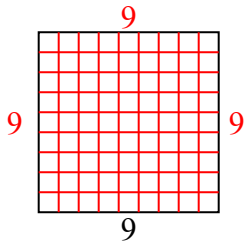
2) Diện tích = 21 cm^2



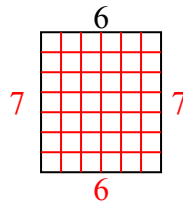
3) Diện tích = 24 cm^2



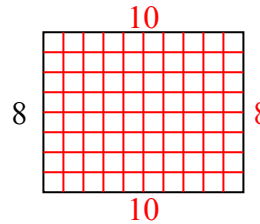
4) Diện tích = 81 cm^2



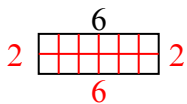
5) Diện tích = 42 cm^2



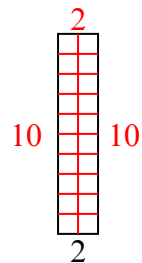
6) Diện tích = 80 cm^2



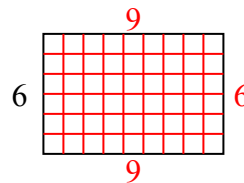
7) Diện tích = 12 cm^2



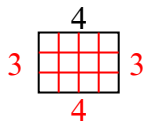
8) Diện tích = 20 cm^2



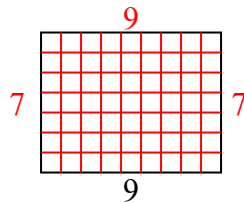
9) Diện tích = 54 cm^2



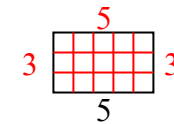
10) Diện tích = 12 cm^2



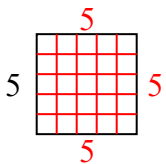
11) Diện tích = 63 cm^2



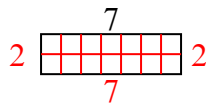
12) Diện tích = 15 cm^2



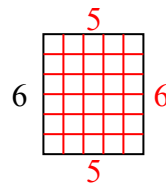
13) Diện tích = 25 cm^2



14) Diện tích = 14 cm^2



15) Diện tích = 30 cm^2



Câu trả lời

1. 10
2. 7
3. 8
4. 9
5. 7
6. 10
7. 2
8. 10
9. 9
10. 3
11. 7
12. 3
13. 5
14. 2
15. 5