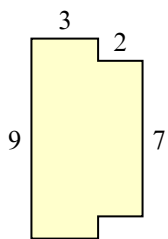


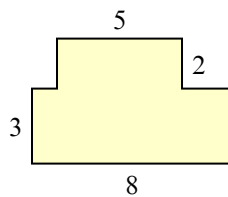


Tìm tổng diện tích của mỗi hình. Đo bằng millimet (mm). Không theo tỉ lệ.

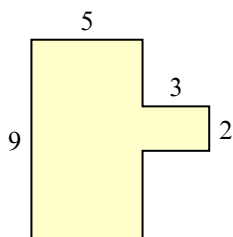
1)



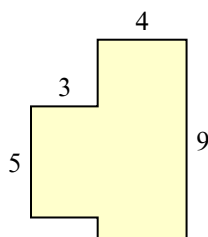
2)



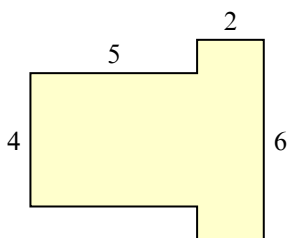
3)



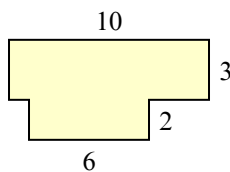
4)



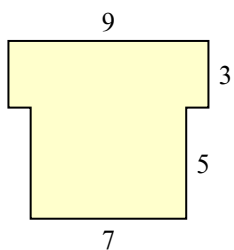
5)



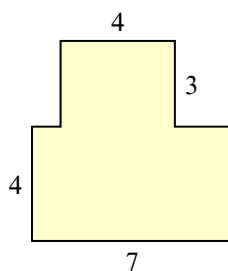
6)



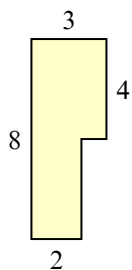
7)



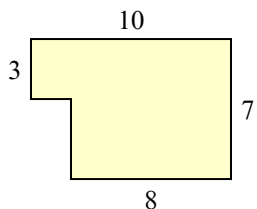
8)



9)



10)



Câu trả lời

1. _____

2. _____

3. _____

4. _____

5. _____

6. _____

7. _____

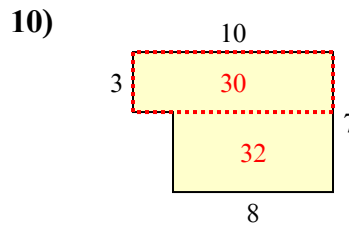
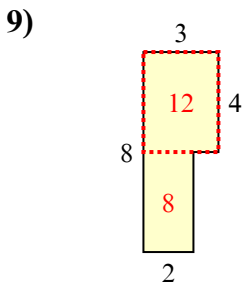
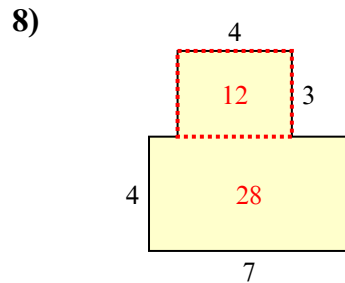
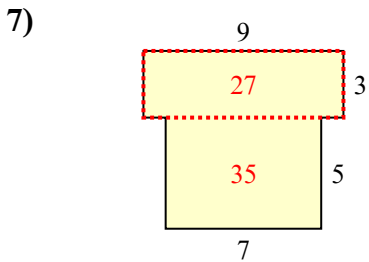
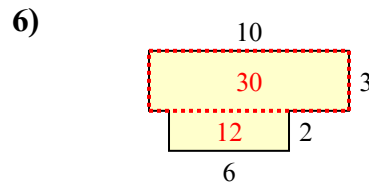
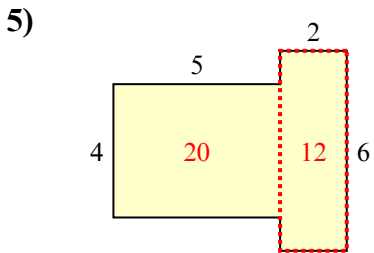
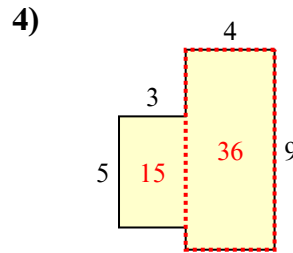
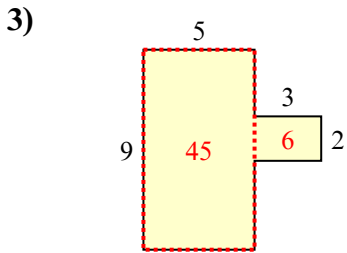
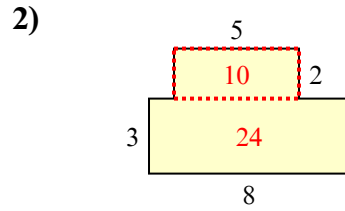
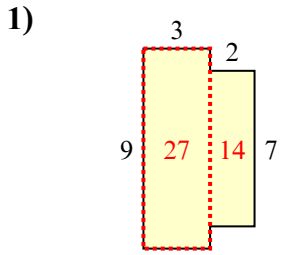
8. _____

9. _____

10. _____



Tìm tổng diện tích của mỗi hình. Đo bằng millimet (mm). Không theo tỉ lệ.



Câu trả lời

1. 41 mm²
2. 34 mm²
3. 51 mm²
4. 51 mm²
5. 32 mm²
6. 42 mm²
7. 62 mm²
8. 40 mm²
9. 20 mm²
10. 62 mm²