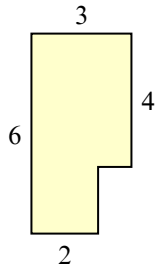


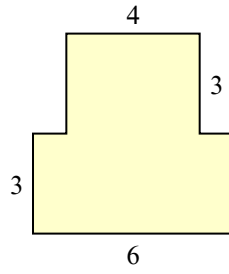


Tìm tổng diện tích của mỗi hình. Đo bằng millimet (mm). Không theo tỉ lệ.

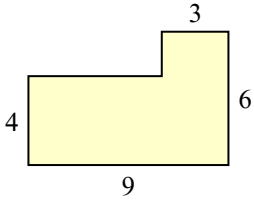
1)



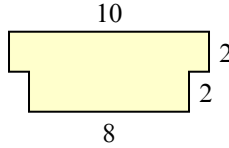
2)



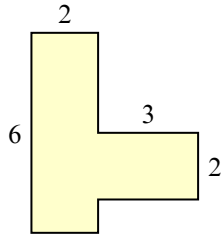
3)



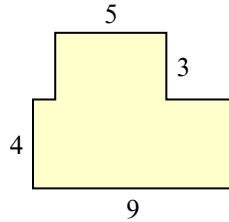
4)



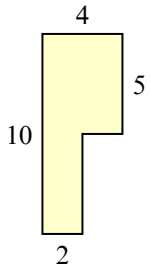
5)



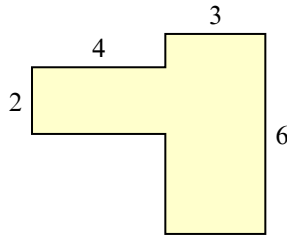
6)



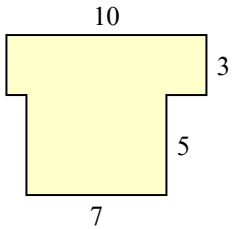
7)



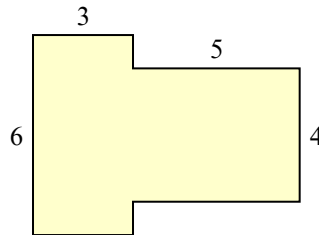
8)



9)



10)

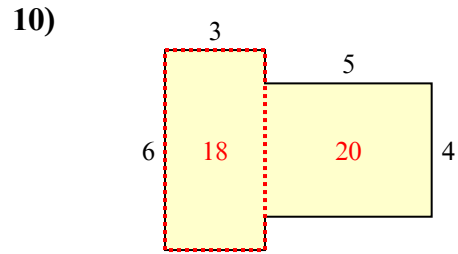
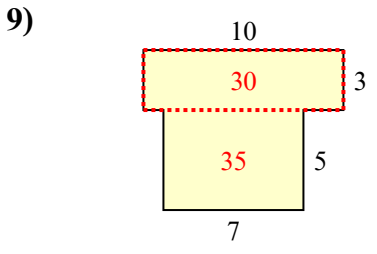
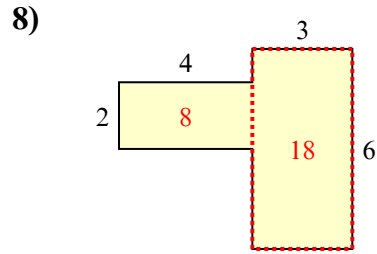
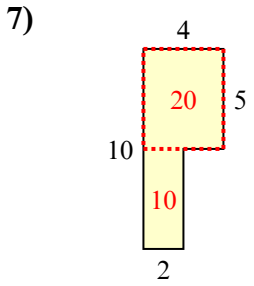
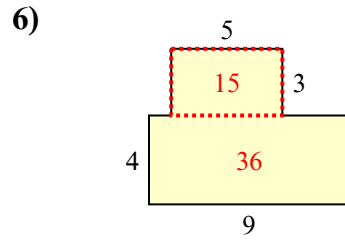
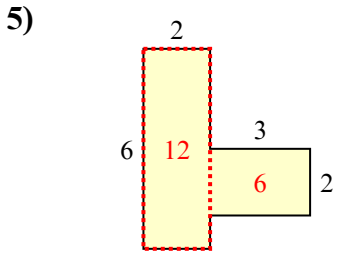
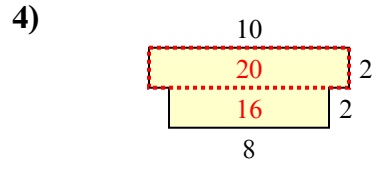
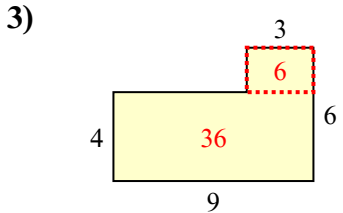
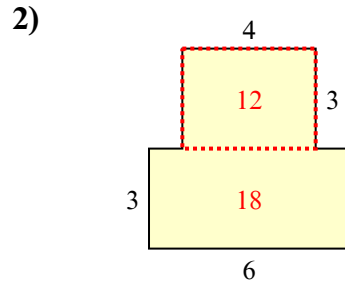
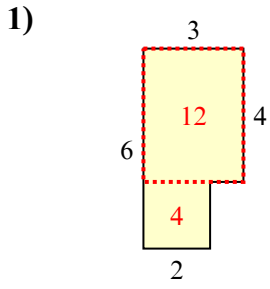


**Câu trả lời**

- 1. \_\_\_\_\_
- 2. \_\_\_\_\_
- 3. \_\_\_\_\_
- 4. \_\_\_\_\_
- 5. \_\_\_\_\_
- 6. \_\_\_\_\_
- 7. \_\_\_\_\_
- 8. \_\_\_\_\_
- 9. \_\_\_\_\_
- 10. \_\_\_\_\_



Tìm tổng diện tích của mỗi hình. Đo bằng millimet (mm). Không theo tỉ lệ.



**Câu trả lời**

1. 16 mm<sup>2</sup>

2. 30 mm<sup>2</sup>

3. 42 mm<sup>2</sup>

4. 36 mm<sup>2</sup>

5. 18 mm<sup>2</sup>

6. 51 mm<sup>2</sup>

7. 30 mm<sup>2</sup>

8. 26 mm<sup>2</sup>

9. 65 mm<sup>2</sup>

10. 38 mm<sup>2</sup>