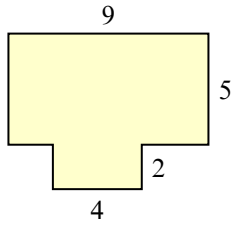


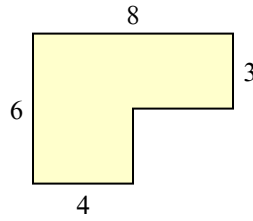


Tìm tổng diện tích của mỗi hình. Đo bằng millimet (mm). Không theo tỉ lệ.

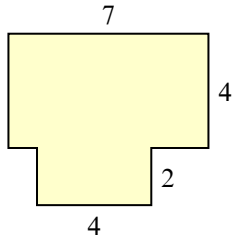
1)



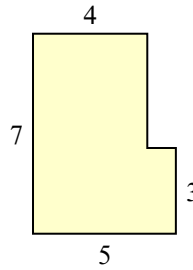
2)



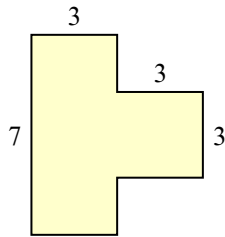
3)



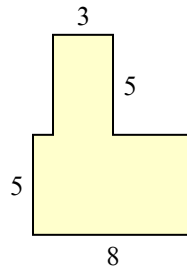
4)



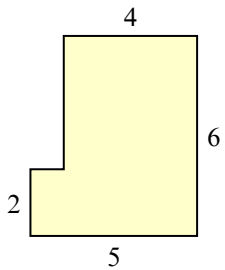
5)



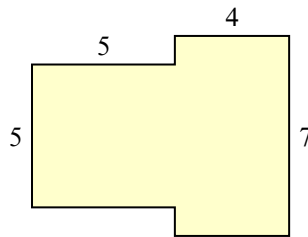
6)



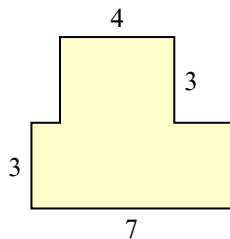
7)



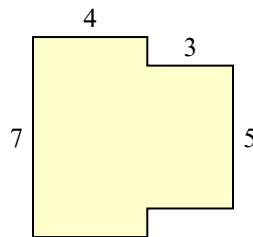
8)



9)



10)

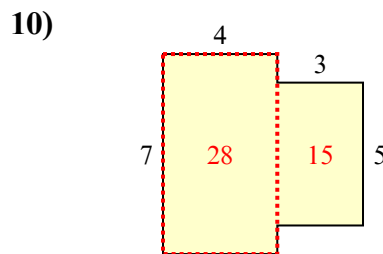
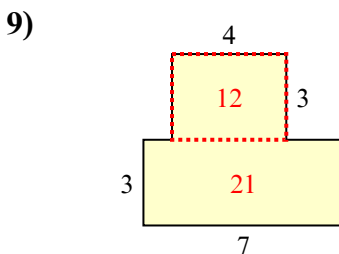
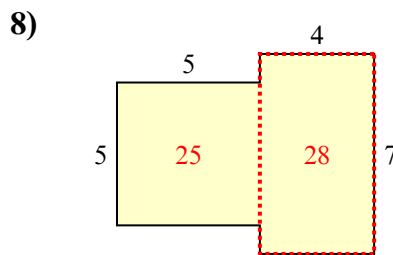
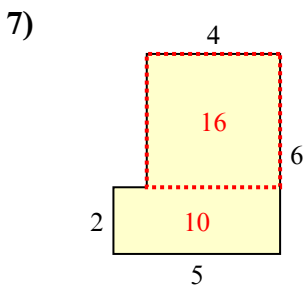
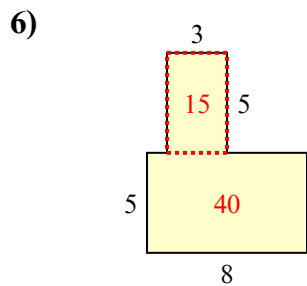
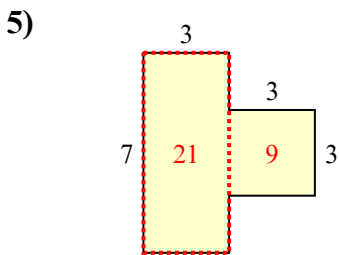
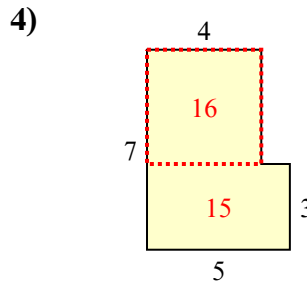
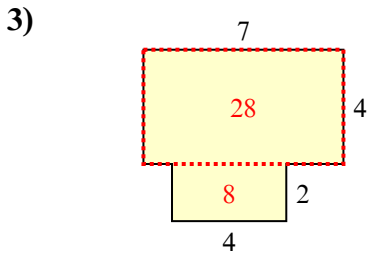
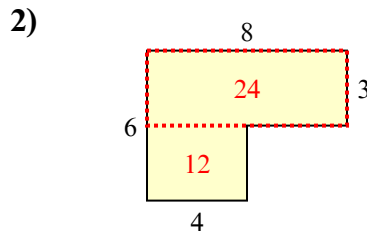
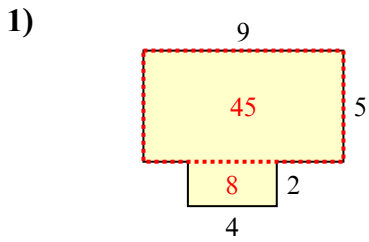


Câu trả lời

1. _____
2. _____
3. _____
4. _____
5. _____
6. _____
7. _____
8. _____
9. _____
10. _____



Tìm tổng diện tích của mỗi hình. Đo bằng millimet (mm). Không theo tỉ lệ.



Câu trả lời

1. 53 mm²
2. 36 mm²
3. 36 mm²
4. 31 mm²
5. 30 mm²
6. 55 mm²
7. 26 mm²
8. 53 mm²
9. 33 mm²
10. 43 mm²