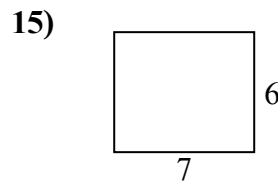
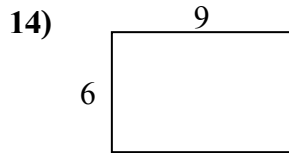
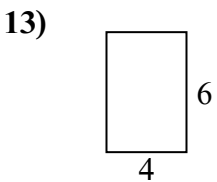
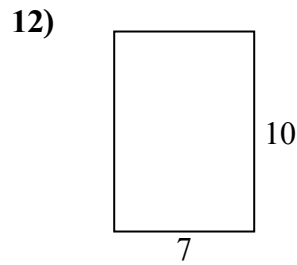
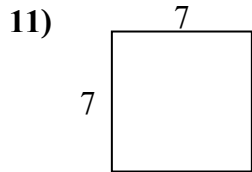
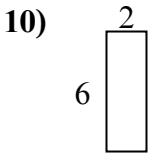
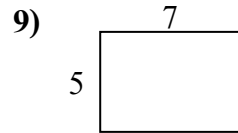
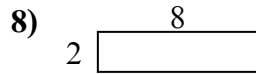
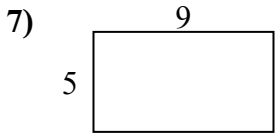
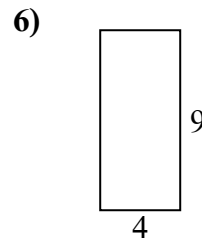
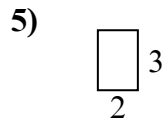
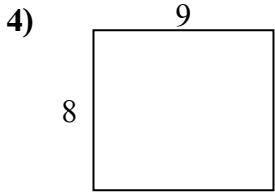
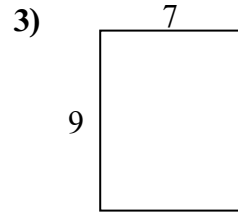
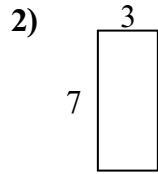
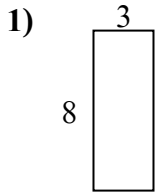




Tìm chu vi và diện tích của mỗi hình. Mỗi hình tính bằng centimet (cm). Không theo tỉ lệ.

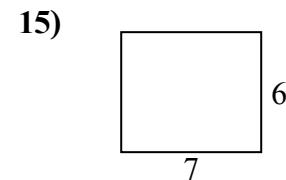
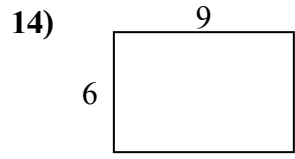
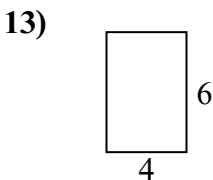
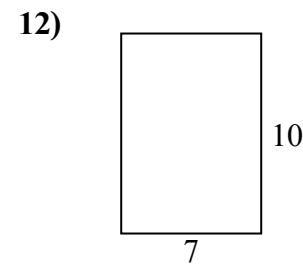
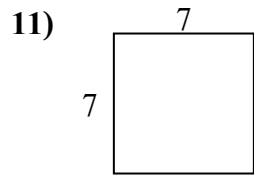
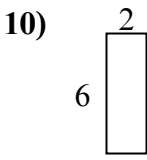
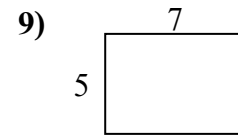
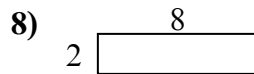
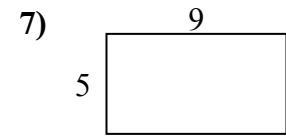
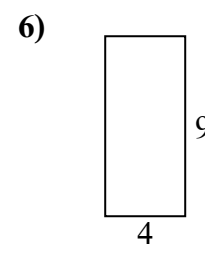
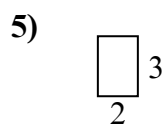
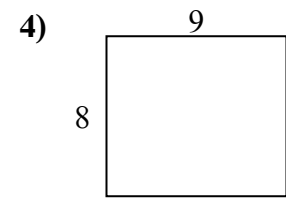
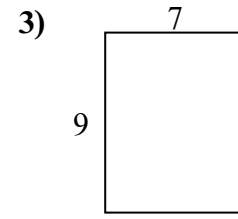
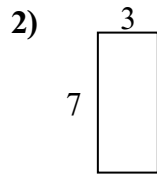
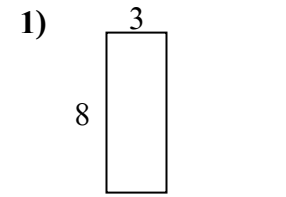
Câu trả lời



1. _____
2. _____
3. _____
4. _____
5. _____
6. _____
7. _____
8. _____
9. _____
10. _____
11. _____
12. _____
13. _____
14. _____
15. _____



Tìm chu vi và diện tích của mỗi hình. Mỗi hình tính bằng centimet (cm). Không theo tỉ lệ.



Câu trả lời

1. 22 cm 24 cm²
2. 20 cm 21 cm²
3. 32 cm 63 cm²
4. 34 cm 72 cm²
5. 10 cm 6 cm²
6. 26 cm 36 cm²
7. 28 cm 45 cm²
8. 20 cm 16 cm²
9. 24 cm 35 cm²
10. 16 cm 12 cm²
11. 28 cm 49 cm²
12. 34 cm 70 cm²
13. 20 cm 24 cm²
14. 30 cm 54 cm²
15. 26 cm 42 cm²