




Hãy xác định xem hình tam giác đã cho có phải là tam giác vuông (Có) hay không (Không)

Câu trả lời

1)



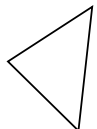
2)



3)



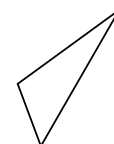
4)




5)



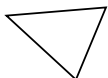
6)



7)



8)



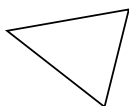
9)



10)



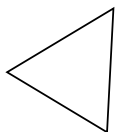
11)



12)



13)



14)



15)



1. _____

2. _____

3. _____

4. _____

5. _____

6. _____

7. _____

8. _____

9. _____

10. _____

11. _____

12. _____

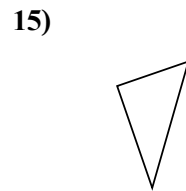
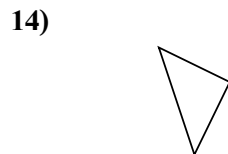
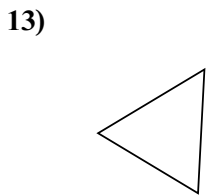
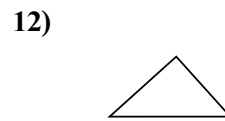
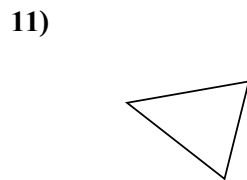

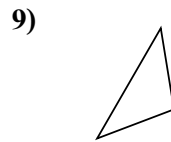
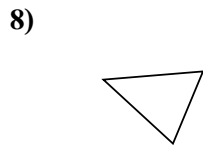
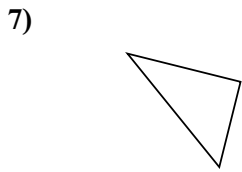
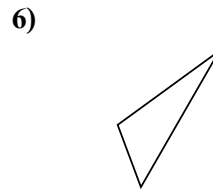
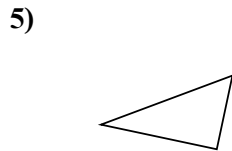
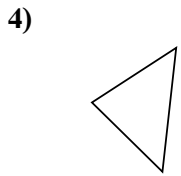
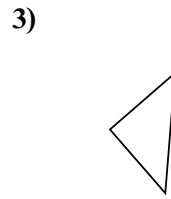
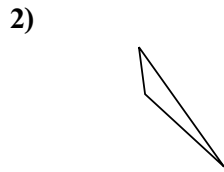
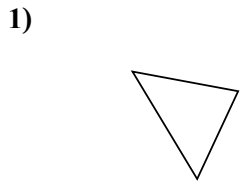
13. _____

14. _____

15. _____



Hãy xác định xem hình tam giác đã cho có phải là tam giác vuông (Có) hay không (Không)



Câu trả lời

1. Không

2. Không

3. Có

4. Không

5. Có

6. Không

7. Có

8. Không

9. Không

10. Không

11. Không

12. Có

13. Không

14. Có

15. Có