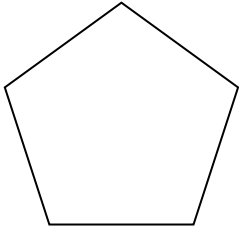





Hãy xác định các hình dạng được cho

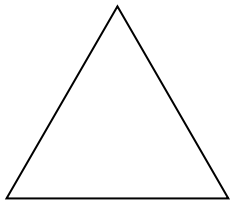
1)



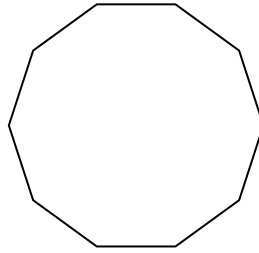
2)



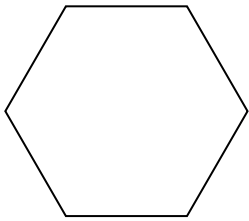
3)



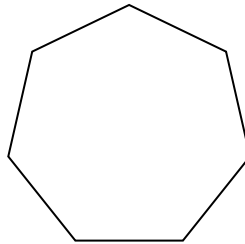
4)



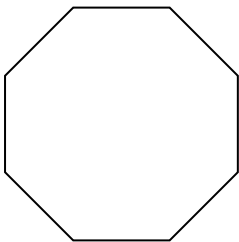
5)



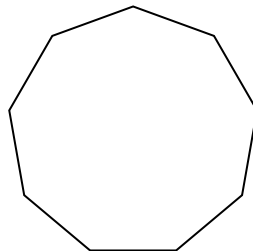
6)



7)



8)



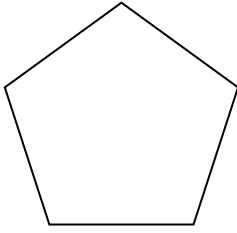
Câu trả lời

- 1. _____
- 2. _____
- 3. _____
- 4. _____
- 5. _____
- 6. _____
- 7. _____
- 8. _____




Hãy xác định các hình dạng được cho

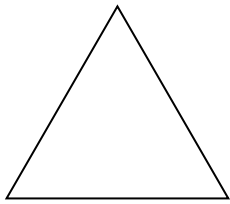
1)



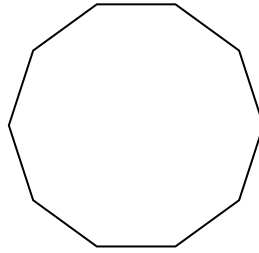
2)



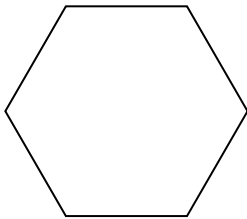
3)



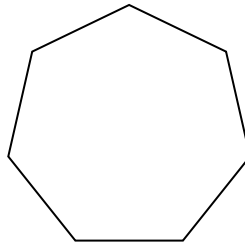
4)



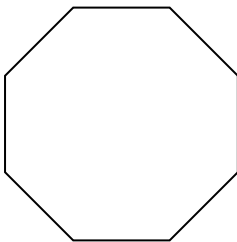
5)



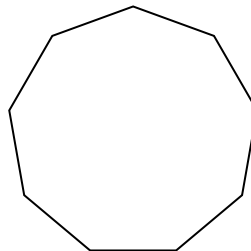
6)



7)



8)



Câu trả lời

1. Ngũ giác

2. Tứ giác

3. triangle

4. Thập giác

5. Lục giác

6. Thất giác

7. Bát giác

8. Cửu giác